

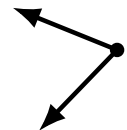
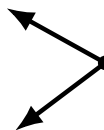
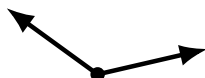
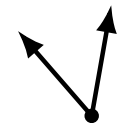
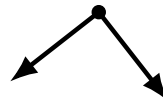
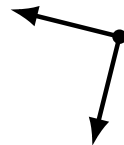
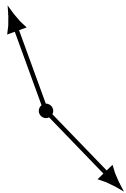
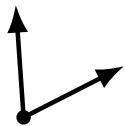
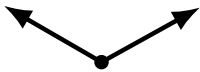
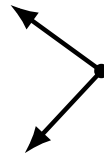
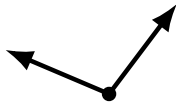
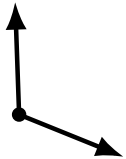
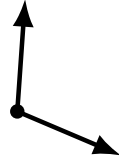
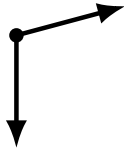
Identifying Angle Types (E)

Name: _____

Date: _____

Score: _____

Identify each angle as acute, obtuse or right.



Identifying Angle Types (E) Answers

Name: _____

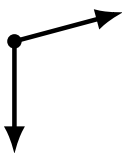
Date: _____

Score: _____

Identify each angle as acute, obtuse or right.



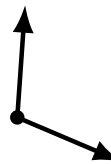
acute



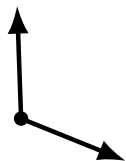
obtuse



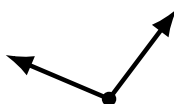
obtuse



obtuse



obtuse



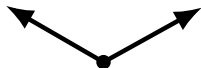
obtuse



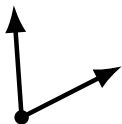
acute



acute



obtuse



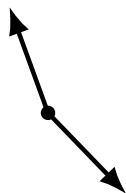
acute



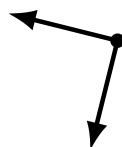
obtuse



acute



obtuse



right



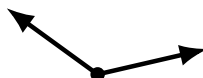
right



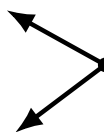
acute



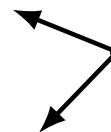
acute



obtuse



acute



acute