

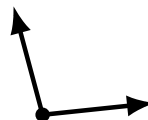
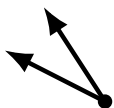
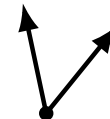
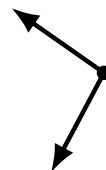
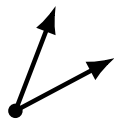
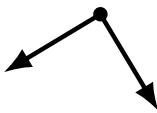
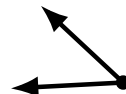
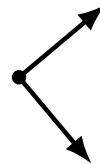
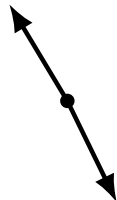
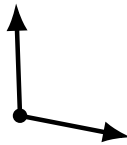
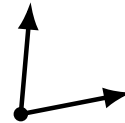
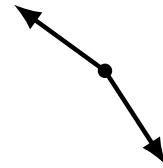
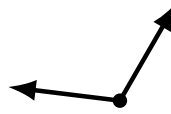
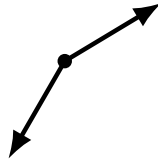
Identifying Angle Types (D)

Name: _____

Date: _____

Score: _____

Identify each angle as acute, obtuse or right.



Identifying Angle Types (D) Answers

Name: _____

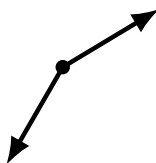
Date: _____

Score: _____

Identify each angle as acute, obtuse or right.



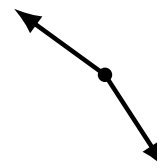
acute



obtuse



obtuse



obtuse



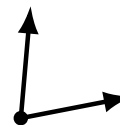
acute



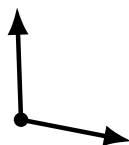
obtuse



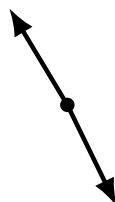
acute



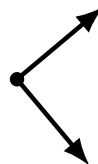
acute




obtuse



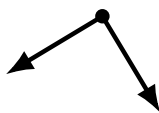
obtuse



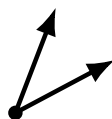
right



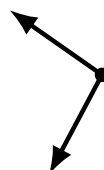
acute



right



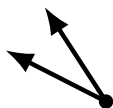
acute



obtuse



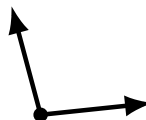
acute



acute



obtuse



obtuse



acute