

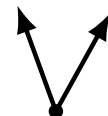
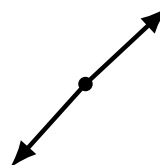
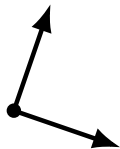
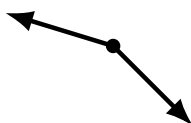
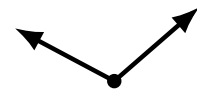
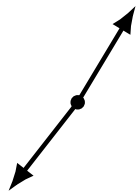
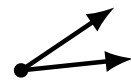
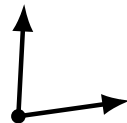
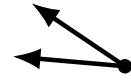
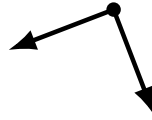
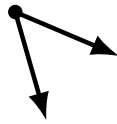
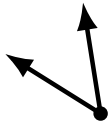
# Identifying Angle Types (C)

Name: \_\_\_\_\_

Date: \_\_\_\_\_

Score: \_\_\_\_\_

Identify each angle as acute, obtuse or right.



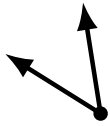
# Identifying Angle Types (C) Answers

Name: \_\_\_\_\_

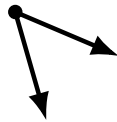
Date: \_\_\_\_\_

Score: \_\_\_\_\_

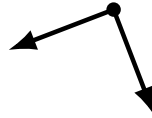
Identify each angle as acute, obtuse or right.



acute



acute



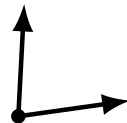
right



acute



acute



acute



acute



acute



obtuse



obtuse



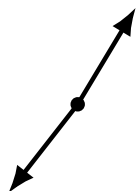
obtuse



obtuse



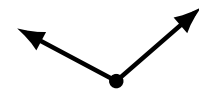
obtuse



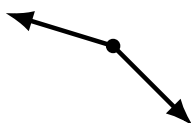
obtuse



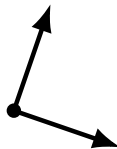
acute



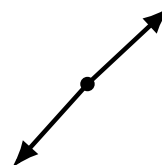
obtuse



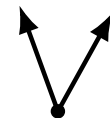
obtuse



right



obtuse



acute