

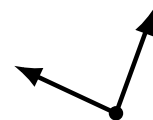
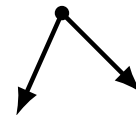
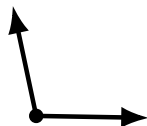
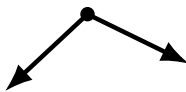
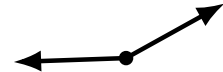
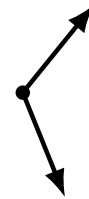
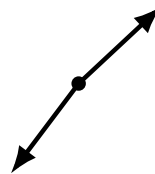
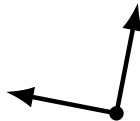
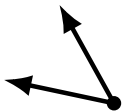
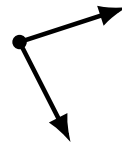
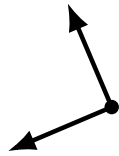
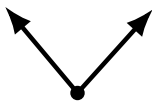
# Identifying Angle Types (B)

Name: \_\_\_\_\_

Date: \_\_\_\_\_

Score: \_\_\_\_\_

Identify each angle as acute, obtuse or right.



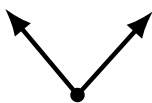
# Identifying Angle Types (B) Answers

Name: \_\_\_\_\_

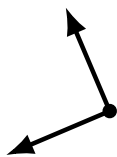
Date: \_\_\_\_\_

Score: \_\_\_\_\_

Identify each angle as acute, obtuse or right.



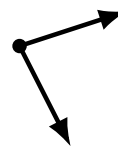
acute



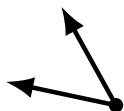
right



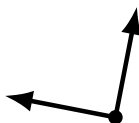
acute



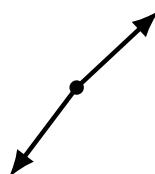
acute



acute



right



obtuse



obtuse



acute



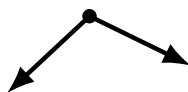
acute



obtuse



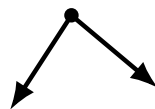
obtuse



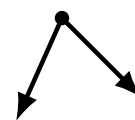
obtuse



obtuse



acute



acute



obtuse



obtuse



obtuse



acute