

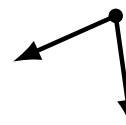
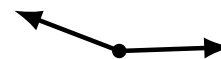
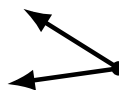
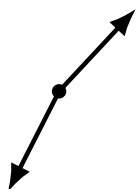

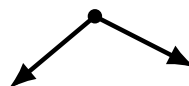

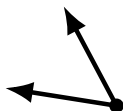
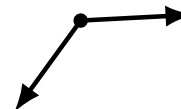
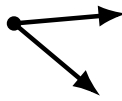
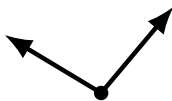
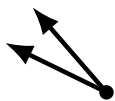
# Identifying Angle Types (J)

Name: \_\_\_\_\_

Date: \_\_\_\_\_

Score: \_\_\_\_\_

Identify each angle as acute or obtuse.



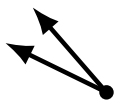
# Identifying Angle Types (J) Answers

Name: \_\_\_\_\_

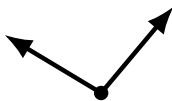
Date: \_\_\_\_\_

Score: \_\_\_\_\_

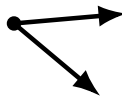
Identify each angle as acute or obtuse.



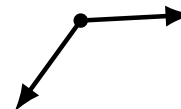
acute



obtuse



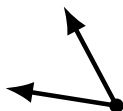
acute



obtuse



obtuse




acute



acute



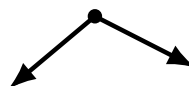
acute



obtuse



acute



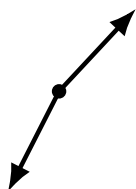
obtuse



obtuse



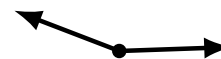
acute



obtuse



acute



obtuse



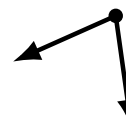
obtuse



obtuse



acute



acute