

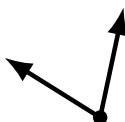
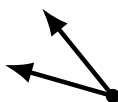
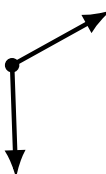
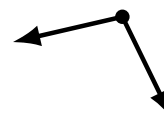
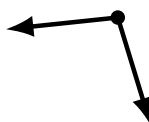
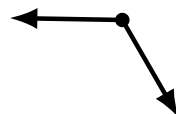
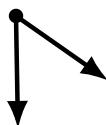
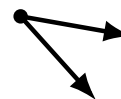
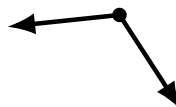
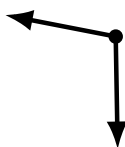
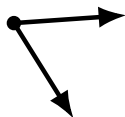
Identifying Angle Types (I)

Name: _____

Date: _____

Score: _____

Identify each angle as acute or obtuse.



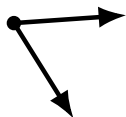
Identifying Angle Types (I) Answers

Name: _____

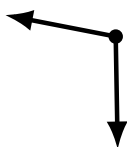
Date: _____

Score: _____

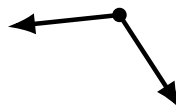
Identify each angle as acute or obtuse.



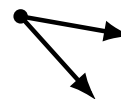
acute



obtuse



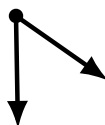
obtuse



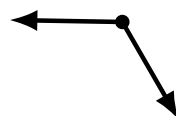
acute



obtuse



acute



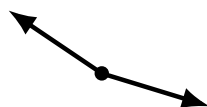
obtuse



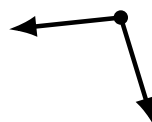
acute



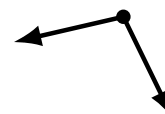
acute



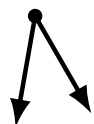
obtuse



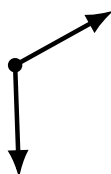
obtuse



obtuse



acute



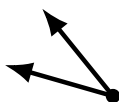
obtuse



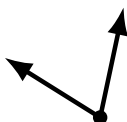
acute



acute



acute



acute



obtuse



obtuse