

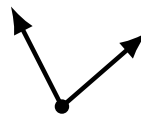
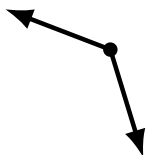
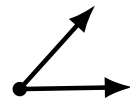
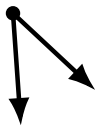
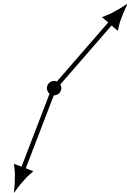
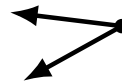
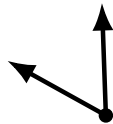
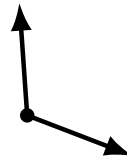
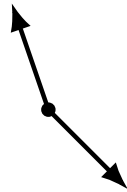
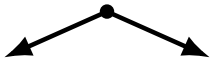
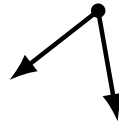
Identifying Angle Types (H)

Name: _____

Date: _____

Score: _____

Identify each angle as acute or obtuse.



Identifying Angle Types (H) Answers

Name: _____

Date: _____

Score: _____

Identify each angle as acute or obtuse.



acute



acute



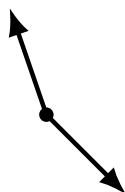
acute



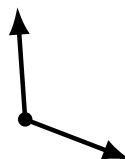
obtuse



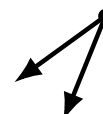
obtuse



obtuse



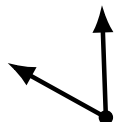
obtuse



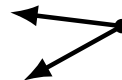
acute



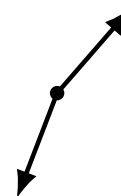
acute



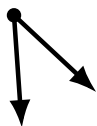
acute



acute



obtuse



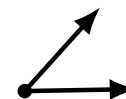
acute



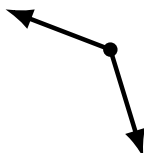
obtuse



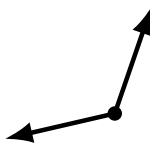
obtuse



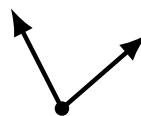
acute



obtuse



obtuse



acute



obtuse