

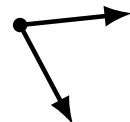
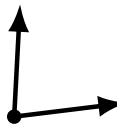
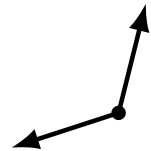

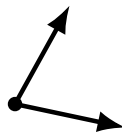
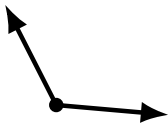
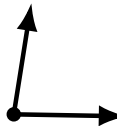

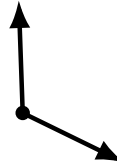
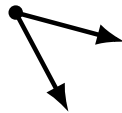
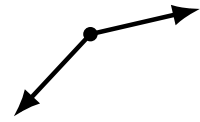
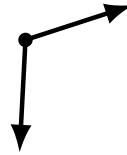
Identifying Angle Types (G)

Name: _____

Date: _____

Score: _____

Identify each angle as acute or obtuse.



Identifying Angle Types (G) Answers

Name: _____

Date: _____

Score: _____

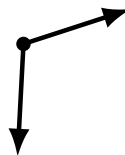
Identify each angle as acute or obtuse.



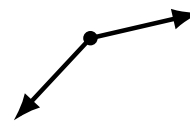
obtuse



obtuse



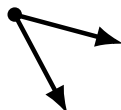
obtuse



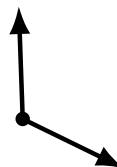
obtuse




acute



acute



obtuse



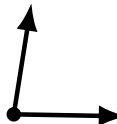
acute



acute



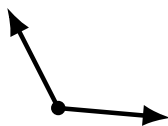
obtuse



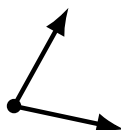
acute



acute



obtuse



acute



obtuse



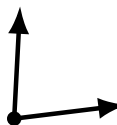
obtuse



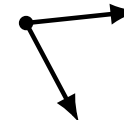
obtuse



acute



acute



acute