

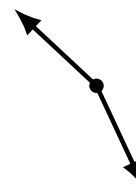
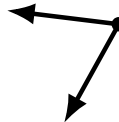
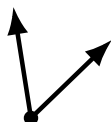

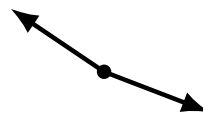
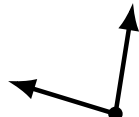
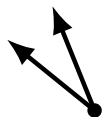


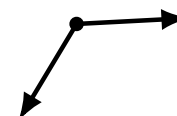
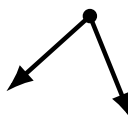
Identifying Angle Types (F)

Name: _____

Date: _____

Score: _____

Identify each angle as acute or obtuse.



Identifying Angle Types (F) Answers

Name: _____

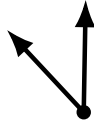
Date: _____

Score: _____

Identify each angle as acute or obtuse.



acute



acute



obtuse



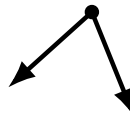
obtuse



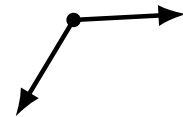
acute



obtuse




acute




obtuse



obtuse



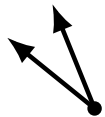
acute



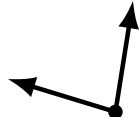
obtuse



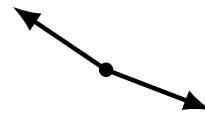
obtuse



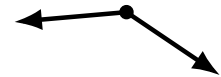
acute



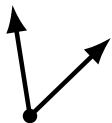
acute



obtuse



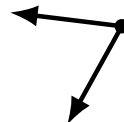
obtuse



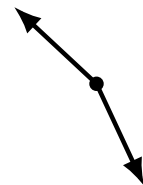
acute



acute



acute



obtuse