

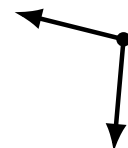
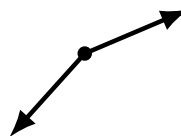
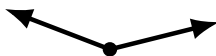
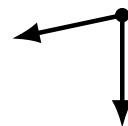
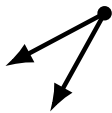
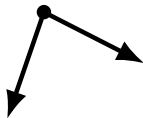
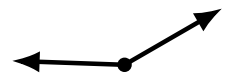
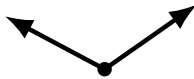
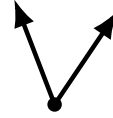
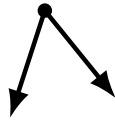
# Identifying Angle Types (E)

Name: \_\_\_\_\_

Date: \_\_\_\_\_

Score: \_\_\_\_\_

Identify each angle as acute or obtuse.



# Identifying Angle Types (E) Answers

Name: \_\_\_\_\_

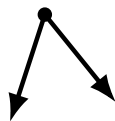
Date: \_\_\_\_\_

Score: \_\_\_\_\_

Identify each angle as acute or obtuse.



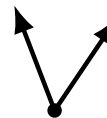
obtuse



acute



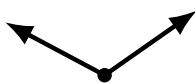
obtuse



acute



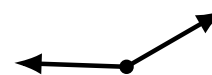
acute



obtuse



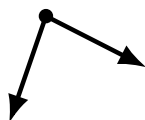
acute



obtuse



obtuse



acute



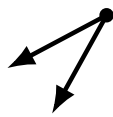
acute



acute



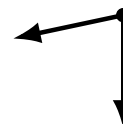
acute



acute



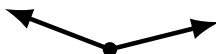
obtuse



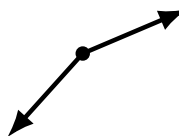
acute



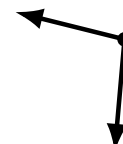
obtuse



obtuse



obtuse



obtuse