

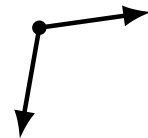
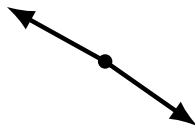
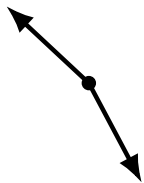
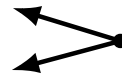
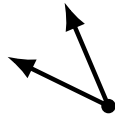
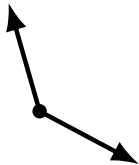
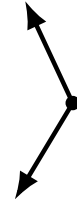
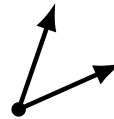
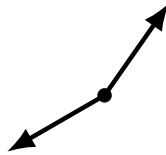
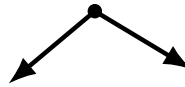
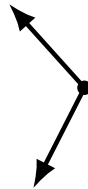
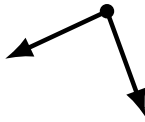
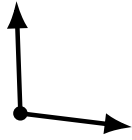
Identifying Angle Types (D)

Name: _____

Date: _____

Score: _____

Identify each angle as acute or obtuse.



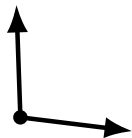
Identifying Angle Types (D) Answers

Name: _____

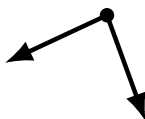
Date: _____

Score: _____

Identify each angle as acute or obtuse.



obtuse



acute



acute



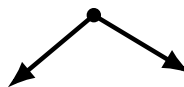
acute



obtuse



obtuse



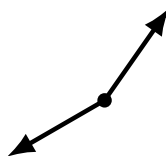
obtuse



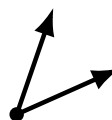
acute



acute



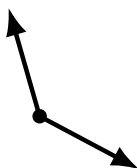
obtuse



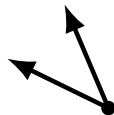
acute



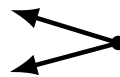
obtuse



obtuse



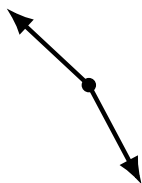
acute



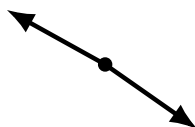
acute



acute



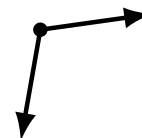
obtuse



obtuse



acute



obtuse