

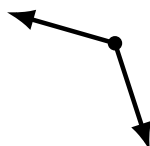
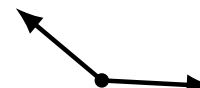

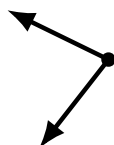
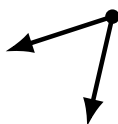

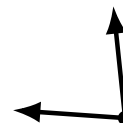
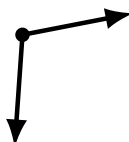
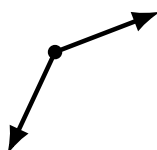
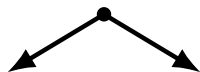
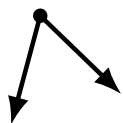
Identifying Angle Types (C)

Name: _____

Date: _____

Score: _____

Identify each angle as acute or obtuse.



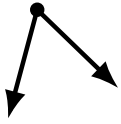
Identifying Angle Types (C) Answers

Name: _____

Date: _____

Score: _____

Identify each angle as acute or obtuse.



acute



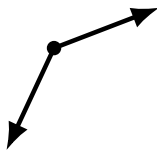
obtuse



obtuse



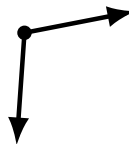
obtuse



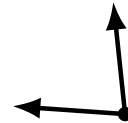
obtuse



acute



obtuse



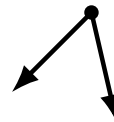
acute



acute



acute



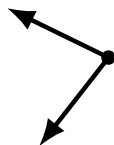
acute



acute



acute




acute



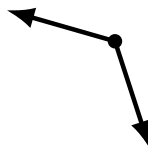
obtuse



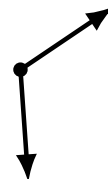
obtuse



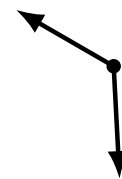
acute



obtuse



obtuse



obtuse