

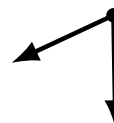
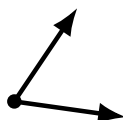
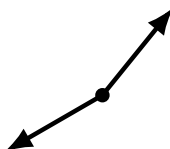
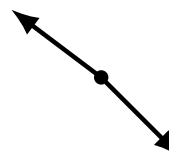
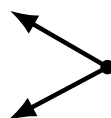
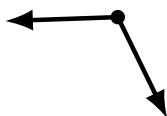
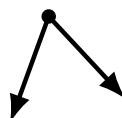
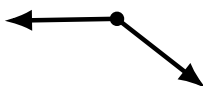
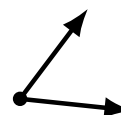
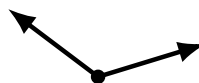
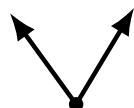
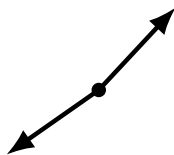
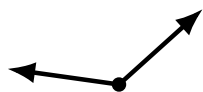
Identifying Angle Types (B)

Name: _____

Date: _____

Score: _____

Identify each angle as acute or obtuse.



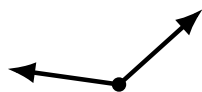
Identifying Angle Types (B) Answers

Name: _____

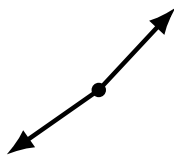
Date: _____

Score: _____

Identify each angle as acute or obtuse.



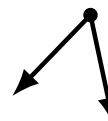
obtuse



obtuse



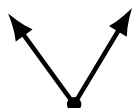
acute



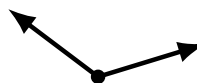
acute



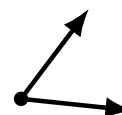
obtuse



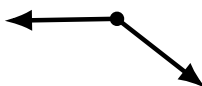
acute



obtuse



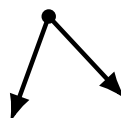
acute



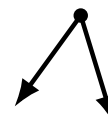
obtuse



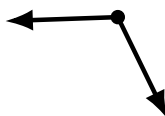
acute



acute



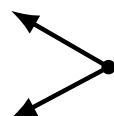
acute



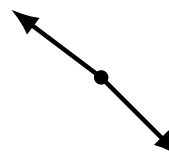
obtuse



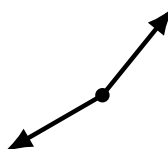
obtuse



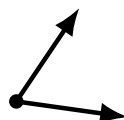
acute



obtuse



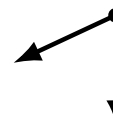
obtuse



acute



obtuse



acute