

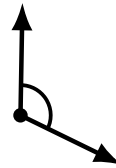
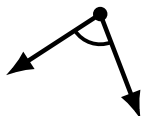

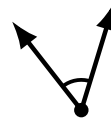
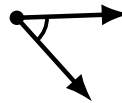
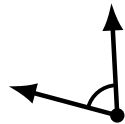
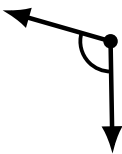
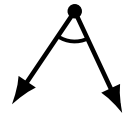
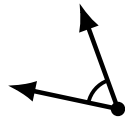
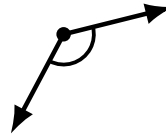
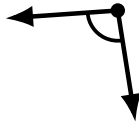
Identifying Angle Types (A)

Name: _____

Date: _____

Score: _____

Identify each angle as acute or obtuse.



Identifying Angle Types (A) Answers

Name: _____

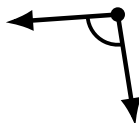
Date: _____

Score: _____

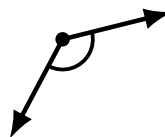
Identify each angle as acute or obtuse.



acute



obtuse



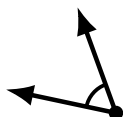
obtuse



obtuse



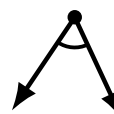
acute



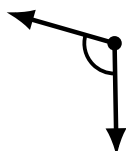
acute



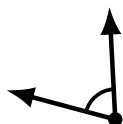
acute



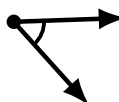
acute



obtuse



acute



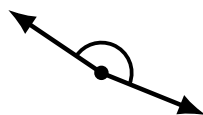
acute



obtuse




obtuse



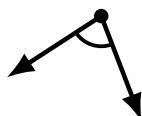
obtuse



acute



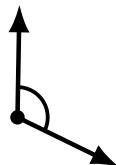
acute



acute



obtuse



obtuse



obtuse

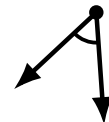
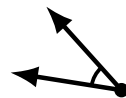

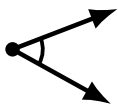
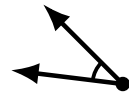
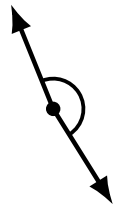
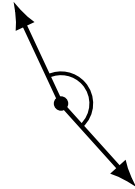
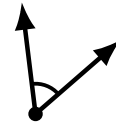
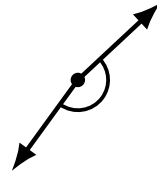
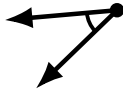
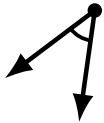
Identifying Angle Types (B)

Name: _____

Date: _____

Score: _____

Identify each angle as acute or obtuse.



Identifying Angle Types (B) Answers

Name: _____

Date: _____

Score: _____

Identify each angle as acute or obtuse.



obtuse



acute



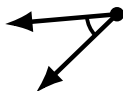
obtuse



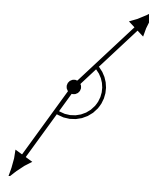
acute



acute



acute



obtuse



acute



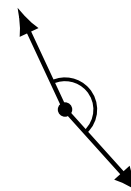
obtuse



obtuse



obtuse



obtuse



acute



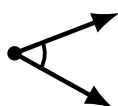
obtuse



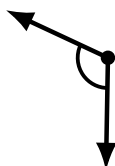
obtuse



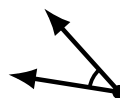
acute




acute



obtuse



acute



acute



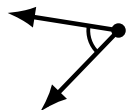
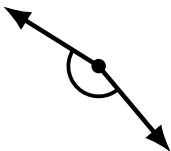
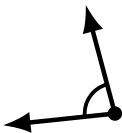
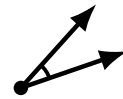

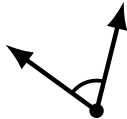
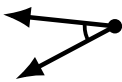
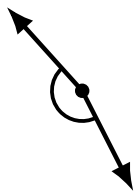

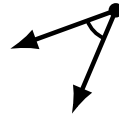
Identifying Angle Types (C)

Name: _____

Date: _____

Score: _____

Identify each angle as acute or obtuse.



Identifying Angle Types (C) Answers

Name: _____

Date: _____

Score: _____

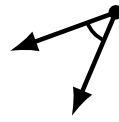
Identify each angle as acute or obtuse.




obtuse



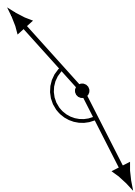
acute



acute



acute



obtuse



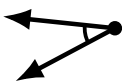
obtuse



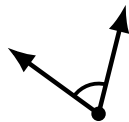
obtuse




obtuse



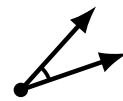
acute



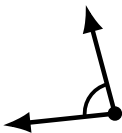
acute



obtuse



acute



acute



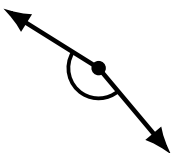
obtuse



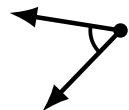
acute



obtuse




obtuse



acute



obtuse



acute

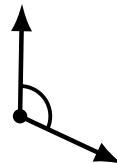
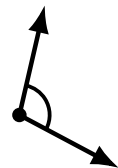
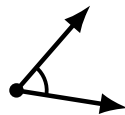
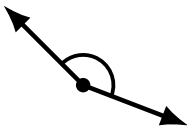
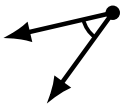
Identifying Angle Types (D)

Name: _____

Date: _____

Score: _____

Identify each angle as acute or obtuse.



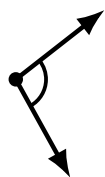
Identifying Angle Types (D) Answers

Name: _____

Date: _____

Score: _____

Identify each angle as acute or obtuse.



obtuse



obtuse



obtuse



acute



acute



obtuse



acute




obtuse



acute



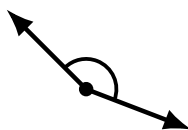
obtuse




obtuse



acute



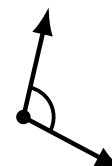
obtuse



acute



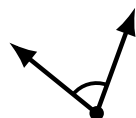
acute



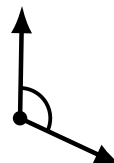
obtuse



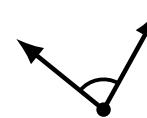
acute



acute



obtuse



acute


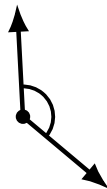
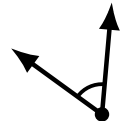
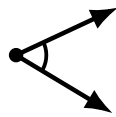
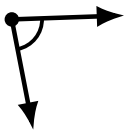

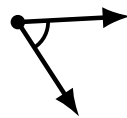
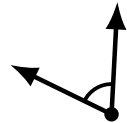
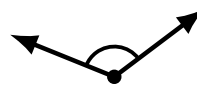
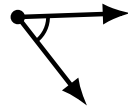
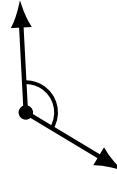
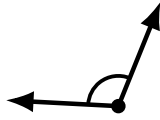
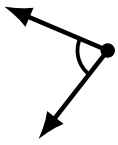
Identifying Angle Types (E)

Name: _____

Date: _____

Score: _____

Identify each angle as acute or obtuse.



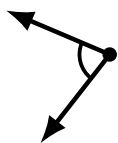
Identifying Angle Types (E) Answers

Name: _____

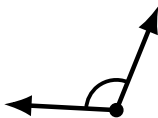
Date: _____

Score: _____

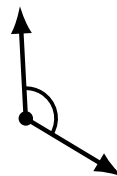
Identify each angle as acute or obtuse.



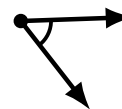
acute



obtuse



obtuse



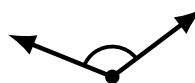
acute




obtuse



obtuse



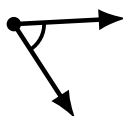
obtuse



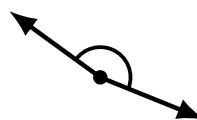
acute



obtuse



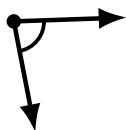
acute



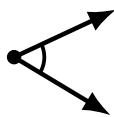
obtuse



obtuse



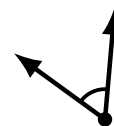
acute



acute




obtuse



acute



acute



obtuse



acute



acute


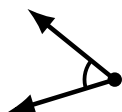
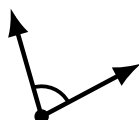
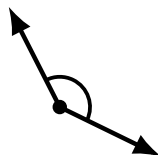
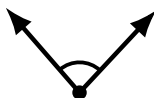
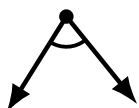
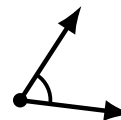
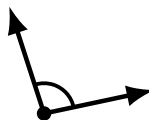
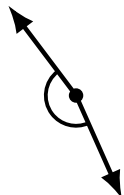
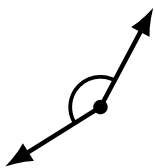
Identifying Angle Types (F)

Name: _____

Date: _____

Score: _____

Identify each angle as acute or obtuse.



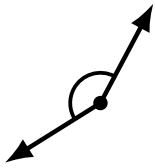
Identifying Angle Types (F) Answers

Name: _____

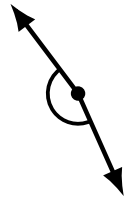
Date: _____

Score: _____

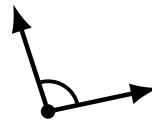
Identify each angle as acute or obtuse.



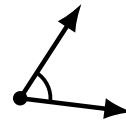
obtuse



obtuse



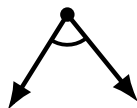
obtuse



acute



acute



acute



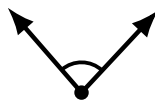
obtuse



obtuse



obtuse



acute



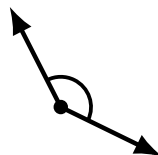
obtuse



obtuse



acute



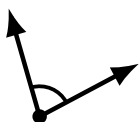
obtuse



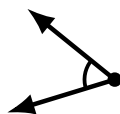
obtuse



acute



acute



acute



acute



acute

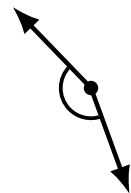
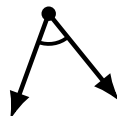
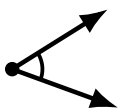
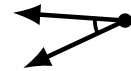
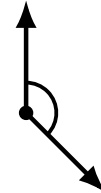
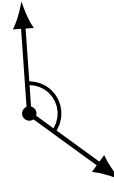
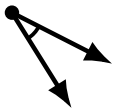
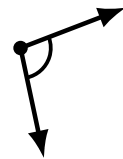
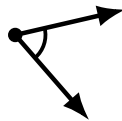
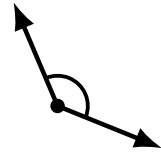
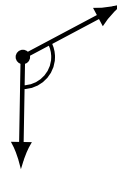
Identifying Angle Types (G)

Name: _____

Date: _____

Score: _____

Identify each angle as acute or obtuse.



Identifying Angle Types (G) Answers

Name: _____

Date: _____

Score: _____

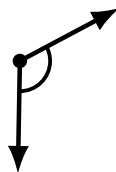
Identify each angle as acute or obtuse.



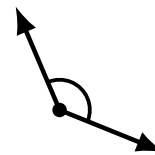
obtuse



acute



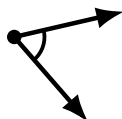
obtuse



obtuse




obtuse



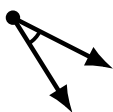
acute



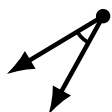
obtuse



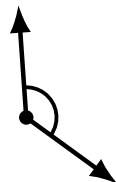
obtuse



acute



acute



obtuse



obtuse



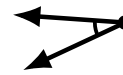
acute



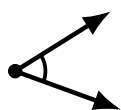
acute



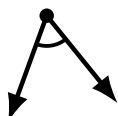
acute



acute



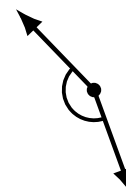
acute



acute



obtuse



obtuse

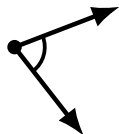
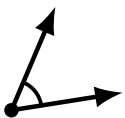
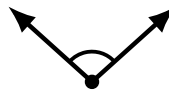
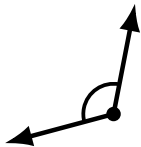
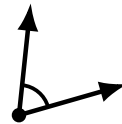
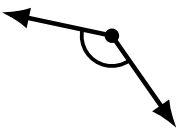
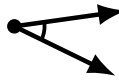
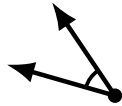
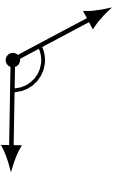
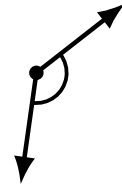
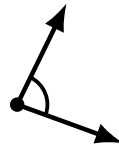
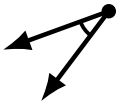
Identifying Angle Types (H)

Name: _____

Date: _____

Score: _____

Identify each angle as acute or obtuse.



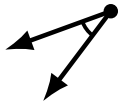
Identifying Angle Types (H) Answers

Name: _____


Date: _____

Score: _____

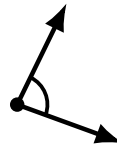
Identify each angle as acute or obtuse.



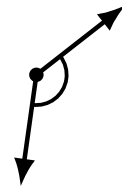
acute



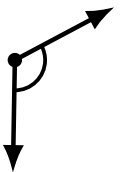
obtuse



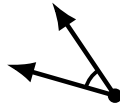
acute



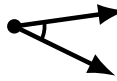
obtuse



obtuse



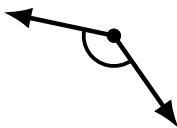
acute



acute



obtuse



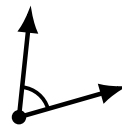
obtuse



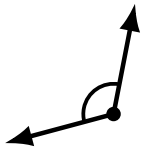
obtuse



acute



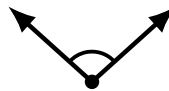
acute



obtuse



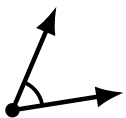
obtuse



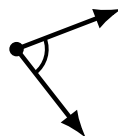
obtuse



acute



acute



acute



obtuse



acute

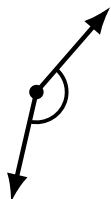
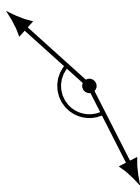


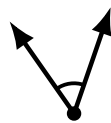
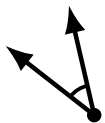
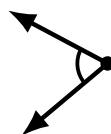
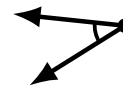
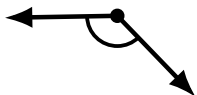
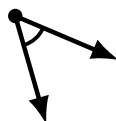

Identifying Angle Types (I)

Name: _____

Date: _____

Score: _____

Identify each angle as acute or obtuse.



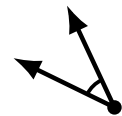
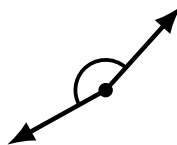
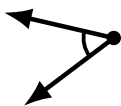
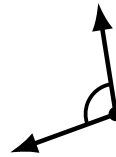
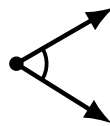
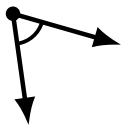
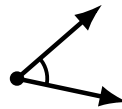


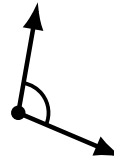
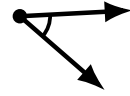
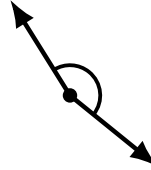
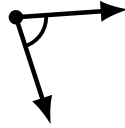
Identifying Angle Types (J)

Name: _____

Date: _____

Score: _____

Identify each angle as acute or obtuse.



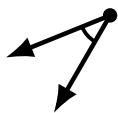
Identifying Angle Types (J) Answers

Name: _____


Date: _____

Score: _____

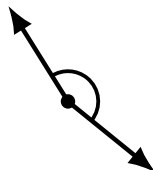
Identify each angle as acute or obtuse.



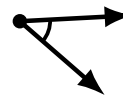
acute



acute



obtuse



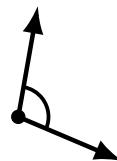
acute



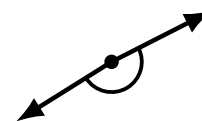
obtuse




acute



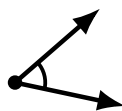
obtuse



obtuse



obtuse



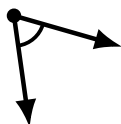
acute



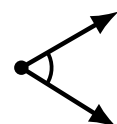
obtuse



obtuse



acute



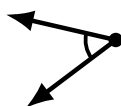
acute



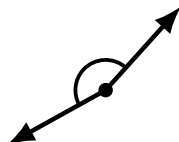
obtuse



obtuse



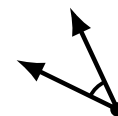
acute



obtuse



acute



acute