

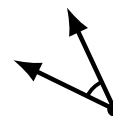
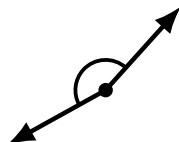
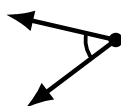
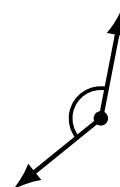
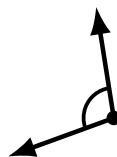
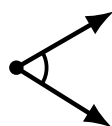
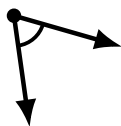
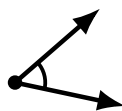


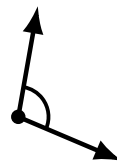
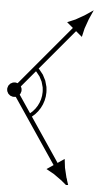
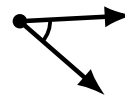
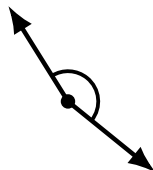

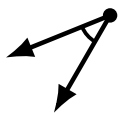
Identifying Angle Types (J)

Name: _____

Date: _____

Score: _____

Identify each angle as acute or obtuse.



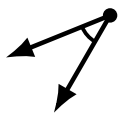
Identifying Angle Types (J) Answers

Name: _____


Date: _____

Score: _____

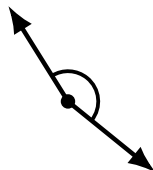
Identify each angle as acute or obtuse.



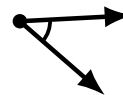
acute



acute



obtuse



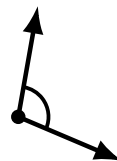
acute




obtuse




acute



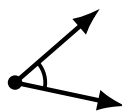
obtuse



obtuse



obtuse



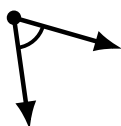
acute



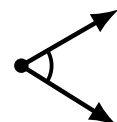
obtuse



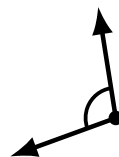
obtuse



acute



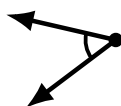
acute



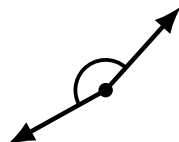
obtuse



obtuse



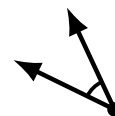
acute



obtuse



acute



acute