

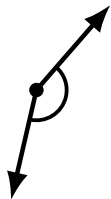
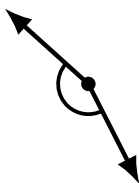

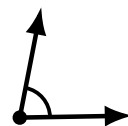
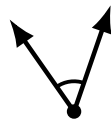
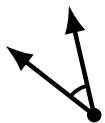
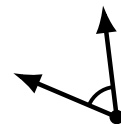
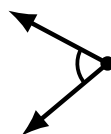
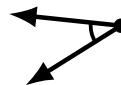
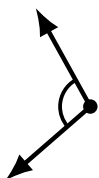

Identifying Angle Types (I)

Name: _____

Date: _____

Score: _____

Identify each angle as acute or obtuse.




Identifying Angle Types (I) Answers

Name: _____

Date: _____

Score: _____

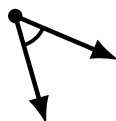
Identify each angle as acute or obtuse.



acute



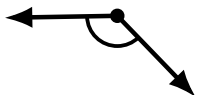
acute



acute



obtuse



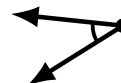
obtuse



obtuse



acute



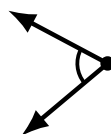
acute



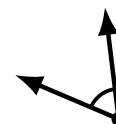
obtuse



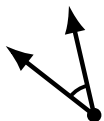
obtuse



acute



acute




acute




obtuse



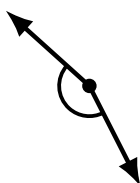
acute



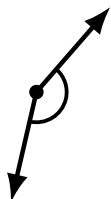
acute



obtuse



obtuse



obtuse



obtuse