

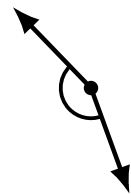
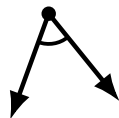
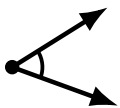
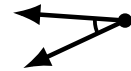
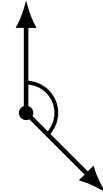
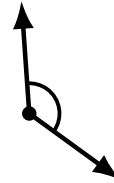
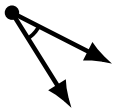
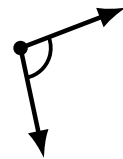
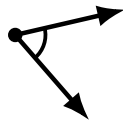
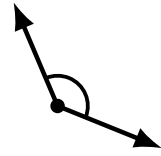
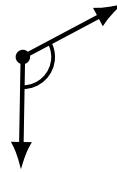
Identifying Angle Types (G)

Name: _____

Date: _____

Score: _____

Identify each angle as acute or obtuse.



Identifying Angle Types (G) Answers

Name: _____

Date: _____

Score: _____

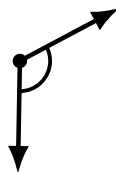
Identify each angle as acute or obtuse.



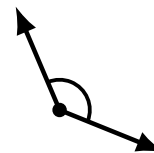
obtuse



acute



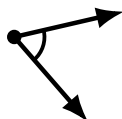
obtuse



obtuse




obtuse



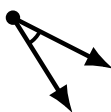
acute



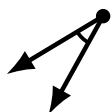
obtuse



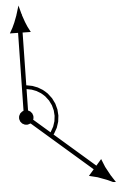
obtuse



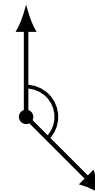
acute



acute



obtuse



obtuse



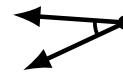
acute



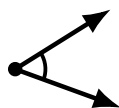
acute



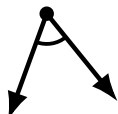
acute



acute



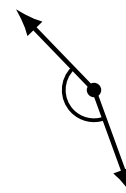
acute



acute



obtuse



obtuse