


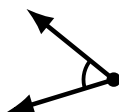
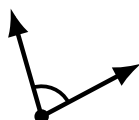
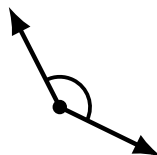
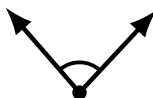
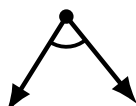
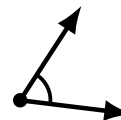
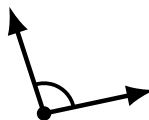
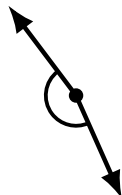
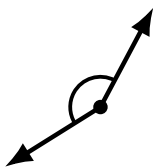
# Identifying Angle Types (F)

Name: \_\_\_\_\_

Date: \_\_\_\_\_

Score: \_\_\_\_\_

Identify each angle as acute or obtuse.



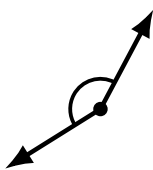
# Identifying Angle Types (F) Answers

Name: \_\_\_\_\_

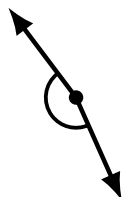
Date: \_\_\_\_\_

Score: \_\_\_\_\_

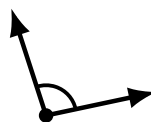
Identify each angle as acute or obtuse.




obtuse



obtuse



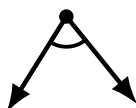
obtuse



acute



acute



acute



obtuse



obtuse



obtuse



acute



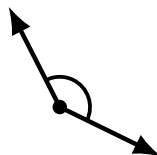
obtuse



obtuse



acute



obtuse



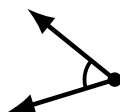
obtuse




acute



acute



acute



acute



acute