

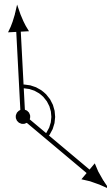
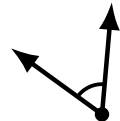
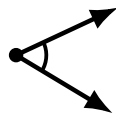
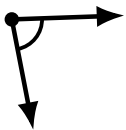
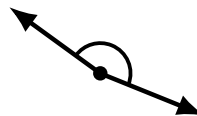
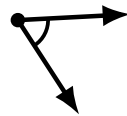
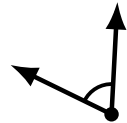
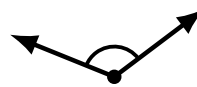
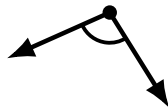
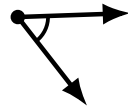
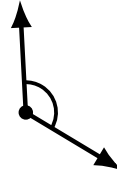
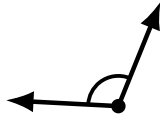
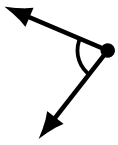
Identifying Angle Types (E)

Name: _____

Date: _____

Score: _____

Identify each angle as acute or obtuse.



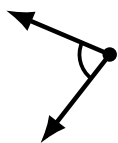
Identifying Angle Types (E) Answers

Name: _____

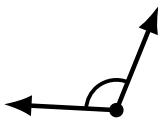
Date: _____

Score: _____

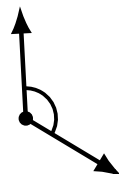
Identify each angle as acute or obtuse.



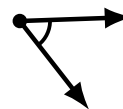
acute



obtuse



obtuse



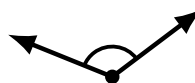
acute



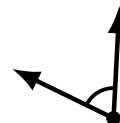
obtuse



obtuse



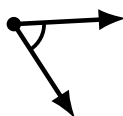
obtuse



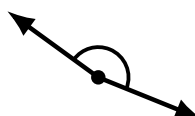
acute



obtuse



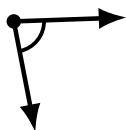
acute



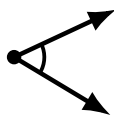
obtuse



obtuse



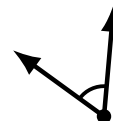
acute



acute



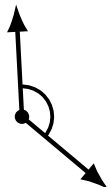
obtuse



acute



acute



obtuse



acute



acute