

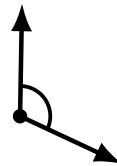
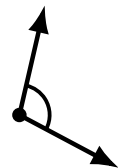
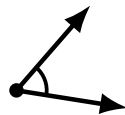
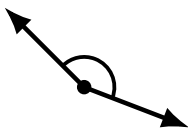
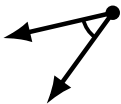
# Identifying Angle Types (D)

Name: \_\_\_\_\_

Date: \_\_\_\_\_

Score: \_\_\_\_\_

Identify each angle as acute or obtuse.



# Identifying Angle Types (D) Answers

Name: \_\_\_\_\_

Date: \_\_\_\_\_

Score: \_\_\_\_\_

Identify each angle as acute or obtuse.



obtuse



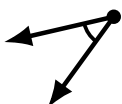
obtuse



obtuse



acute



acute



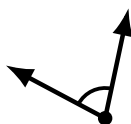
obtuse



acute



obtuse



acute



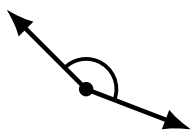
obtuse



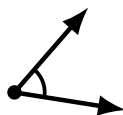
obtuse



acute



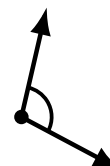
obtuse



acute



acute



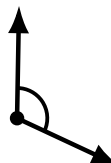
obtuse



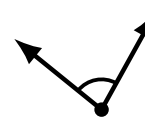
acute



acute



obtuse



acute