

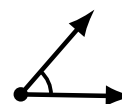
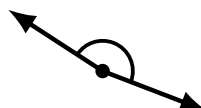
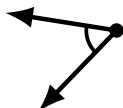
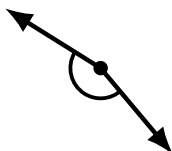
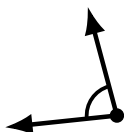
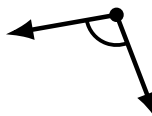
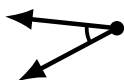
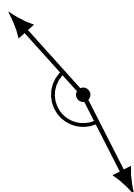
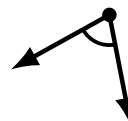
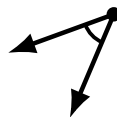
# Identifying Angle Types (C)

Name: \_\_\_\_\_

Date: \_\_\_\_\_

Score: \_\_\_\_\_

Identify each angle as acute or obtuse.



# Identifying Angle Types (C) Answers

Name: \_\_\_\_\_

Date: \_\_\_\_\_

Score: \_\_\_\_\_

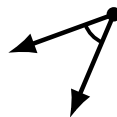
Identify each angle as acute or obtuse.



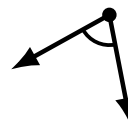
obtuse



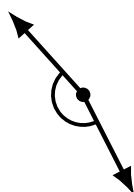
acute



acute



acute



obtuse



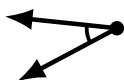
obtuse



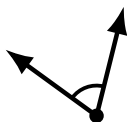
obtuse



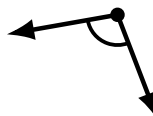
obtuse



acute



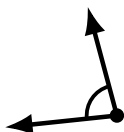
acute



obtuse



acute



acute



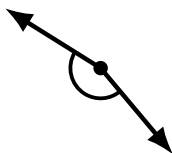
obtuse



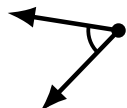
acute



obtuse



obtuse



acute



obtuse



acute