

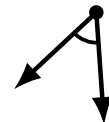
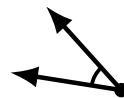

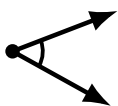
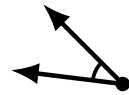
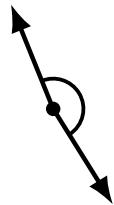
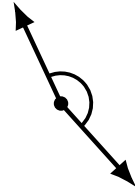
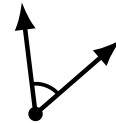
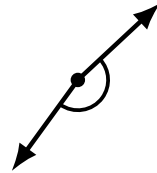
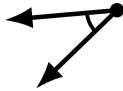
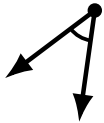
Identifying Angle Types (B)

Name: _____

Date: _____

Score: _____

Identify each angle as acute or obtuse.



Identifying Angle Types (B) Answers

Name: _____

Date: _____

Score: _____

Identify each angle as acute or obtuse.



obtuse



acute



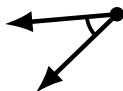
obtuse



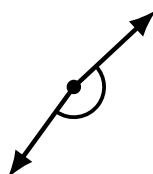
acute



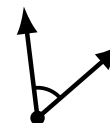
acute



acute



obtuse



acute



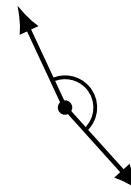
obtuse



obtuse



obtuse



obtuse



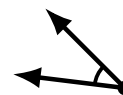
acute



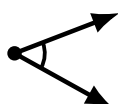
obtuse



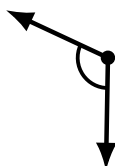
obtuse



acute



acute



obtuse



acute



acute