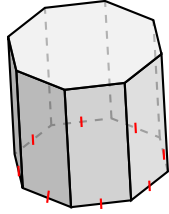
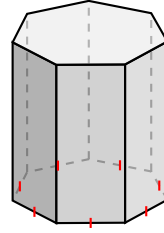


# Classifying Prisms (H)

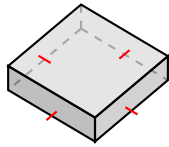
Name each prism based on the shape of its base.



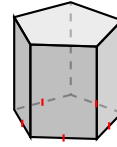
\_\_\_\_\_



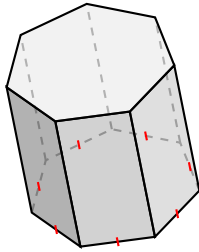
\_\_\_\_\_



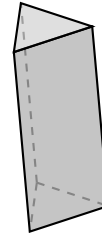
\_\_\_\_\_



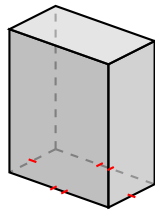
\_\_\_\_\_



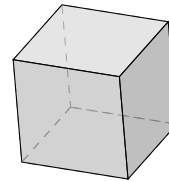
\_\_\_\_\_



\_\_\_\_\_



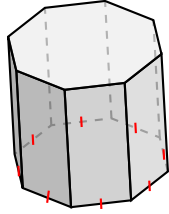
\_\_\_\_\_



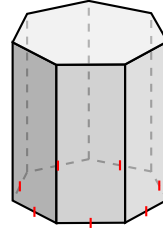
\_\_\_\_\_

# Classifying Prisms (H) Answers

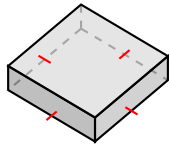
Name each prism based on the shape of its base.



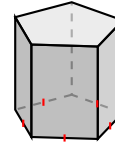
octagonal prism



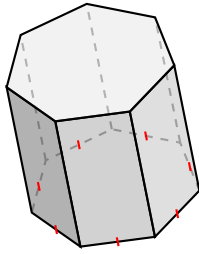
heptagonal prism



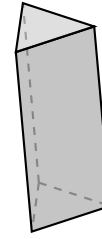
square prism



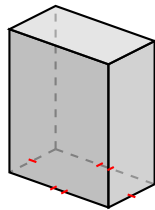
pentagonal prism



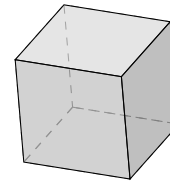
heptagonal prism



triangular prism



rectangular prism



square prism, cube