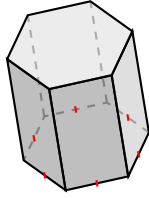
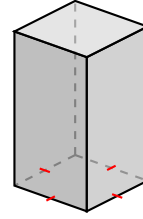
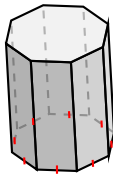


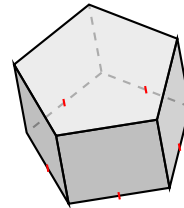
Classifying Prisms (D)

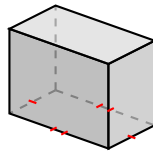
Name each prism based on the shape of its base.

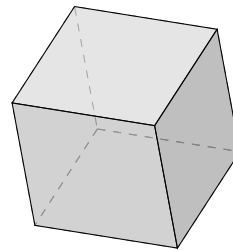


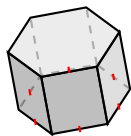


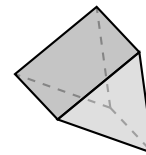






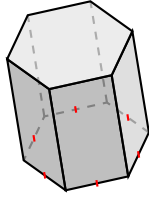




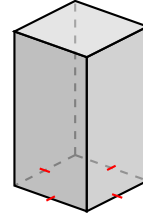


Classifying Prisms (D) Answers

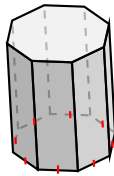
Name each prism based on the shape of its base.



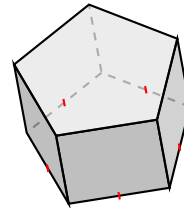
hexagonal prism



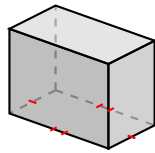
square prism



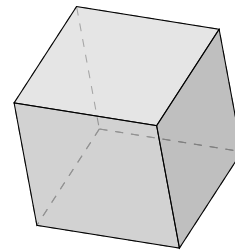
octagonal prism



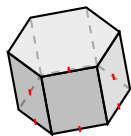
pentagonal prism



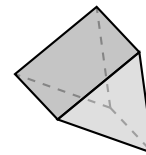
rectangular prism



square prism, cube



hexagonal prism



triangular prism