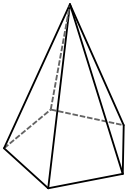
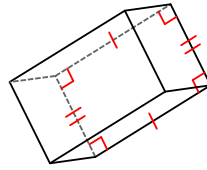


Identifying Three-Dimensional Figures (3)

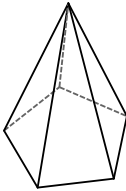
1)



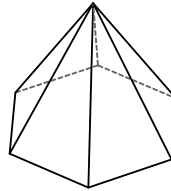
2)



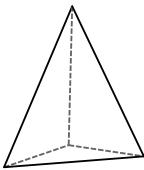
3)



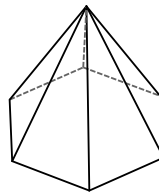
4)



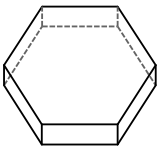
5)



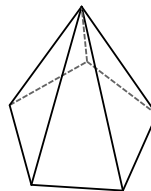
6)



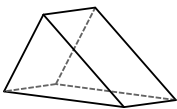
7)



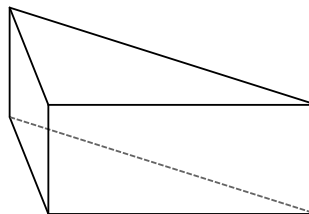
8)



9)

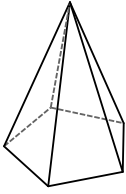


10)



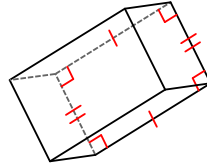
Identifying Three-Dimensional Figures (3) Answers

1)



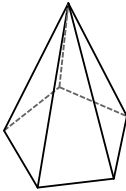
pentagonal pyramid

2)



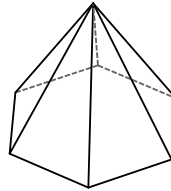
rectangular prism

3)



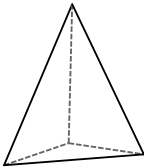
pentagonal pyramid

4)



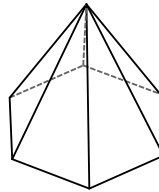
hexagonal pyramid

5)



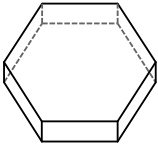
triangular pyramid

6)



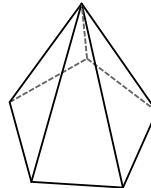
hexagonal pyramid

7)



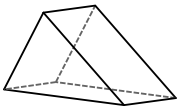
hexagonal prism

8)



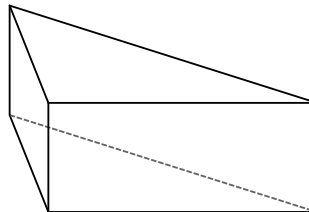
pentagonal pyramid

9)



triangular prism

10)



triangular prism