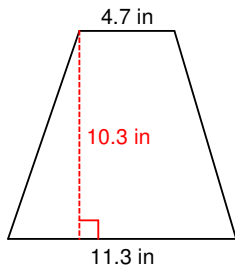
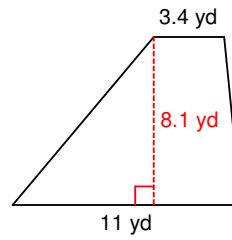


Area of Trapezoids (5)

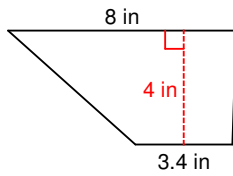
1)



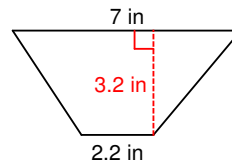
2)



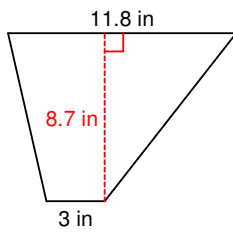
3)



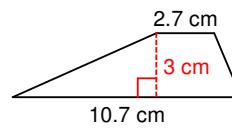
4)



5)

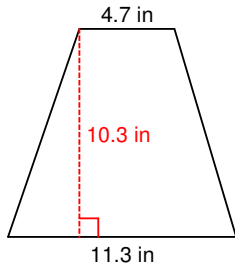


6)



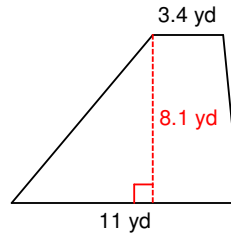
Area of Trapezoids (5) Answers

1)



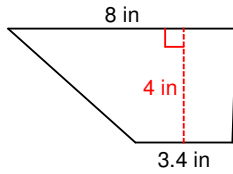
$$82.4 \text{ in}^2$$

2)



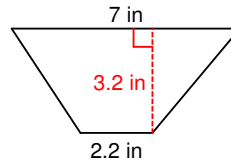
$$58.32 \text{ yd}^2$$

3)



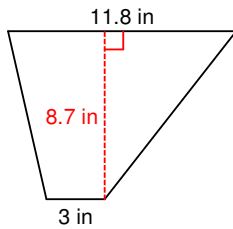
$$22.8 \text{ in}^2$$

4)



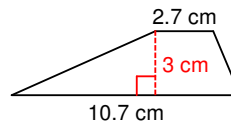
$$14.72 \text{ in}^2$$

5)



$$64.38 \text{ in}^2$$

6)



$$20.1 \text{ cm}^2$$