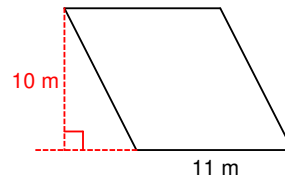


Area of Parallelograms (2)

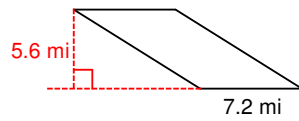
1)



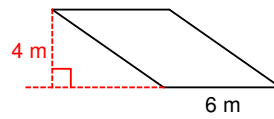
2)



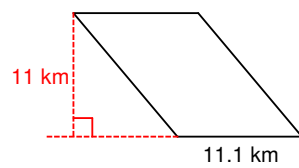
3)



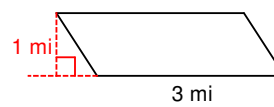
4)



5)

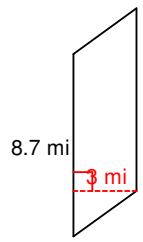


6)



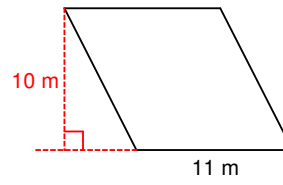
Area of Parallelograms (2) Answers

1)



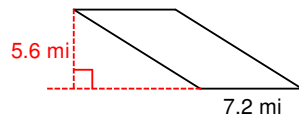
$$26.1 \text{ mi}^2$$

2)



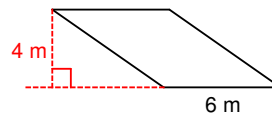
$$110 \text{ m}^2$$

3)



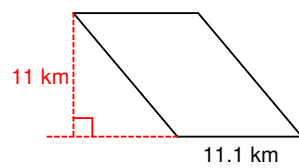
$$40.32 \text{ mi}^2$$

4)



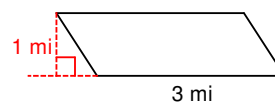
$$24 \text{ m}^2$$

5)



$$122.1 \text{ km}^2$$

6)



$$3 \text{ mi}^2$$