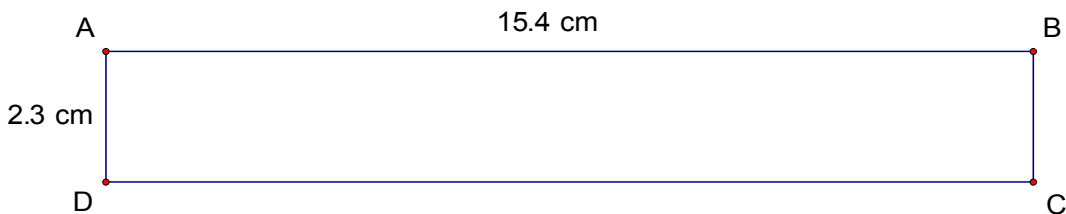
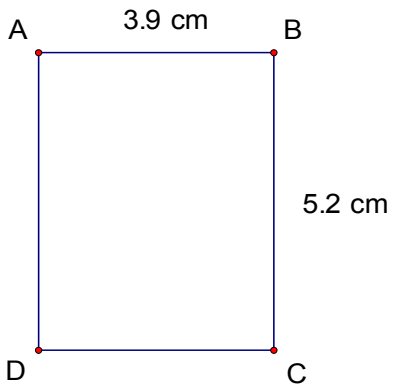
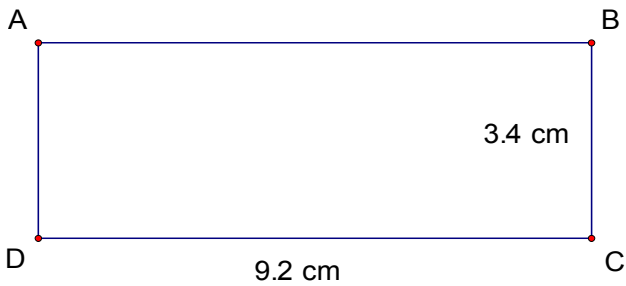




Perimeter and Area of Rectangles (C)

Instructions: Calculate the perimeter and area for each rectangle below.



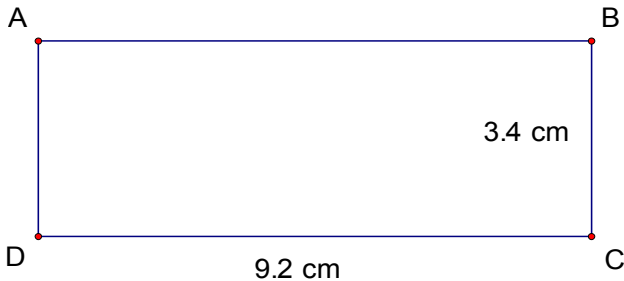
Perimeter and Area of Rectangles (C) Answers

Instructions: Calculate the perimeter and area for each rectangle below.



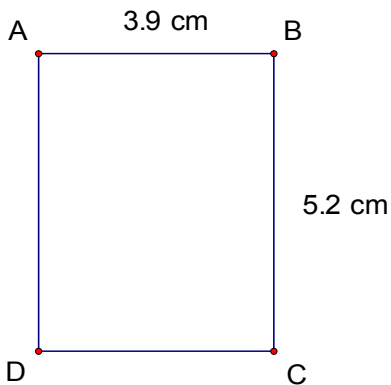
$$\text{Perimeter} = 18.2 \text{ cm}$$

$$\text{Area} = 19.6 \text{ cm}^2$$



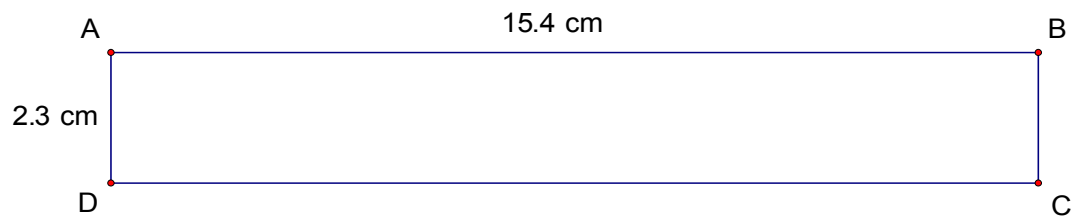
$$\text{Perimeter} = 25.2 \text{ cm}$$

$$\text{Area} = 31.28 \text{ cm}^2$$



$$\text{Perimeter} = 18.2 \text{ cm}$$

$$\text{Area} = 20.28 \text{ cm}^2$$



$$\text{Perimeter} = 35.4 \text{ cm}$$

$$\text{Area} = 35.42 \text{ cm}^2$$