






# Perpendicular Bisectors (D)

Name: \_\_\_\_\_

Date: \_\_\_\_\_

Construct the perpendicular bisector on each line segment.



# Perpendicular Bisectors (D) Answers

Name: \_\_\_\_\_

Date: \_\_\_\_\_

Construct the perpendicular bisector on each line segment.

