



Autumn Ratios (E)


Find each ratio and simplify, if necessary.




$$\begin{aligned} \text{Maple Leaf} : \text{Tree} &= \quad : \quad = \quad : \\ \text{Tree} : \text{Maple Leaf} &= \quad : \quad = \quad : \end{aligned}$$



$$\begin{aligned} \text{Oak Leaf} : \text{Maple Leaf} &= \quad : \quad = \quad : \\ \text{Maple Leaf} : \text{Oak Leaf} &= \quad : \quad = \quad : \end{aligned}$$



$$\begin{aligned} \text{Oak Leaf} : (\text{Oak Leaf} + \text{Tree}) &= \quad : \quad = \quad : \\ \text{Tree} : (\text{Tree} + \text{Oak Leaf}) &= \quad : \quad = \quad : \end{aligned}$$



$$\begin{aligned} \text{Maple Leaf} : (\text{Maple Leaf} + \text{Oak Leaf}) &= \quad : \quad = \quad : \\ \text{Oak Leaf} : (\text{Oak Leaf} + \text{Maple Leaf}) &= \quad : \quad = \quad : \end{aligned}$$