


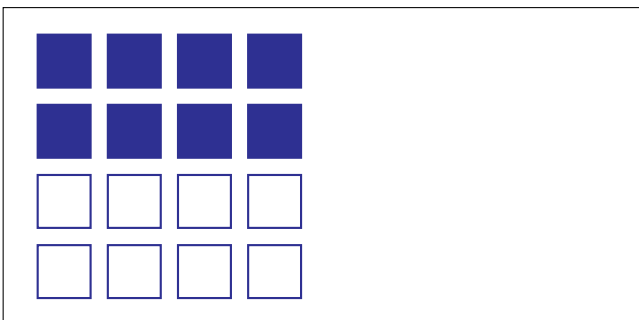
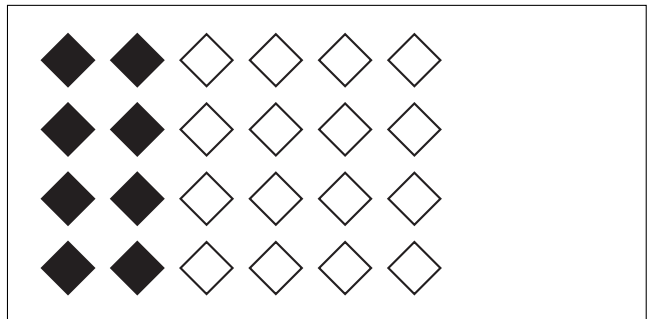




Parts of a Group (A)



In this group there
are 4 shapes and
2 are filled in.

$$\frac{2 \text{ shapes filled in}}{4 \text{ shapes in group}} = \frac{2}{4} = \frac{1}{2}$$

Write a fraction for each of the following models.



Parts of a Group (A) Answers




In this group there
are 4 shapes and
2 are filled in.

$$\frac{2 \text{ shapes filled in}}{4 \text{ shapes in group}} = \frac{2}{4} = \frac{1}{2}$$

Write a fraction for each of the following models.



$$\frac{1}{4}$$




$$\frac{9}{18} = \frac{1}{2}$$




$$\frac{9}{12} = \frac{3}{4}$$




$$\frac{10}{20} = \frac{1}{2}$$




$$\frac{5}{20} = \frac{1}{4}$$



$$\frac{8}{24} = \frac{1}{3}$$




$$\frac{8}{16} = \frac{1}{2}$$



$$\frac{5}{10} = \frac{1}{2}$$


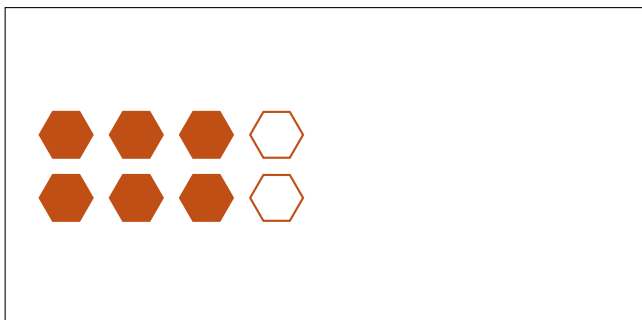
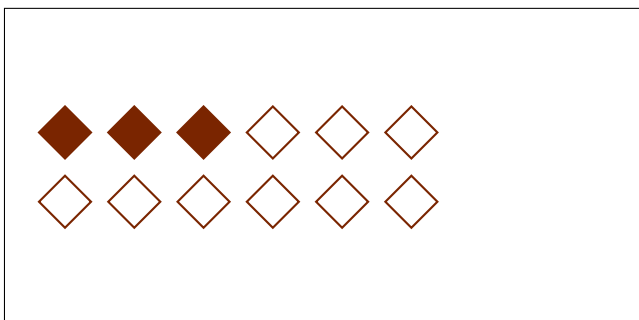
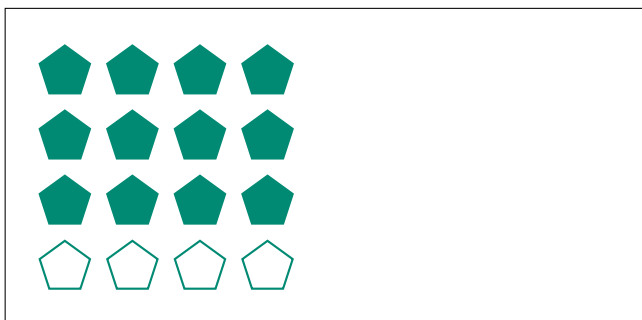
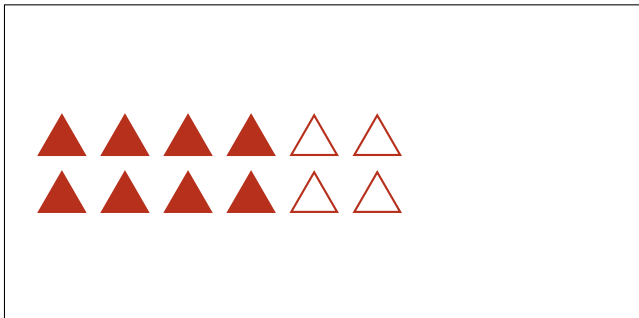

Parts of a Group (B)




In this group there are 16 shapes and 4 are filled in.

$$\frac{4 \text{ shapes filled in}}{16 \text{ shapes in group}} = \frac{4}{16} = \frac{1}{4}$$

Write a fraction for each of the following models.




Parts of a Group (B) Answers



In this group there are 16 shapes and 4 are filled in.

$$\frac{4 \text{ shapes filled in}}{16 \text{ shapes in group}} = \frac{4}{16} = \frac{1}{4}$$

Write a fraction for each of the following models.



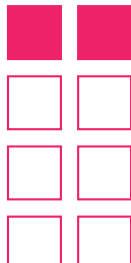
$$\frac{6}{12} = \frac{1}{2}$$




$$\frac{8}{12} = \frac{2}{3}$$




$$\frac{12}{24} = \frac{1}{2}$$



$$\frac{2}{8} = \frac{1}{4}$$




$$\frac{12}{16} = \frac{3}{4}$$



$$\frac{3}{12} = \frac{1}{4}$$




$$\frac{6}{8} = \frac{3}{4}$$



$$\frac{8}{24} = \frac{1}{3}$$

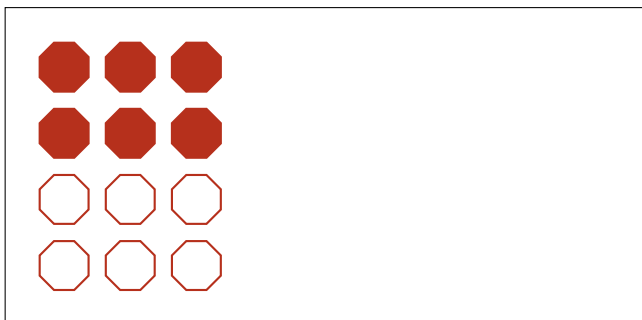
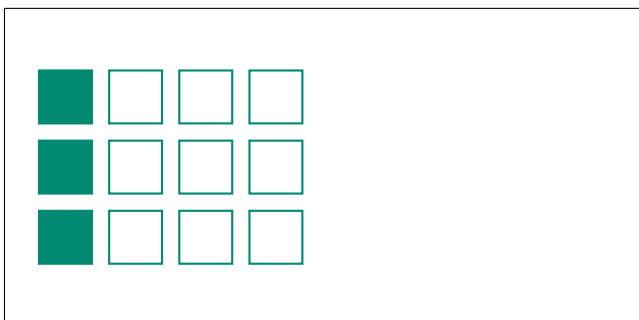

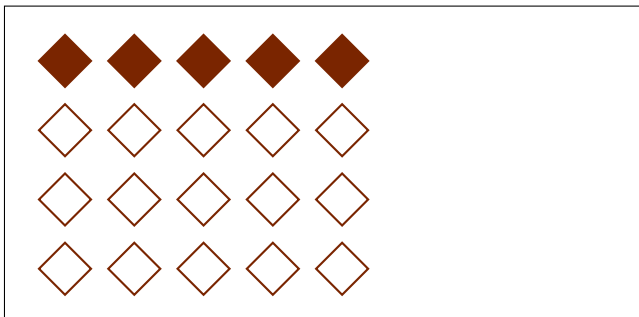

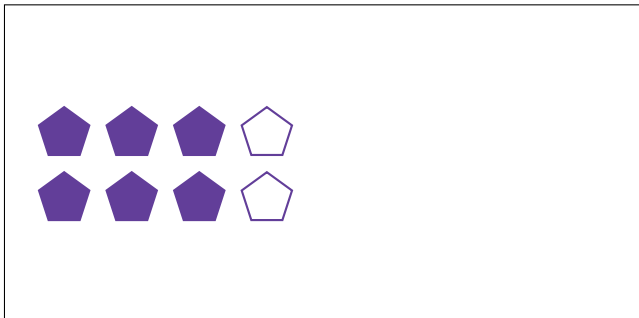
Parts of a Group (C)




In this group there are 18 shapes and 9 are filled in.

$$\frac{9 \text{ shapes filled in}}{18 \text{ shapes in group}} = \frac{9}{18} = \frac{1}{2}$$

Write a fraction for each of the following models.




Parts of a Group (C) Answers




In this group there are 18 shapes and 9 are filled in.

$$\frac{9 \text{ shapes filled in}}{18 \text{ shapes in group}} = \frac{9}{18} = \frac{1}{2}$$


Write a fraction for each of the following models.




$$\frac{8}{16} = \frac{1}{2}$$



$$\frac{6}{8} = \frac{3}{4}$$




$$\frac{10}{15} = \frac{2}{3}$$




$$\frac{5}{20} = \frac{1}{4}$$



$$\frac{1}{3}$$



$$\frac{3}{12} = \frac{1}{4}$$

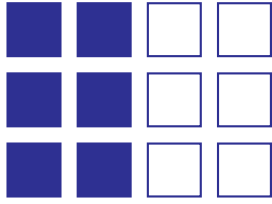


$$\frac{6}{12} = \frac{1}{2}$$



$$\frac{3}{4}$$

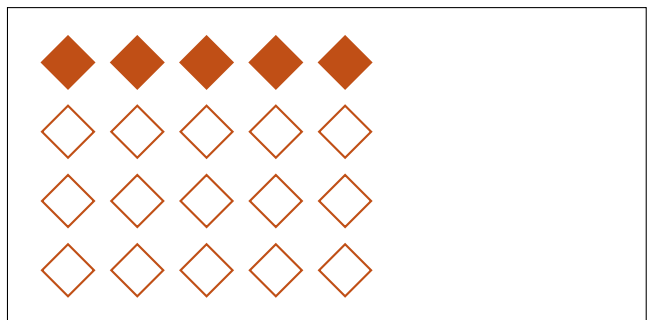


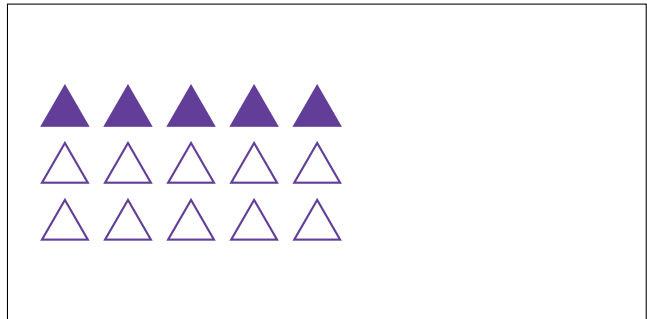
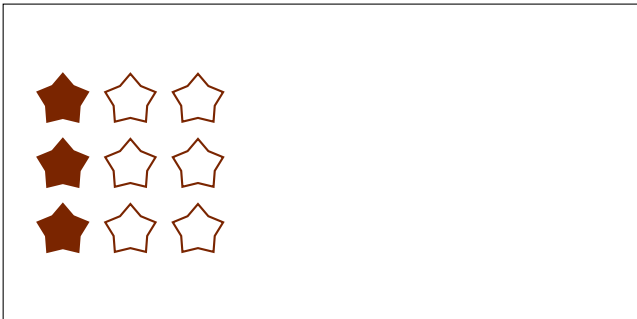
Parts of a Group (D)



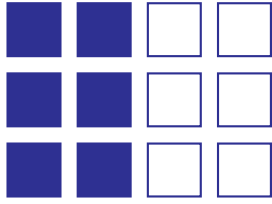
In this group there are 12 shapes and 6 are filled in.

$$\frac{6 \text{ shapes filled in}}{12 \text{ shapes in group}} = \frac{6}{12} = \frac{1}{2}$$

Write a fraction for each of the following models.



Parts of a Group (D) Answers



In this group there are 12 shapes and 6 are filled in.

$$\frac{6 \text{ shapes filled in}}{12 \text{ shapes in group}} = \frac{6}{12} = \frac{1}{2}$$

Write a fraction for each of the following models.

$$\frac{8}{12} = \frac{2}{3}$$

$$\frac{2}{4} = \frac{1}{2}$$

$$\frac{3}{9} = \frac{1}{3}$$

$$\frac{5}{15} = \frac{1}{3}$$

$$\frac{8}{24} = \frac{1}{3}$$

$$\frac{3}{4}$$

$$\frac{4}{6} = \frac{2}{3}$$

$$\frac{5}{20} = \frac{1}{4}$$

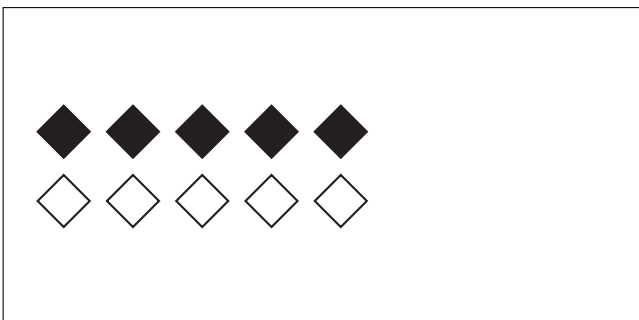


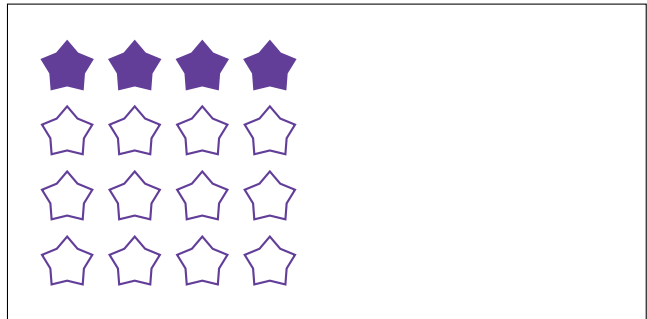
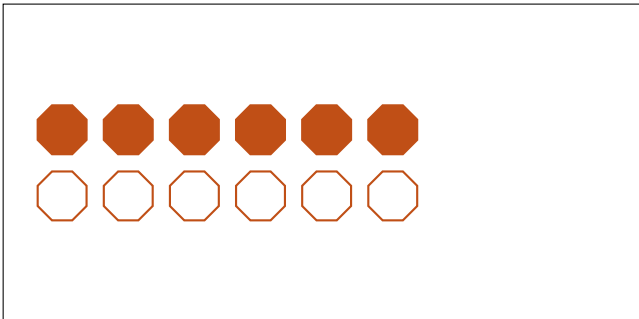


Parts of a Group (E)



In this group
there are 4 shapes
and 1 is filled in.

$$\frac{1 \text{ shape filled in}}{4 \text{ shapes in group}} = \frac{1}{4}$$

Write a fraction for each of the following models.




Parts of a Group (E) Answers



In this group
there are 4 shapes
and 1 is filled in.

$$\frac{1 \text{ shape filled in}}{4 \text{ shapes in group}} = \frac{1}{4}$$

Write a fraction for each of the following models.




$$\frac{9}{12} = \frac{3}{4}$$




$$\frac{3}{12} = \frac{1}{4}$$



$$\frac{6}{12} = \frac{1}{2}$$



$$\frac{4}{16} = \frac{1}{4}$$



$$\frac{5}{15} = \frac{1}{3}$$



$$\frac{10}{20} = \frac{1}{2}$$




$$\frac{5}{10} = \frac{1}{2}$$



$$\frac{2}{6} = \frac{1}{3}$$




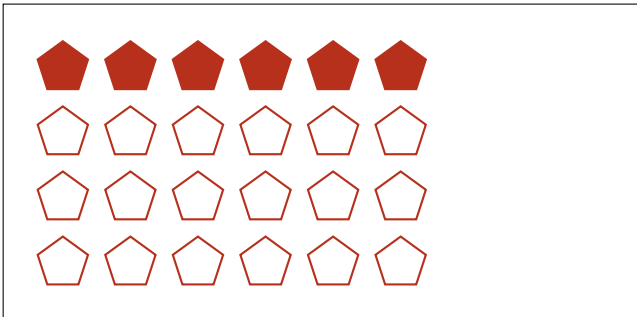

Parts of a Group (F)




In this group there are 24 shapes and 12 are filled in.

$$\frac{12 \text{ shapes filled in}}{24 \text{ shapes in group}} = \frac{12}{24} = \frac{1}{2}$$

Write a fraction for each of the following models.




Parts of a Group (F) Answers




In this group there are 24 shapes and 12 are filled in.

$$\frac{12 \text{ shapes filled in}}{24 \text{ shapes in group}} = \frac{12}{24} = \frac{1}{2}$$

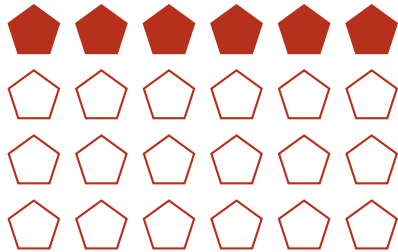
Write a fraction for each of the following models.



$$\frac{1}{4}$$



$$\frac{4}{8} = \frac{1}{2}$$




$$\frac{6}{24} = \frac{1}{4}$$



$$\frac{4}{12} = \frac{1}{3}$$



$$\frac{6}{8} = \frac{3}{4}$$



$$\frac{6}{9} = \frac{2}{3}$$



$$\frac{3}{4}$$



$$\frac{2}{3}$$

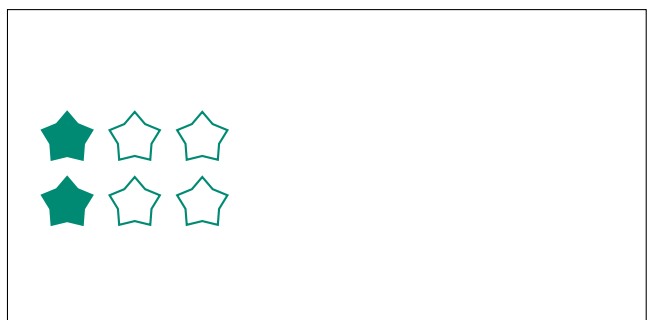

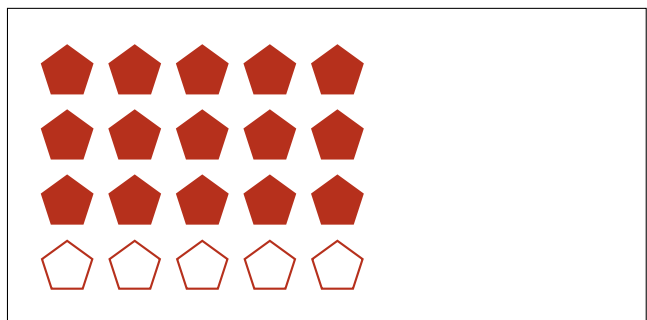


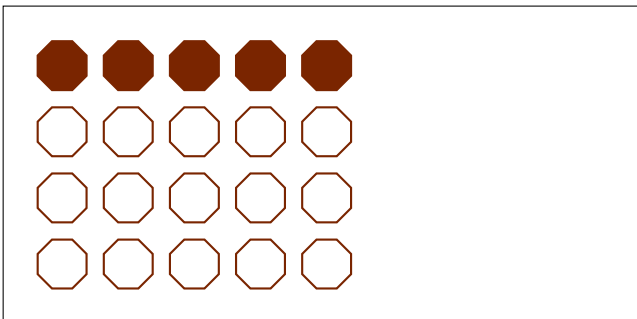

Parts of a Group (G)



In this group
there are 4 shapes
and 1 is filled in.

$$\frac{1 \text{ shape filled in}}{4 \text{ shapes in group}} = \frac{1}{4}$$

Write a fraction for each of the following models.



Parts of a Group (G) Answers



In this group
there are 4 shapes
and 1 is filled in.

$$\frac{1 \text{ shape filled in}}{4 \text{ shapes in group}} = \frac{1}{4}$$

Write a fraction for each of the following models.

$$\frac{6}{8} = \frac{3}{4}$$

$$\frac{3}{12} = \frac{1}{4}$$

$$\frac{5}{20} = \frac{1}{4}$$

$$\frac{6}{9} = \frac{2}{3}$$

$$\frac{16}{24} = \frac{2}{3}$$

$$\frac{15}{20} = \frac{3}{4}$$

$$\frac{6}{18} = \frac{1}{3}$$

$$\frac{2}{6} = \frac{1}{3}$$

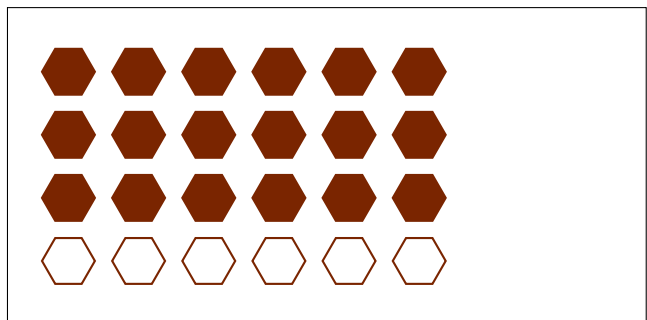
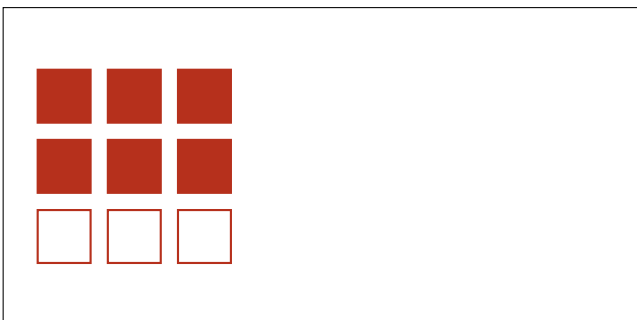


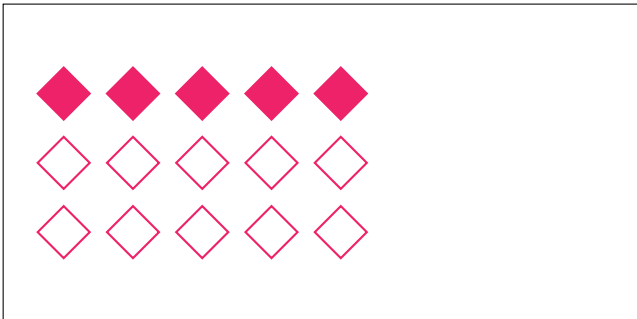
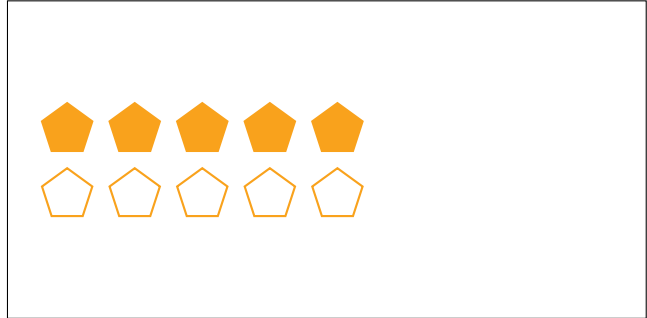

Parts of a Group (H)



In this group there
are 3 shapes and
2 are filled in.

$$\frac{2 \text{ shapes filled in}}{3 \text{ shapes in group}} = \frac{2}{3}$$

Write a fraction for each of the following models.



Parts of a Group (H) Answers



In this group there are 3 shapes and 2 are filled in.

$$\frac{2 \text{ shapes filled in}}{3 \text{ shapes in group}} = \frac{2}{3}$$

Write a fraction for each of the following models.

$$\frac{3}{6} = \frac{1}{2}$$

$$\frac{5}{10} = \frac{1}{2}$$

$$\frac{5}{15} = \frac{1}{3}$$

$$\frac{15}{20} = \frac{3}{4}$$

$$\frac{10}{15} = \frac{2}{3}$$

$$\frac{1}{3}$$

$$\frac{6}{9} = \frac{2}{3}$$

$$\frac{18}{24} = \frac{3}{4}$$




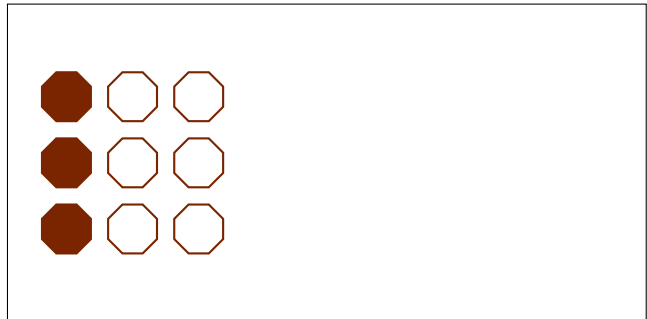


Parts of a Group (I)



In this group there are 24 shapes and 6 are filled in.

$$\frac{6 \text{ shapes filled in}}{24 \text{ shapes in group}} = \frac{6}{24} = \frac{1}{4}$$

Write a fraction for each of the following models.



Parts of a Group (I) Answers



In this group there are 24 shapes and 6 are filled in.

$$\frac{6 \text{ shapes filled in}}{24 \text{ shapes in group}} = \frac{6}{24} = \frac{1}{4}$$

Write a fraction for each of the following models.



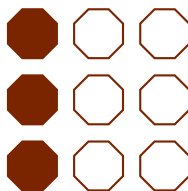
$$\frac{1}{4}$$




$$\frac{2}{6} = \frac{1}{3}$$




$$\frac{5}{10} = \frac{1}{2}$$



$$\frac{3}{9} = \frac{1}{3}$$



$$\frac{6}{8} = \frac{3}{4}$$



$$\frac{8}{16} = \frac{1}{2}$$




$$\frac{1}{3}$$



$$\frac{3}{4}$$


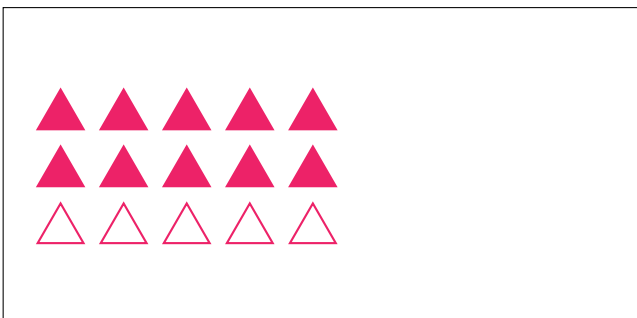

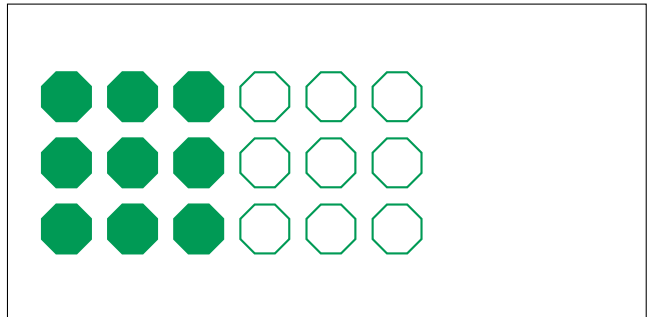



Parts of a Group (J)




In this group there are 24 shapes and 8 are filled in.

$$\frac{8 \text{ shapes filled in}}{24 \text{ shapes in group}} = \frac{8}{24} = \frac{1}{3}$$

Write a fraction for each of the following models.




Parts of a Group (J) Answers



In this group there are 24 shapes and 8 are filled in.

$$\frac{8 \text{ shapes filled in}}{24 \text{ shapes in group}} = \frac{8}{24} = \frac{1}{3}$$


Write a fraction for each of the following models.




$$\frac{6}{9} = \frac{2}{3}$$



$$\frac{16}{24} = \frac{2}{3}$$



$$\frac{6}{12} = \frac{1}{2}$$




$$\frac{9}{18} = \frac{1}{2}$$



$$\frac{2}{3}$$



$$\frac{3}{4}$$



$$\frac{10}{15} = \frac{2}{3}$$



$$\frac{2}{6} = \frac{1}{3}$$