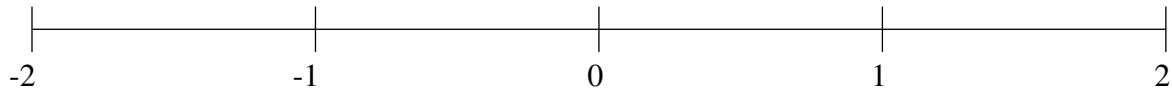


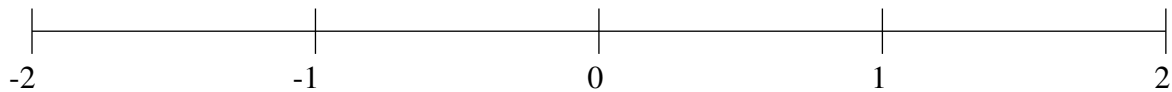
## Ordering Fractions (A)

Order each set of fractions using the number line.

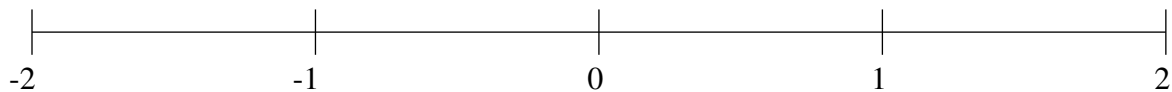
$$-1\frac{3}{5}, -1\frac{1}{4}, 1\frac{1}{5}, -\frac{3}{4}, -\frac{1}{2}, \frac{1}{2}, \frac{1}{4}, \frac{3}{4}$$



$$-\frac{2}{25}, -\frac{1}{2}, 1\frac{1}{2}, -1\frac{9}{10}, \frac{1}{5}, -1\frac{2}{5}, -1\frac{1}{10}, 1\frac{7}{25}$$



$$\frac{1}{2}, -1\frac{19}{20}, -\frac{2}{5}, -1\frac{1}{2}, 1\frac{1}{4}, 1\frac{3}{5}, \frac{1}{4}, -\frac{4}{5}$$

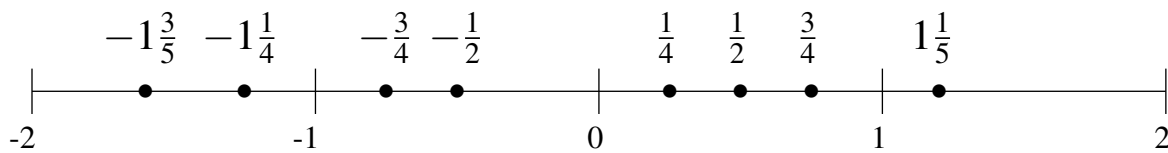


## Ordering Fractions (A) Answers

Order each set of fractions using the number line.

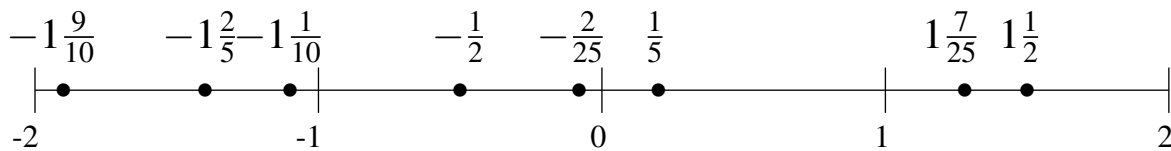
$$-1\frac{3}{5}, -1\frac{1}{4}, 1\frac{1}{5}, -\frac{3}{4}, -\frac{1}{2}, \frac{1}{2}, \frac{1}{4}, \frac{3}{4}$$

$$-1\frac{3}{5}, -1\frac{1}{4}, -\frac{3}{4}, -\frac{1}{2}, \frac{1}{4}, \frac{1}{2}, \frac{3}{4}, 1\frac{1}{5}$$



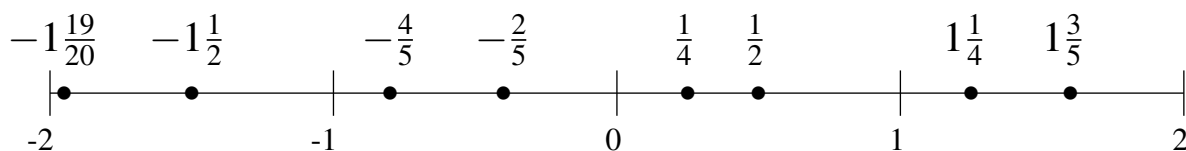
$$-\frac{2}{25}, -\frac{1}{2}, 1\frac{1}{2}, -1\frac{9}{10}, \frac{1}{5}, -1\frac{2}{5}, -1\frac{1}{10}, 1\frac{7}{25}$$

$$-1\frac{9}{10}, -1\frac{2}{5}, -1\frac{1}{10}, -\frac{1}{2}, -\frac{2}{25}, \frac{1}{5}, 1\frac{7}{25}, 1\frac{1}{2}$$



$$\frac{1}{2}, -1\frac{19}{20}, -\frac{2}{5}, -1\frac{1}{2}, 1\frac{1}{4}, 1\frac{3}{5}, \frac{1}{4}, -\frac{4}{5}$$

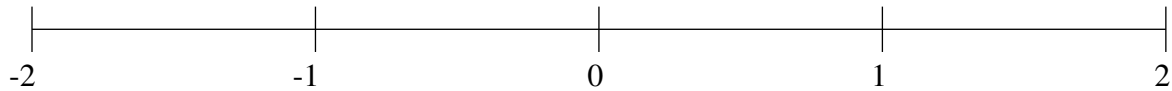
$$-1\frac{19}{20}, -1\frac{1}{2}, -\frac{4}{5}, -\frac{2}{5}, \frac{1}{4}, \frac{1}{2}, 1\frac{1}{4}, 1\frac{3}{5}$$



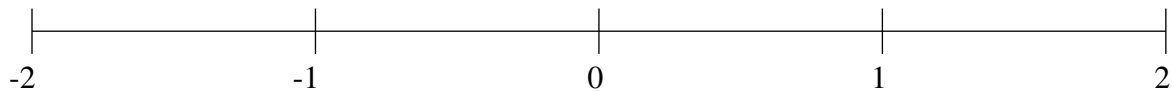
## Ordering Fractions (B)

Order each set of fractions using the number line.

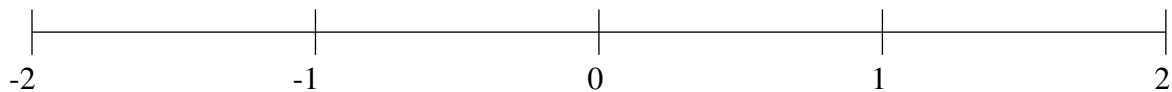
$$-1\frac{1}{2}, \frac{1}{2}, -1\frac{1}{4}, -\frac{1}{4}, -\frac{1}{2}, 1\frac{1}{2}, 1\frac{1}{5}, -\frac{19}{20}$$



$$\frac{3}{5}, -1\frac{1}{2}, -\frac{47}{50}, -1\frac{1}{4}, \frac{1}{5}, -\frac{2}{5}, 1\frac{1}{2}, 1\frac{4}{5}$$



$$-1\frac{1}{5}, \frac{2}{5}, -\frac{1}{5}, -1\frac{1}{2}, -\frac{3}{4}, -\frac{1}{2}, -1\frac{4}{5}, \frac{3}{4}$$

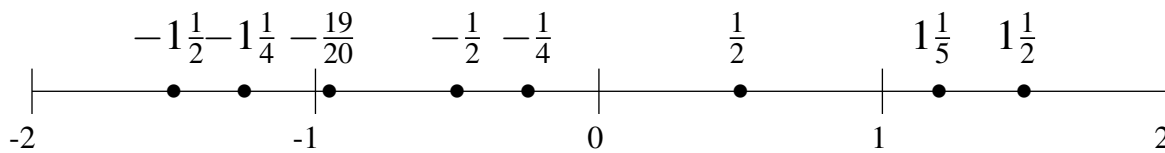


## Ordering Fractions (B) Answers

Order each set of fractions using the number line.

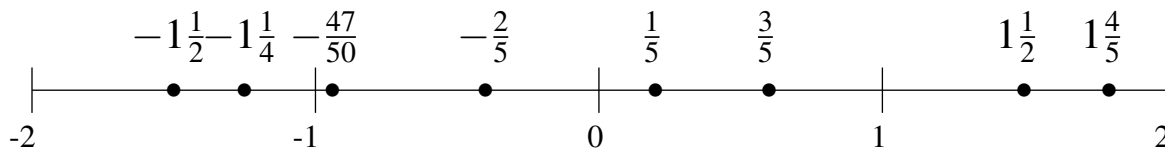
$$-1\frac{1}{2}, \frac{1}{2}, -1\frac{1}{4}, -\frac{1}{4}, -\frac{1}{2}, 1\frac{1}{2}, 1\frac{1}{5}, -\frac{19}{20}$$

$$-1\frac{1}{2}, -1\frac{1}{4}, -\frac{19}{20}, -\frac{1}{2}, -\frac{1}{4}, \frac{1}{2}, 1\frac{1}{5}, 1\frac{1}{2}$$



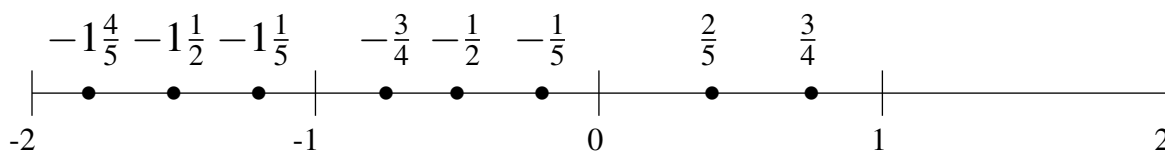
$$\frac{3}{5}, -1\frac{1}{2}, -\frac{47}{50}, -1\frac{1}{4}, \frac{1}{5}, -\frac{2}{5}, 1\frac{1}{2}, 1\frac{4}{5}$$

$$-1\frac{1}{2}, -1\frac{1}{4}, -\frac{47}{50}, -\frac{2}{5}, \frac{1}{5}, \frac{3}{5}, 1\frac{1}{2}, 1\frac{4}{5}$$



$$-1\frac{1}{5}, \frac{2}{5}, -\frac{1}{5}, -1\frac{1}{2}, -\frac{3}{4}, -\frac{1}{2}, -1\frac{4}{5}, \frac{3}{4}$$

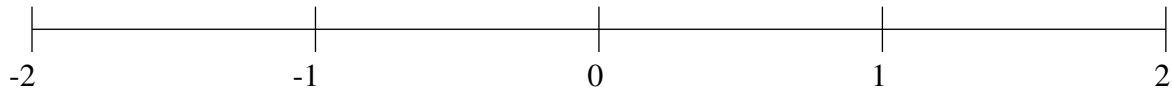
$$-1\frac{4}{5}, -1\frac{1}{2}, -1\frac{1}{5}, -\frac{3}{4}, -\frac{1}{2}, -\frac{1}{5}, \frac{2}{5}, \frac{3}{4}$$



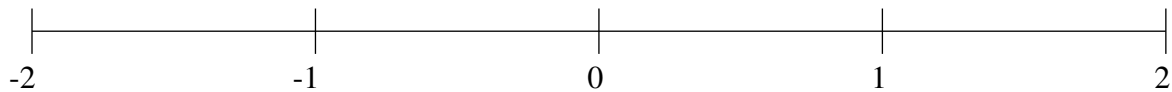
## Ordering Fractions (C)

Order each set of fractions using the number line.

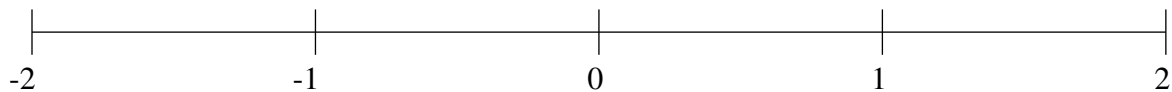
$$-1\frac{3}{4}, \frac{1}{2}, -1\frac{1}{2}, 1\frac{7}{10}, -1\frac{1}{5}, \frac{22}{25}, 1\frac{3}{25}, -\frac{3}{5}$$



$$-\frac{1}{2}, \frac{1}{2}, -1\frac{1}{10}, -1\frac{11}{25}, 1\frac{1}{4}, -\frac{3}{4}, 1\frac{21}{25}, 1\frac{1}{2}$$



$$-\frac{1}{5}, -\frac{1}{2}, -\frac{4}{5}, -1\frac{1}{2}, \frac{17}{20}, \frac{1}{2}, -1\frac{4}{25}, 1\frac{3}{5}$$



## Ordering Fractions (C) Answers

Order each set of fractions using the number line.

$$-1\frac{3}{4}, \frac{1}{2}, -1\frac{1}{2}, 1\frac{7}{10}, -1\frac{1}{5}, \frac{22}{25}, 1\frac{3}{25}, -\frac{3}{5}$$

$$-1\frac{3}{4}, -1\frac{1}{2}, -1\frac{1}{5}, -\frac{3}{5}, \frac{1}{2}, \frac{22}{25}, 1\frac{3}{25}, 1\frac{7}{10}$$



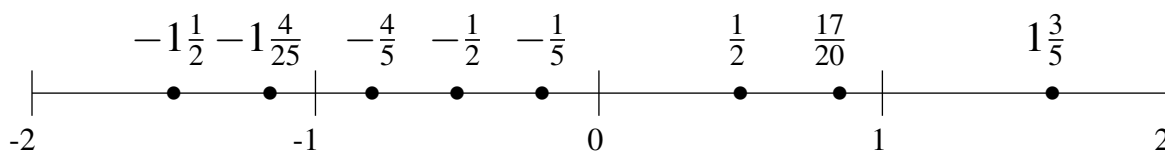
$$-\frac{1}{2}, \frac{1}{2}, -1\frac{1}{10}, -1\frac{11}{25}, 1\frac{1}{4}, -\frac{3}{4}, 1\frac{21}{25}, 1\frac{1}{2}$$

$$-1\frac{11}{25}, -1\frac{1}{10}, -\frac{3}{4}, -\frac{1}{2}, \frac{1}{2}, 1\frac{1}{4}, 1\frac{1}{2}, 1\frac{21}{25}$$



$$-\frac{1}{5}, -\frac{1}{2}, -\frac{4}{5}, -1\frac{1}{2}, \frac{17}{20}, \frac{1}{2}, -1\frac{4}{25}, 1\frac{3}{5}$$

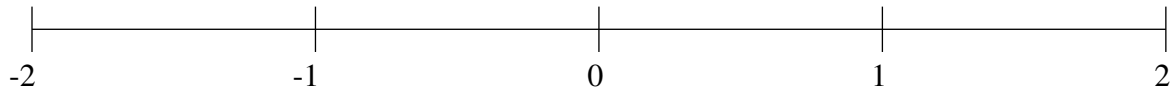
$$-1\frac{1}{2}, -1\frac{4}{25}, -\frac{4}{5}, -\frac{1}{2}, -\frac{1}{5}, \frac{1}{2}, \frac{17}{20}, 1\frac{3}{5}$$



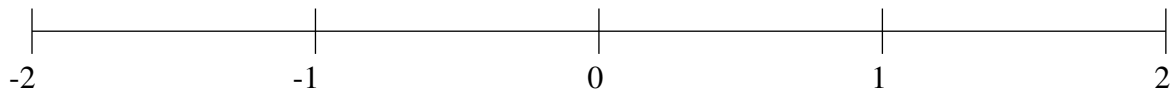
## Ordering Fractions (D)

Order each set of fractions using the number line.

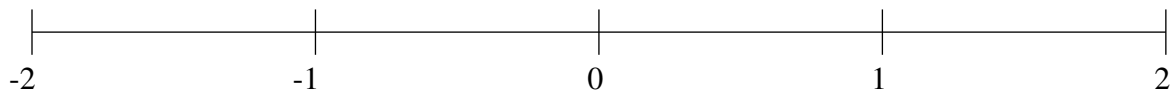
$$\frac{1}{5}, -\frac{1}{5}, 1\frac{1}{2}, -1\frac{1}{4}, -\frac{11}{25}, \frac{4}{5}, -1\frac{19}{20}, 1\frac{4}{5}$$



$$1\frac{1}{2}, \frac{7}{10}, -\frac{1}{5}, 1\frac{4}{5}, -\frac{37}{50}, \frac{1}{5}, -1\frac{9}{20}, 1\frac{1}{5}$$



$$1\frac{1}{50}, \frac{1}{2}, -\frac{1}{4}, \frac{1}{4}, 1\frac{1}{2}, -1\frac{1}{10}, -1\frac{3}{5}, -\frac{12}{25}$$

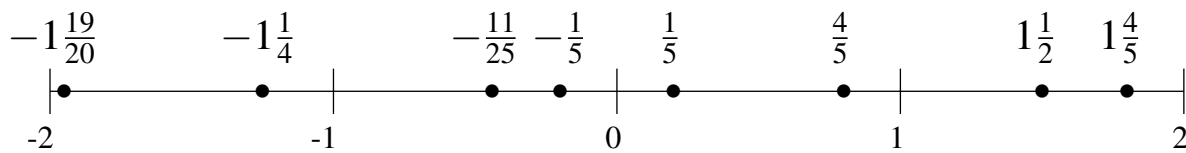


## Ordering Fractions (D) Answers

Order each set of fractions using the number line.

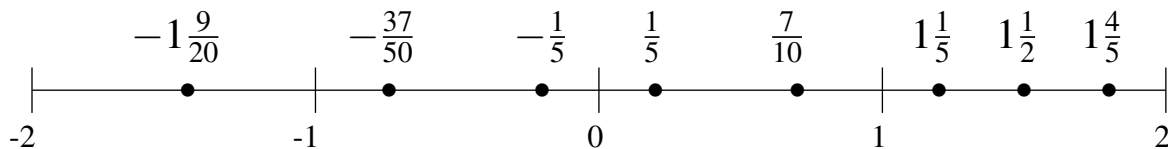
$$\frac{1}{5}, -\frac{1}{5}, 1\frac{1}{2}, -1\frac{1}{4}, -\frac{11}{25}, \frac{4}{5}, -1\frac{19}{20}, 1\frac{4}{5}$$

$$-1\frac{19}{20}, -1\frac{1}{4}, -\frac{11}{25}, -\frac{1}{5}, \frac{1}{5}, \frac{4}{5}, 1\frac{1}{2}, 1\frac{4}{5}$$



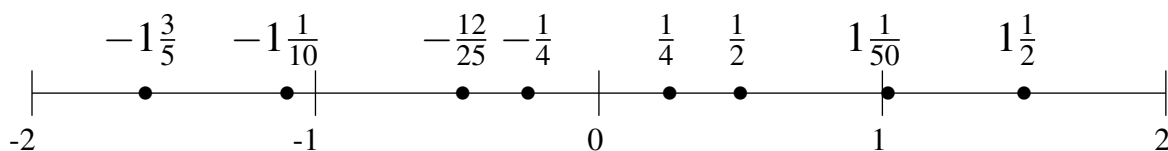
$$1\frac{1}{2}, \frac{7}{10}, -\frac{1}{5}, 1\frac{4}{5}, -\frac{37}{50}, \frac{1}{5}, -1\frac{9}{20}, 1\frac{1}{5}$$

$$-1\frac{9}{20}, -\frac{37}{50}, -\frac{1}{5}, \frac{1}{5}, \frac{7}{10}, 1\frac{1}{5}, 1\frac{1}{2}, 1\frac{4}{5}$$



$$1\frac{1}{50}, \frac{1}{2}, -\frac{1}{4}, \frac{1}{4}, 1\frac{1}{2}, -1\frac{1}{10}, -1\frac{3}{5}, -\frac{12}{25}$$

$$-1\frac{3}{5}, -1\frac{1}{10}, -\frac{12}{25}, -\frac{1}{4}, \frac{1}{4}, \frac{1}{2}, 1\frac{1}{50}, 1\frac{1}{2}$$

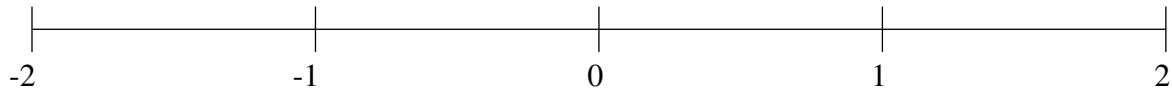




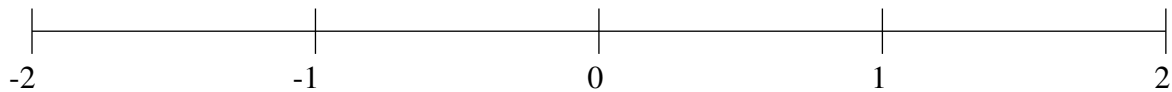
## Ordering Fractions (E)

Order each set of fractions using the number line.

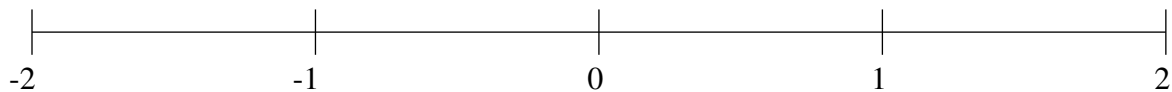
$$-1\frac{1}{4}, 1\frac{1}{2}, -\frac{4}{5}, -1\frac{4}{5}, \frac{1}{2}, 1\frac{4}{5}, -\frac{1}{2}, \frac{1}{5}$$



$$1\frac{1}{2}, \frac{1}{5}, 1\frac{3}{100}, -1\frac{19}{20}, 1\frac{3}{4}, -1\frac{11}{25}, \frac{4}{5}, \frac{1}{2}$$



$$-1\frac{1}{2}, \frac{2}{5}, -\frac{4}{5}, \frac{3}{4}, -\frac{3}{20}, 1\frac{3}{10}, 1\frac{49}{50}, 1\frac{13}{20}$$

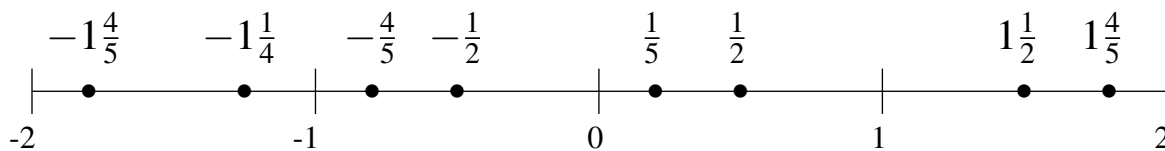


## Ordering Fractions (E) Answers

Order each set of fractions using the number line.

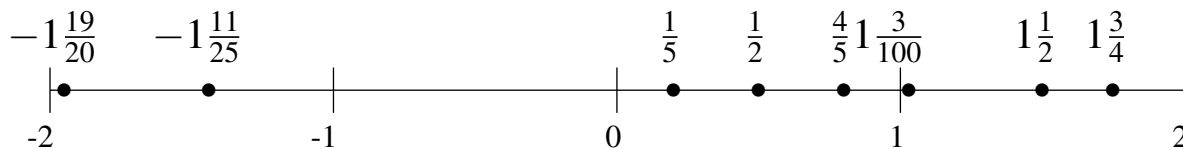
$$-1\frac{1}{4}, 1\frac{1}{2}, -\frac{4}{5}, -1\frac{4}{5}, \frac{1}{2}, 1\frac{4}{5}, -\frac{1}{2}, \frac{1}{5}$$

$$-1\frac{4}{5}, -1\frac{1}{4}, -\frac{4}{5}, -\frac{1}{2}, \frac{1}{5}, \frac{1}{2}, 1\frac{1}{2}, 1\frac{4}{5}$$



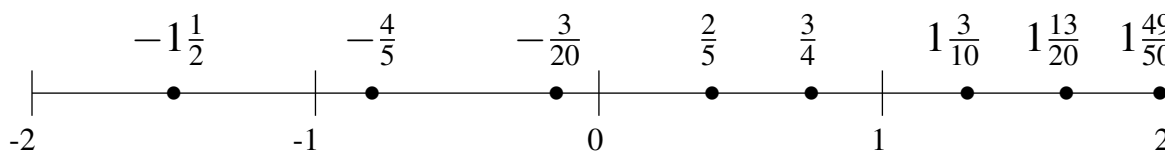
$$1\frac{1}{2}, \frac{1}{5}, 1\frac{3}{100}, -1\frac{19}{20}, 1\frac{3}{4}, -1\frac{11}{25}, \frac{4}{5}, \frac{1}{2}$$

$$-1\frac{19}{20}, -1\frac{11}{25}, \frac{1}{5}, \frac{1}{2}, \frac{4}{5}, 1\frac{3}{100}, 1\frac{1}{2}, 1\frac{3}{4}$$



$$-1\frac{1}{2}, \frac{2}{5}, -\frac{4}{5}, \frac{3}{4}, -\frac{3}{20}, 1\frac{3}{10}, 1\frac{49}{50}, 1\frac{13}{20}$$

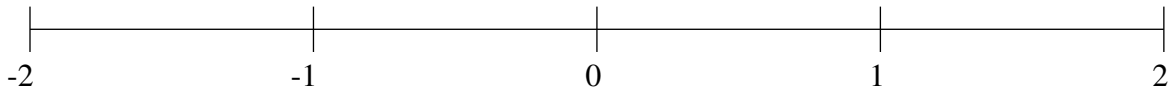
$$-1\frac{1}{2}, -\frac{4}{5}, -\frac{3}{20}, \frac{2}{5}, \frac{3}{4}, 1\frac{3}{10}, 1\frac{13}{20}, 1\frac{49}{50}$$



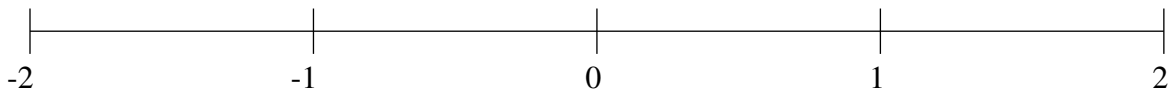
## Ordering Fractions (F)

Order each set of fractions using the number line.

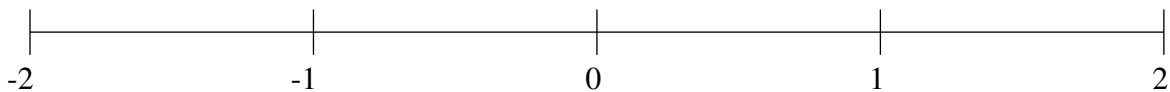
$$-\frac{3}{4}, -1\frac{1}{2}, -\frac{3}{10}, 1\frac{4}{5}, -1\frac{1}{5}, \frac{1}{4}, -1\frac{9}{10}, 1\frac{1}{2}$$



$$-\frac{1}{2}, 1\frac{4}{5}, -\frac{1}{4}, \frac{2}{5}, -1\frac{1}{2}, -1\frac{1}{4}, -\frac{3}{4}, \frac{3}{25}$$



$$-1\frac{3}{10}, -1\frac{3}{5}, 1\frac{1}{50}, \frac{4}{5}, \frac{1}{2}, 1\frac{3}{4}, -1\frac{9}{10}, -\frac{1}{2}$$

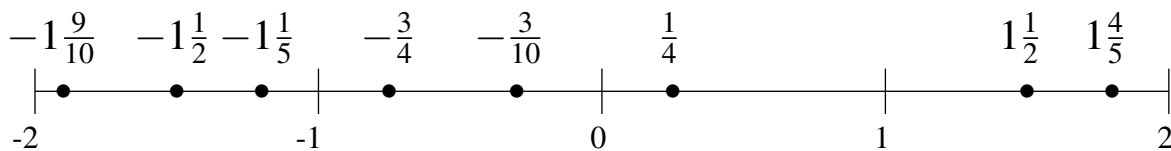


## Ordering Fractions (F) Answers

Order each set of fractions using the number line.

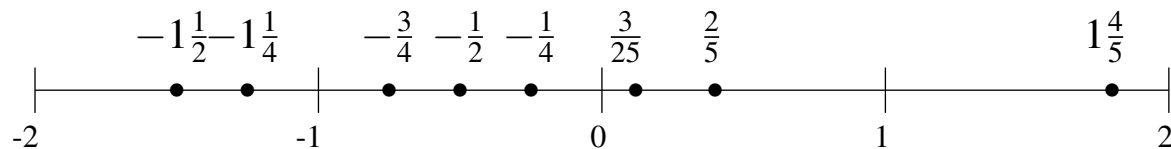
$$-\frac{3}{4}, -1\frac{1}{2}, -\frac{3}{10}, 1\frac{4}{5}, -1\frac{1}{5}, \frac{1}{4}, -1\frac{9}{10}, 1\frac{1}{2}$$

$$-1\frac{9}{10}, -1\frac{1}{2}, -1\frac{1}{5}, -\frac{3}{4}, -\frac{3}{10}, \frac{1}{4}, 1\frac{1}{2}, 1\frac{4}{5}$$



$$-\frac{1}{2}, 1\frac{4}{5}, -\frac{1}{4}, \frac{2}{5}, -1\frac{1}{2}, -1\frac{1}{4}, -\frac{3}{4}, \frac{3}{25}$$

$$-1\frac{1}{2}, -1\frac{1}{4}, -\frac{3}{4}, -\frac{1}{2}, -\frac{1}{4}, \frac{3}{25}, \frac{2}{5}, 1\frac{4}{5}$$



$$-1\frac{3}{10}, -1\frac{3}{5}, 1\frac{1}{50}, \frac{4}{5}, \frac{1}{2}, 1\frac{3}{4}, -1\frac{9}{10}, -\frac{1}{2}$$

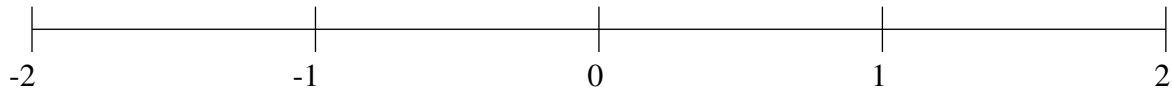
$$-1\frac{9}{10}, -1\frac{3}{5}, -1\frac{3}{10}, -\frac{1}{2}, \frac{1}{2}, \frac{4}{5}, 1\frac{1}{50}, 1\frac{3}{4}$$



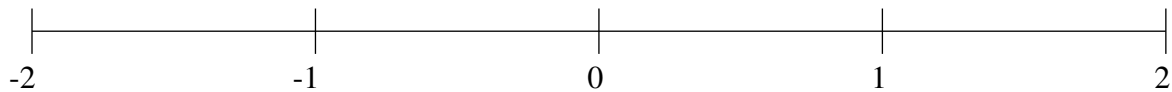
## Ordering Fractions (G)

Order each set of fractions using the number line.

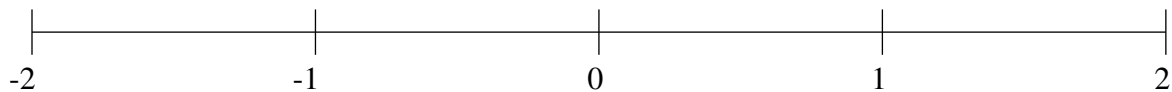
$$-1\frac{1}{5}, -\frac{1}{4}, -\frac{18}{25}, 1\frac{2}{5}, 1\frac{1}{10}, -1\frac{4}{5}, \frac{4}{5}, \frac{1}{4}$$



$$-1\frac{1}{4}, \frac{3}{4}, -\frac{3}{4}, -\frac{1}{10}, 1\frac{1}{5}, 1\frac{1}{2}, \frac{1}{2}, -\frac{1}{2}$$



$$-\frac{1}{2}, -1\frac{14}{25}, \frac{3}{4}, 1\frac{3}{20}, \frac{7}{50}, -1\frac{3}{10}, -\frac{4}{5}, 1\frac{1}{2}$$

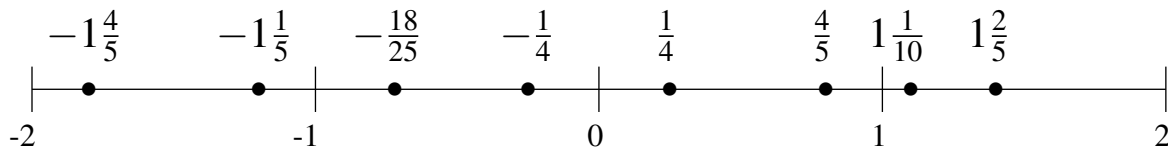


## Ordering Fractions (G) Answers

Order each set of fractions using the number line.

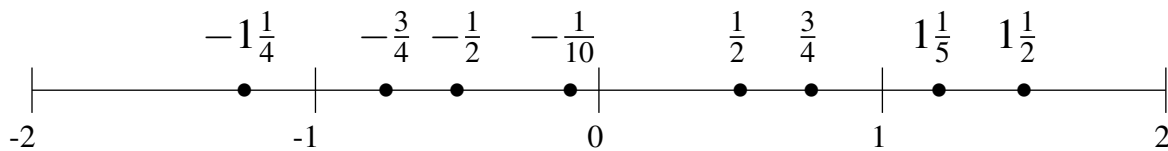
$$-1\frac{1}{5}, -\frac{1}{4}, -\frac{18}{25}, 1\frac{2}{5}, 1\frac{1}{10}, -1\frac{4}{5}, \frac{4}{5}, \frac{1}{4}$$

$$-1\frac{4}{5}, -1\frac{1}{5}, -\frac{18}{25}, -\frac{1}{4}, \frac{1}{4}, \frac{4}{5}, 1\frac{1}{10}, 1\frac{2}{5}$$



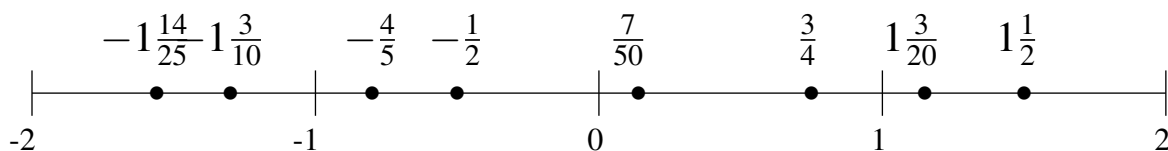
$$-1\frac{1}{4}, \frac{3}{4}, -\frac{3}{4}, -\frac{1}{10}, 1\frac{1}{5}, 1\frac{1}{2}, \frac{1}{2}, -\frac{1}{2}$$

$$-1\frac{1}{4}, -\frac{3}{4}, -\frac{1}{2}, -\frac{1}{10}, \frac{1}{2}, \frac{3}{4}, 1\frac{1}{5}, 1\frac{1}{2}$$



$$-\frac{1}{2}, -1\frac{14}{25}, \frac{3}{4}, 1\frac{3}{20}, \frac{7}{50}, -1\frac{3}{10}, -\frac{4}{5}, 1\frac{1}{2}$$

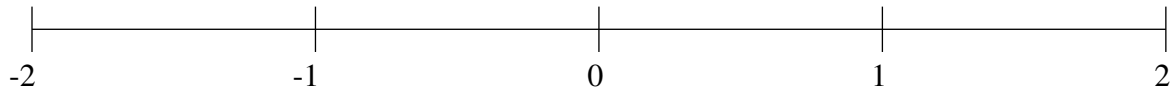
$$-1\frac{14}{25}, -1\frac{3}{10}, -\frac{4}{5}, -\frac{1}{2}, \frac{7}{50}, \frac{3}{4}, 1\frac{3}{20}, 1\frac{1}{2}$$



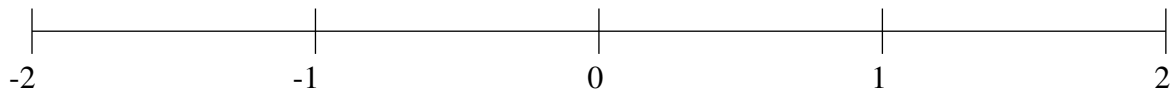
## Ordering Fractions (H)

Order each set of fractions using the number line.

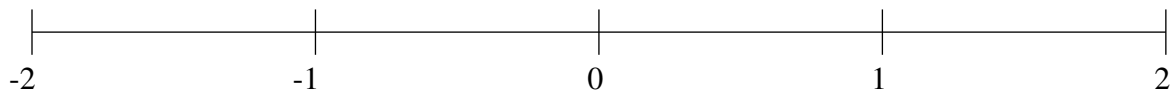
$$-\frac{3}{4}, -\frac{1}{2}, \frac{3}{4}, -\frac{1}{10}, -1\frac{41}{50}, 1\frac{3}{4}, -1\frac{3}{5}, 1\frac{1}{2}$$



$$-\frac{1}{5}, 1\frac{1}{5}, -\frac{3}{4}, 1\frac{3}{4}, -\frac{1}{2}, 1\frac{1}{2}, \frac{1}{2}, -1\frac{3}{4}$$



$$-1\frac{1}{2}, 1\frac{3}{4}, 1\frac{13}{25}, \frac{2}{5}, -\frac{19}{20}, 1\frac{1}{5}, -1\frac{18}{25}, -\frac{3}{5}$$

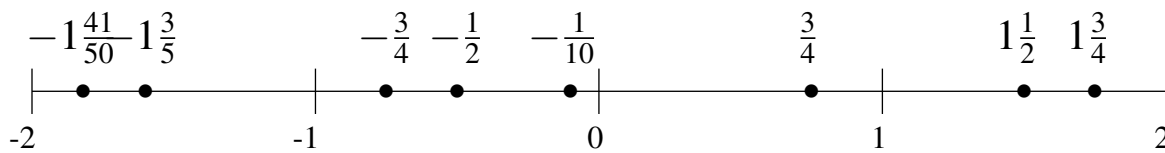


## Ordering Fractions (H) Answers

Order each set of fractions using the number line.

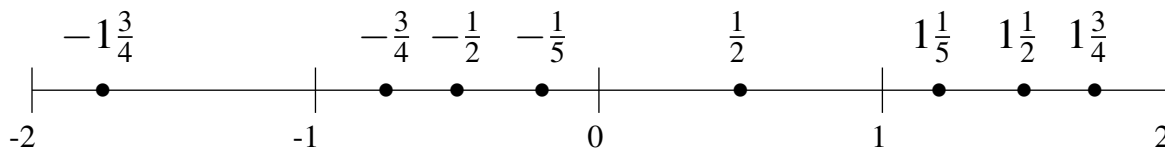
$$-\frac{3}{4}, -\frac{1}{2}, \frac{3}{4}, -\frac{1}{10}, -1\frac{41}{50}, 1\frac{3}{4}, -1\frac{3}{5}, 1\frac{1}{2}$$

$$-1\frac{41}{50}, -1\frac{3}{5}, -\frac{3}{4}, -\frac{1}{2}, -\frac{1}{10}, \frac{3}{4}, 1\frac{1}{2}, 1\frac{3}{4}$$



$$-\frac{1}{5}, 1\frac{1}{5}, -\frac{3}{4}, 1\frac{3}{4}, -\frac{1}{2}, 1\frac{1}{2}, \frac{1}{2}, -1\frac{3}{4}$$

$$-1\frac{3}{4}, -\frac{3}{4}, -\frac{1}{2}, -\frac{1}{5}, \frac{1}{2}, 1\frac{1}{5}, 1\frac{1}{2}, 1\frac{3}{4}$$



$$-1\frac{1}{2}, 1\frac{3}{4}, 1\frac{13}{25}, \frac{2}{5}, -\frac{19}{20}, 1\frac{1}{5}, -1\frac{18}{25}, -\frac{3}{5}$$

$$-1\frac{18}{25}, -1\frac{1}{2}, -\frac{19}{20}, -\frac{3}{5}, \frac{2}{5}, 1\frac{1}{5}, 1\frac{13}{25}, 1\frac{3}{4}$$

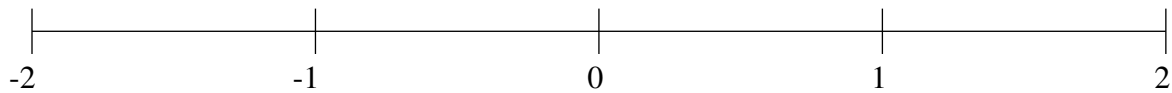




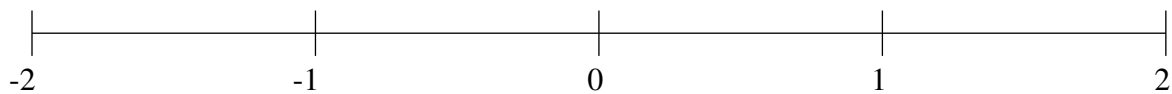
## Ordering Fractions (I)

Order each set of fractions using the number line.

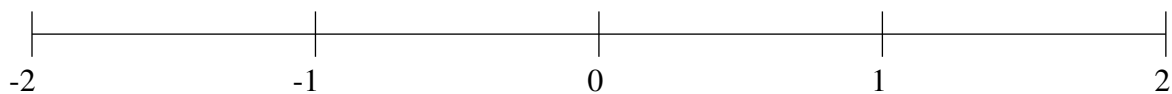
$$1\frac{2}{5}, 1\frac{3}{25}, -1\frac{1}{2}, -\frac{1}{4}, \frac{1}{2}, -1\frac{1}{20}, \frac{1}{4}, -\frac{4}{5}$$



$$\frac{1}{4}, -1\frac{4}{5}, -\frac{1}{2}, -1\frac{1}{2}, 1\frac{7}{10}, -\frac{9}{10}, \frac{3}{5}, -1\frac{1}{4}$$



$$-1\frac{1}{2}, -\frac{3}{4}, \frac{3}{5}, -1\frac{4}{5}, 1\frac{1}{2}, -\frac{1}{4}, 1\frac{4}{5}, 1\frac{1}{5}$$

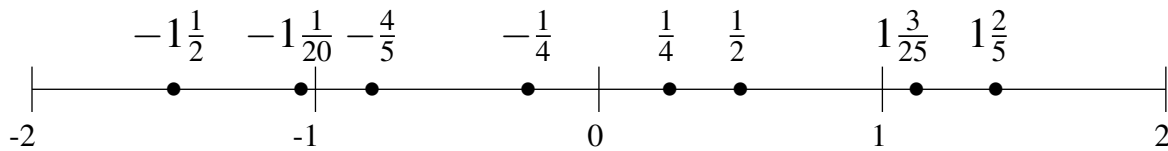


## Ordering Fractions (I) Answers

Order each set of fractions using the number line.

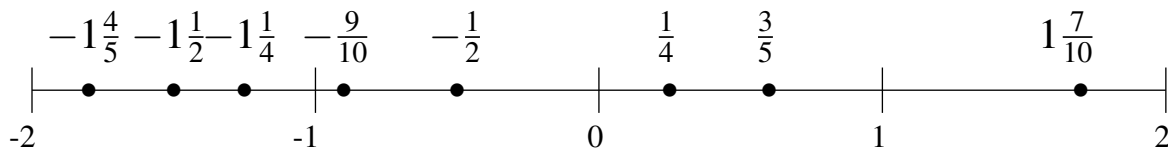
$$1\frac{2}{5}, 1\frac{3}{25}, -1\frac{1}{2}, -\frac{1}{4}, \frac{1}{2}, -1\frac{1}{20}, \frac{1}{4}, -\frac{4}{5}$$

$$-1\frac{1}{2}, -1\frac{1}{20}, -\frac{4}{5}, -\frac{1}{4}, \frac{1}{4}, \frac{1}{2}, 1\frac{3}{25}, 1\frac{2}{5}$$



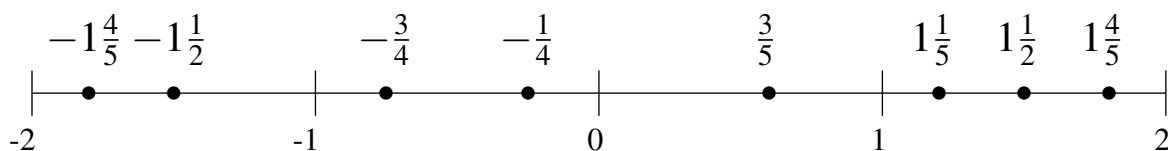
$$\frac{1}{4}, -1\frac{4}{5}, -\frac{1}{2}, -1\frac{1}{2}, 1\frac{7}{10}, -\frac{9}{10}, \frac{3}{5}, -1\frac{1}{4}$$

$$-1\frac{4}{5}, -1\frac{1}{2}, -1\frac{1}{4}, -\frac{9}{10}, -\frac{1}{2}, \frac{1}{4}, \frac{3}{5}, 1\frac{7}{10}$$



$$-1\frac{1}{2}, -\frac{3}{4}, \frac{3}{5}, -1\frac{4}{5}, 1\frac{1}{2}, -\frac{1}{4}, 1\frac{4}{5}, 1\frac{1}{5}$$

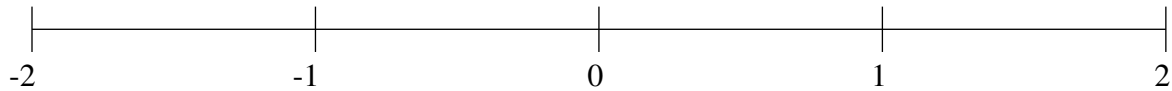
$$-1\frac{4}{5}, -1\frac{1}{2}, -\frac{3}{4}, -\frac{1}{4}, \frac{3}{5}, 1\frac{1}{5}, 1\frac{1}{2}, 1\frac{4}{5}$$



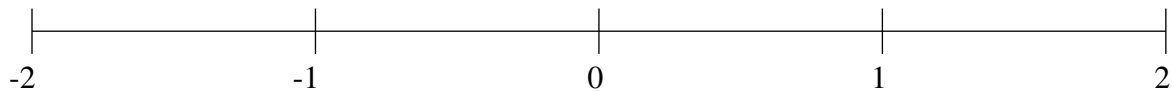
## Ordering Fractions (J)

Order each set of fractions using the number line.

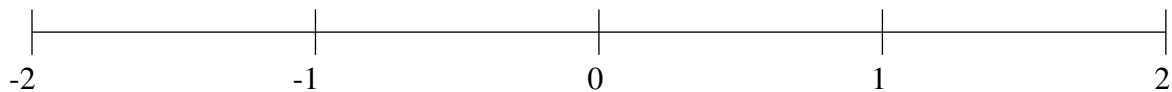
$$-\frac{1}{2}, -\frac{7}{25}, \frac{11}{20}, \frac{8}{25}, -1\frac{1}{2}, 1\frac{4}{5}, 1\frac{1}{2}, -\frac{18}{25}$$



$$\frac{1}{2}, 1\frac{22}{25}, -1\frac{3}{4}, 1\frac{3}{5}, -1\frac{1}{5}, -\frac{3}{5}, \frac{3}{4}, \frac{1}{5}$$



$$1\frac{3}{4}, -1\frac{3}{5}, -\frac{11}{50}, -\frac{1}{2}, \frac{1}{2}, \frac{1}{5}, -\frac{9}{10}, -1\frac{1}{4}$$

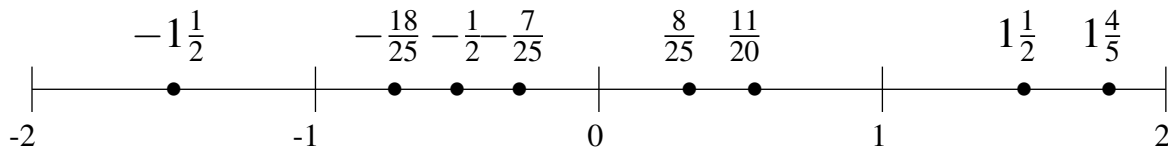


## Ordering Fractions (J) Answers

Order each set of fractions using the number line.

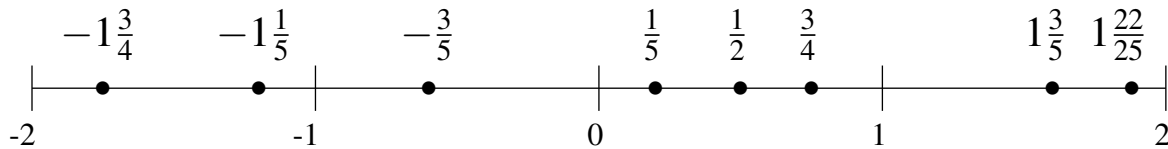
$$-\frac{1}{2}, -\frac{7}{25}, \frac{11}{20}, \frac{8}{25}, -1\frac{1}{2}, 1\frac{4}{5}, 1\frac{1}{2}, -\frac{18}{25}$$

$$-1\frac{1}{2}, -\frac{18}{25}, -\frac{1}{2}, -\frac{7}{25}, \frac{8}{25}, \frac{11}{20}, 1\frac{1}{2}, 1\frac{4}{5}$$



$$\frac{1}{2}, 1\frac{22}{25}, -1\frac{3}{4}, 1\frac{3}{5}, -1\frac{1}{5}, -\frac{3}{5}, \frac{3}{4}, \frac{1}{5}$$

$$-1\frac{3}{4}, -1\frac{1}{5}, -\frac{3}{5}, \frac{1}{5}, \frac{1}{2}, \frac{3}{4}, 1\frac{3}{5}, 1\frac{22}{25}$$



$$1\frac{3}{4}, -1\frac{3}{5}, -\frac{11}{50}, -\frac{1}{2}, \frac{1}{2}, \frac{1}{5}, -\frac{9}{10}, -1\frac{1}{4}$$

$$-1\frac{3}{5}, -1\frac{1}{4}, -\frac{9}{10}, -\frac{1}{2}, -\frac{11}{50}, \frac{1}{5}, \frac{1}{2}, 1\frac{3}{4}$$

