

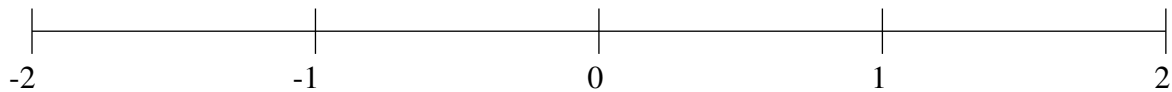
Ordering Fractions (J)

Order each set of fractions using the number line.

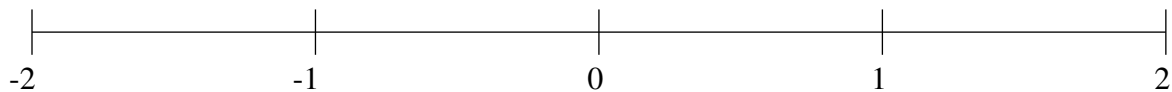
$$-\frac{1}{2}, -\frac{7}{25}, \frac{11}{20}, \frac{8}{25}, -1\frac{1}{2}, 1\frac{4}{5}, 1\frac{1}{2}, -\frac{18}{25}$$



$$\frac{1}{2}, 1\frac{22}{25}, -1\frac{3}{4}, 1\frac{3}{5}, -1\frac{1}{5}, -\frac{3}{5}, \frac{3}{4}, \frac{1}{5}$$



$$1\frac{3}{4}, -1\frac{3}{5}, -\frac{11}{50}, -\frac{1}{2}, \frac{1}{2}, \frac{1}{5}, -\frac{9}{10}, -1\frac{1}{4}$$

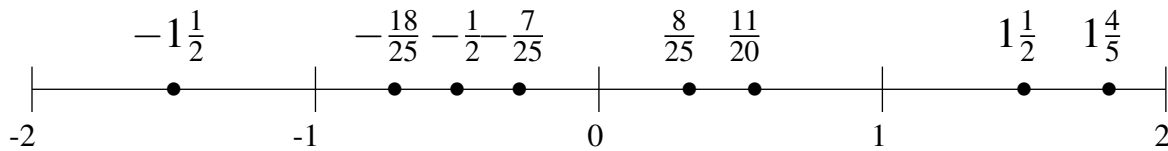


Ordering Fractions (J) Answers

Order each set of fractions using the number line.

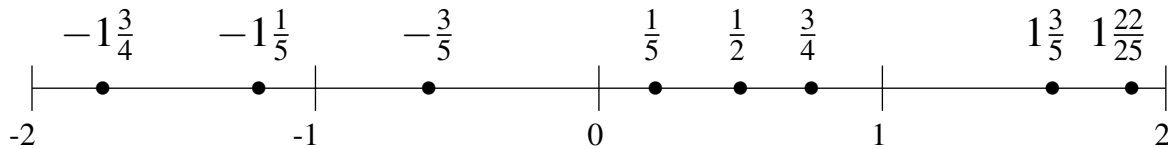
$$-\frac{1}{2}, -\frac{7}{25}, \frac{11}{20}, \frac{8}{25}, -1\frac{1}{2}, 1\frac{4}{5}, 1\frac{1}{2}, -\frac{18}{25}$$

$$-1\frac{1}{2}, -\frac{18}{25}, -\frac{1}{2}, -\frac{7}{25}, \frac{8}{25}, \frac{11}{20}, 1\frac{1}{2}, 1\frac{4}{5}$$



$$\frac{1}{2}, 1\frac{22}{25}, -1\frac{3}{4}, 1\frac{3}{5}, -1\frac{1}{5}, -\frac{3}{5}, \frac{3}{4}, \frac{1}{5}$$

$$-1\frac{3}{4}, -1\frac{1}{5}, -\frac{3}{5}, \frac{1}{5}, \frac{1}{2}, \frac{3}{4}, 1\frac{3}{5}, 1\frac{22}{25}$$



$$1\frac{3}{4}, -1\frac{3}{5}, -\frac{11}{50}, -\frac{1}{2}, \frac{1}{2}, \frac{1}{5}, -\frac{9}{10}, -1\frac{1}{4}$$

$$-1\frac{3}{5}, -1\frac{1}{4}, -\frac{9}{10}, -\frac{1}{2}, -\frac{11}{50}, \frac{1}{5}, \frac{1}{2}, 1\frac{3}{4}$$

