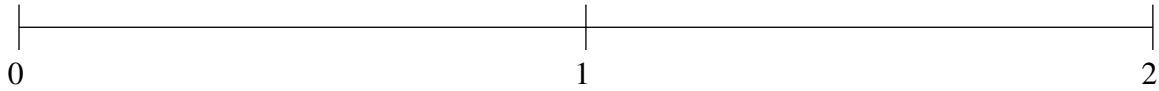


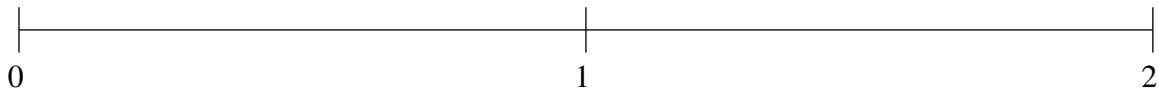
Ordering Fractions (H)

Order each set of fractions using the number line.

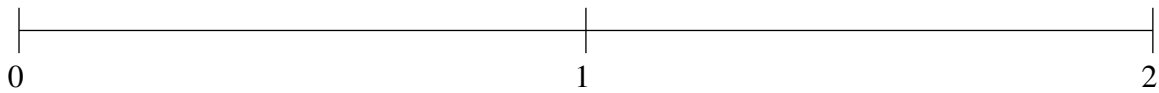
$$1\frac{1}{3}, \frac{1}{6}, \frac{11}{12}, 1\frac{2}{3}, \frac{3}{5}$$



$$1\frac{5}{6}, \frac{1}{2}, \frac{4}{5}, 1\frac{1}{6}, \frac{1}{4}$$



$$1\frac{1}{2}, 1\frac{3}{4}, \frac{1}{4}, \frac{2}{3}, 1\frac{4}{15}$$

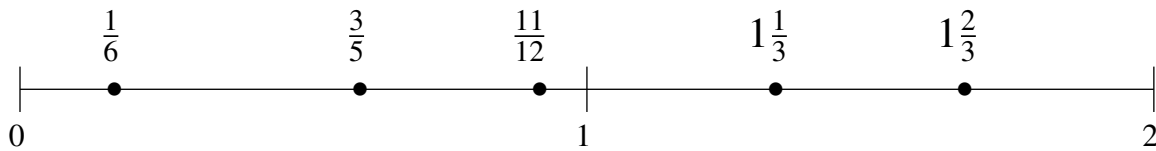


Ordering Fractions (H) Answers

Order each set of fractions using the number line.

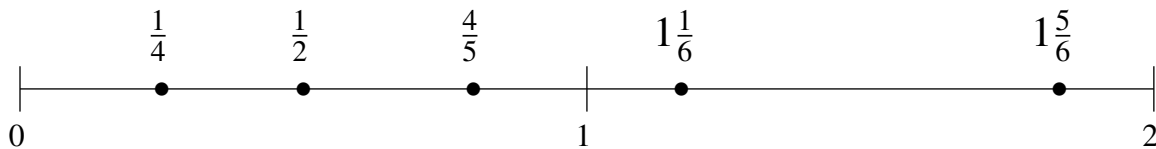
$$1\frac{1}{3}, \frac{1}{6}, \frac{11}{12}, 1\frac{2}{3}, \frac{3}{5}$$

$$\frac{1}{6}, \frac{3}{5}, \frac{11}{12}, 1\frac{1}{3}, 1\frac{2}{3}$$



$$1\frac{5}{6}, \frac{1}{2}, \frac{4}{5}, 1\frac{1}{6}, \frac{1}{4}$$

$$\frac{1}{4}, \frac{1}{2}, \frac{4}{5}, 1\frac{1}{6}, 1\frac{5}{6}$$



$$1\frac{1}{2}, 1\frac{3}{4}, \frac{1}{4}, \frac{2}{3}, 1\frac{4}{15}$$

$$\frac{1}{4}, \frac{2}{3}, 1\frac{4}{15}, 1\frac{1}{2}, 1\frac{3}{4}$$

