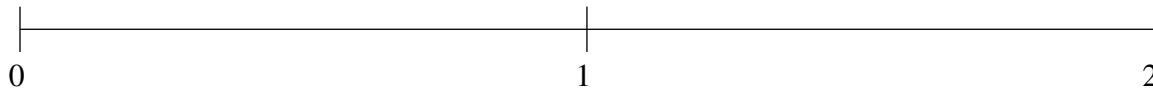


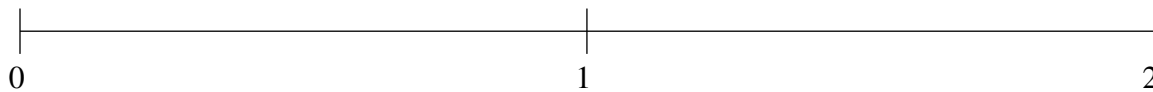
## Ordering Fractions (E)

Order each set of fractions using the number line.

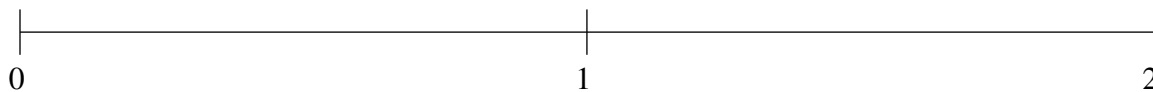
$$\frac{1}{4}, \frac{2}{3}, 1\frac{3}{4}, \frac{11}{12}, 1\frac{1}{2}$$



$$\frac{1}{4}, \frac{29}{30}, 1\frac{1}{2}, 1\frac{1}{4}, \frac{2}{3}$$



$$1\frac{1}{5}, \frac{14}{15}, 1\frac{11}{12}, \frac{1}{4}, \frac{2}{3}$$

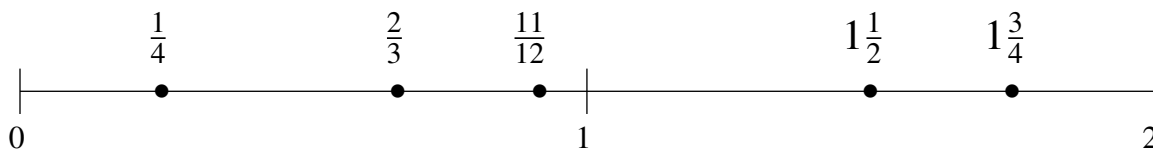


## Ordering Fractions (E) Answers

Order each set of fractions using the number line.

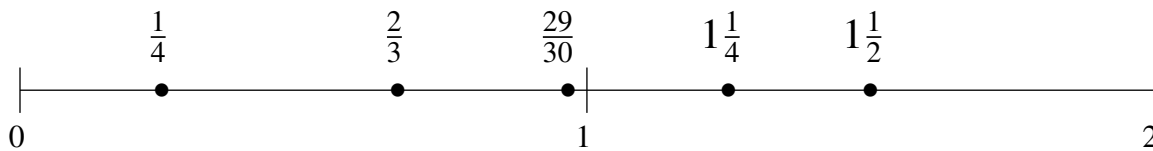
$$\frac{1}{4}, \frac{2}{3}, 1\frac{3}{4}, \frac{11}{12}, 1\frac{1}{2}$$

$$\frac{1}{4}, \frac{2}{3}, \frac{11}{12}, 1\frac{1}{2}, 1\frac{3}{4}$$



$$\frac{1}{4}, \frac{29}{30}, 1\frac{1}{2}, 1\frac{1}{4}, \frac{2}{3}$$

$$\frac{1}{4}, \frac{2}{3}, \frac{29}{30}, 1\frac{1}{4}, 1\frac{1}{2}$$



$$1\frac{1}{5}, \frac{14}{15}, 1\frac{11}{12}, \frac{1}{4}, \frac{2}{3}$$

$$\frac{1}{4}, \frac{2}{3}, \frac{14}{15}, 1\frac{1}{5}, 1\frac{11}{12}$$

