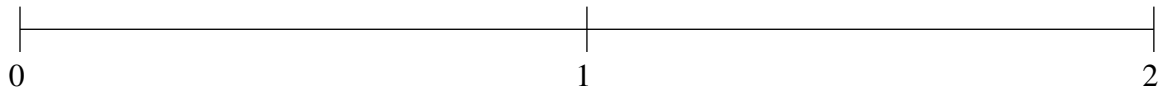


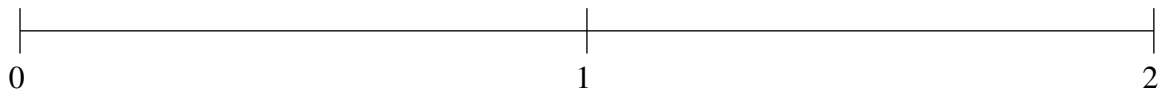
## Ordering Fractions (F)

Order each set of fractions using the number line.

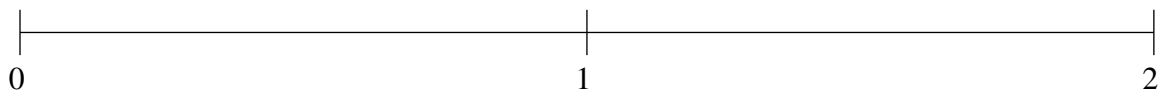
$$\frac{1}{4}, 1\frac{7}{8}, \frac{1}{2}, 1\frac{1}{3}, \frac{7}{8}$$



$$\frac{1}{8}, \frac{1}{3}, \frac{7}{12}, 1\frac{1}{3}, \frac{11}{12}$$



$$\frac{1}{4}, 1\frac{7}{24}, \frac{1}{2}, \frac{5}{6}, 1\frac{1}{2}$$

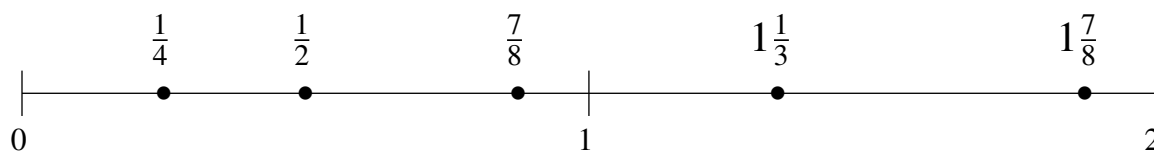


## Ordering Fractions (F) Answers

Order each set of fractions using the number line.

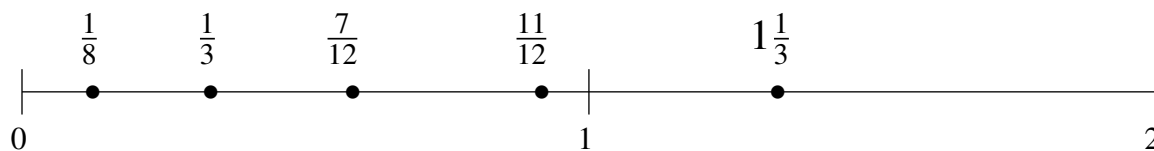
$$\frac{1}{4}, 1\frac{7}{8}, \frac{1}{2}, 1\frac{1}{3}, \frac{7}{8}$$

$$\frac{1}{4}, \frac{1}{2}, \frac{7}{8}, 1\frac{1}{3}, 1\frac{7}{8}$$



$$\frac{1}{8}, \frac{1}{3}, \frac{7}{12}, 1\frac{1}{3}, \frac{11}{12}$$

$$\frac{1}{8}, \frac{1}{3}, \frac{7}{12}, \frac{11}{12}, 1\frac{1}{3}$$



$$\frac{1}{4}, 1\frac{7}{24}, \frac{1}{2}, \frac{5}{6}, 1\frac{1}{2}$$

$$\frac{1}{4}, \frac{1}{2}, \frac{5}{6}, 1\frac{7}{24}, 1\frac{1}{2}$$

