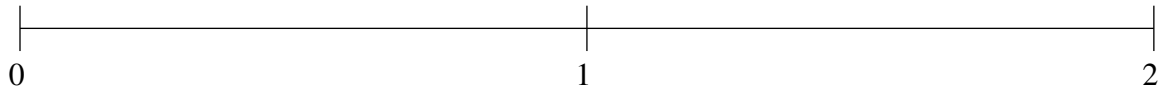


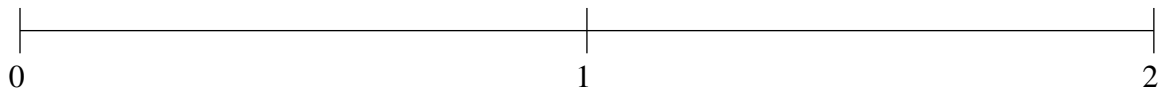
Ordering Fractions (E)

Order each set of fractions using the number line.

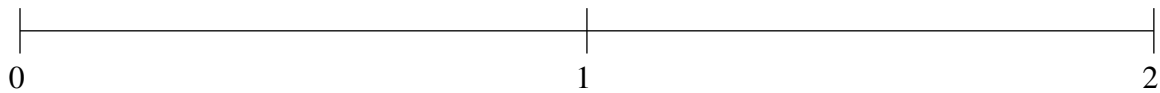
$$\frac{5}{6}, 1\frac{1}{2}, 1\frac{1}{6}, \frac{7}{12}, 1\frac{3}{4}$$



$$\frac{1}{3}, 1\frac{1}{8}, 1\frac{5}{6}, \frac{3}{4}, 1\frac{1}{2}$$



$$1\frac{7}{8}, 1\frac{1}{2}, \frac{3}{4}, \frac{1}{4}, \frac{1}{2}$$



Ordering Fractions (E) Answers

Order each set of fractions using the number line.

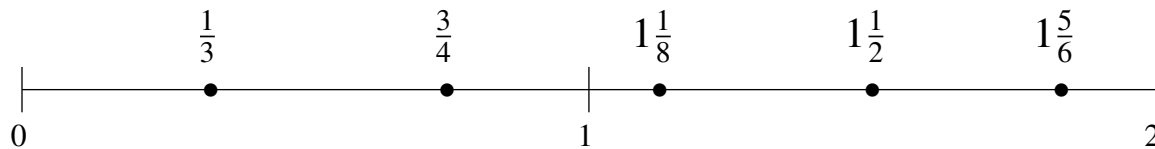
$$\frac{5}{6}, 1\frac{1}{2}, 1\frac{1}{6}, \frac{7}{12}, 1\frac{3}{4}$$

$$\frac{7}{12}, \frac{5}{6}, 1\frac{1}{6}, 1\frac{1}{2}, 1\frac{3}{4}$$



$$\frac{1}{3}, 1\frac{1}{8}, 1\frac{5}{6}, \frac{3}{4}, 1\frac{1}{2}$$

$$\frac{1}{3}, \frac{3}{4}, 1\frac{1}{8}, 1\frac{1}{2}, 1\frac{5}{6}$$



$$1\frac{7}{8}, 1\frac{1}{2}, \frac{3}{4}, \frac{1}{4}, \frac{1}{2}$$

$$\frac{1}{4}, \frac{1}{2}, \frac{3}{4}, 1\frac{1}{2}, 1\frac{7}{8}$$

