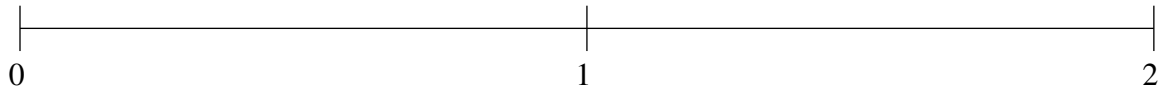


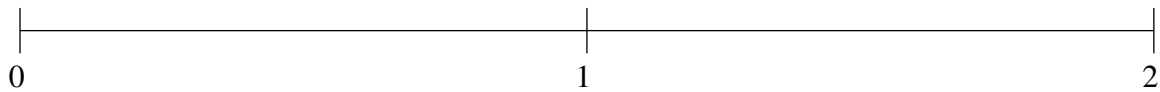
Ordering Fractions (D)

Order each set of fractions using the number line.

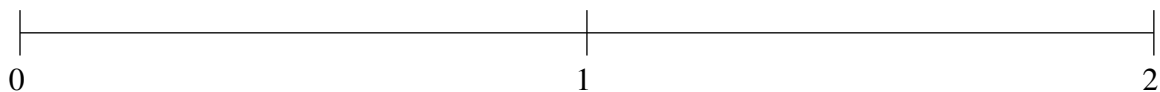
$$\frac{7}{8}, 1\frac{1}{3}, 1\frac{2}{3}, \frac{5}{12}, \frac{2}{3}$$



$$\frac{5}{6}, \frac{1}{4}, \frac{1}{24}, \frac{1}{2}, 1\frac{1}{3}$$



$$\frac{1}{2}, \frac{1}{4}, 1\frac{3}{4}, 1\frac{1}{2}, \frac{7}{8}$$

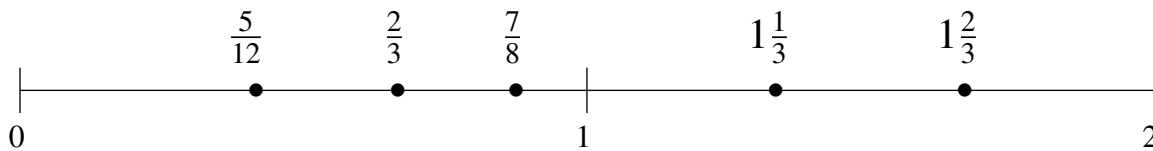


Ordering Fractions (D) Answers

Order each set of fractions using the number line.

$$\frac{7}{8}, 1\frac{1}{3}, 1\frac{2}{3}, \frac{5}{12}, \frac{2}{3}$$

$$\frac{5}{12}, \frac{2}{3}, \frac{7}{8}, 1\frac{1}{3}, 1\frac{2}{3}$$



$$\frac{5}{6}, \frac{1}{4}, \frac{1}{24}, \frac{1}{2}, 1\frac{1}{3}$$

$$\frac{1}{24}, \frac{1}{4}, \frac{1}{2}, \frac{5}{6}, 1\frac{1}{3}$$



$$\frac{1}{2}, \frac{1}{4}, 1\frac{3}{4}, 1\frac{1}{2}, \frac{7}{8}$$

$$\frac{1}{4}, \frac{1}{2}, \frac{7}{8}, 1\frac{1}{2}, 1\frac{3}{4}$$

