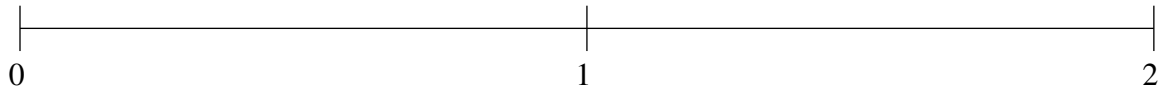


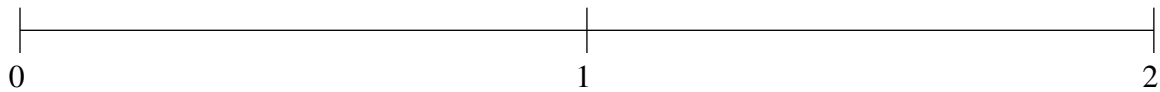
Ordering Fractions (C)

Order each set of fractions using the number line.

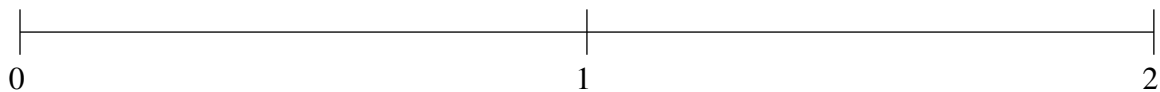
$$\frac{1}{4}, \frac{7}{8}, 1\frac{5}{12}, \frac{1}{2}, 1\frac{2}{3}$$



$$\frac{1}{2}, 1\frac{1}{3}, \frac{1}{6}, \frac{3}{4}, 1\frac{2}{3}$$



$$\frac{3}{4}, 1\frac{1}{2}, 1\frac{3}{4}, \frac{1}{2}, 1\frac{1}{4}$$

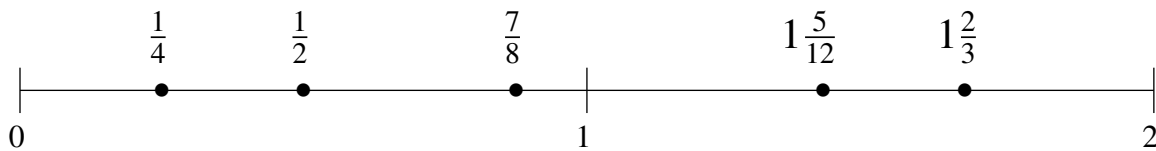


Ordering Fractions (C) Answers

Order each set of fractions using the number line.

$$\frac{1}{4}, \frac{7}{8}, 1\frac{5}{12}, \frac{1}{2}, 1\frac{2}{3}$$

$$\frac{1}{4}, \frac{1}{2}, \frac{7}{8}, 1\frac{5}{12}, 1\frac{2}{3}$$



$$\frac{1}{2}, 1\frac{1}{3}, \frac{1}{6}, \frac{3}{4}, 1\frac{2}{3}$$

$$\frac{1}{6}, \frac{1}{2}, \frac{3}{4}, 1\frac{1}{3}, 1\frac{2}{3}$$



$$\frac{3}{4}, 1\frac{1}{2}, 1\frac{3}{4}, \frac{1}{2}, 1\frac{1}{4}$$

$$\frac{1}{2}, \frac{3}{4}, 1\frac{1}{4}, 1\frac{1}{2}, 1\frac{3}{4}$$

