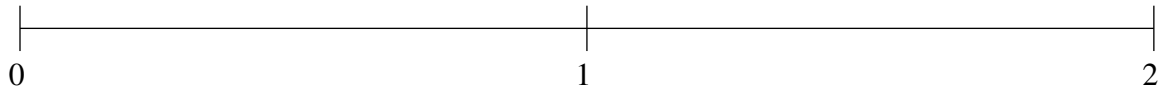


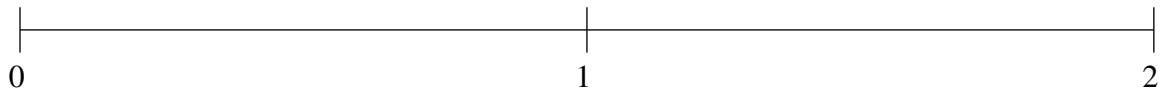
Ordering Fractions (F)

Order each set of fractions using the number line.

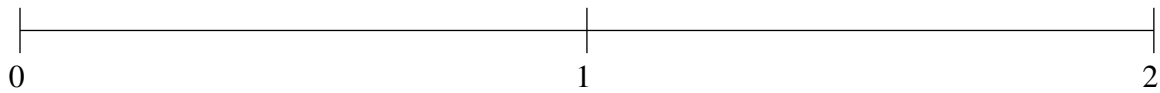
$$1\frac{3}{5}, 1\frac{1}{4}, 1\frac{6}{7}, \frac{13}{18}, \frac{5}{12}$$



$$\frac{3}{4}, \frac{1}{2}, 1\frac{1}{17}, 1\frac{3}{4}, 1\frac{1}{3}$$



$$\frac{3}{5}, \frac{1}{8}, 1\frac{1}{6}, 1\frac{2}{5}, 1\frac{13}{18}$$

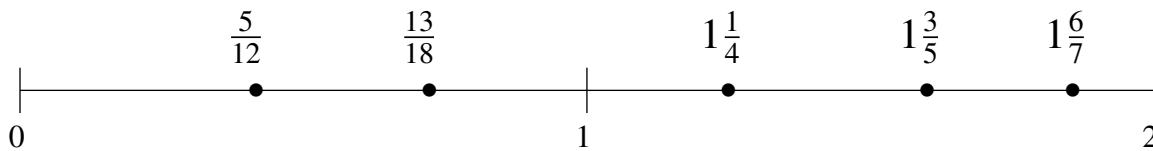


Ordering Fractions (F) Answers

Order each set of fractions using the number line.

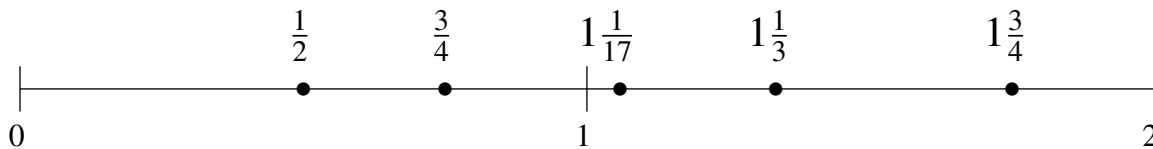
$$1\frac{3}{5}, 1\frac{1}{4}, 1\frac{6}{7}, \frac{13}{18}, \frac{5}{12}$$

$$\frac{5}{12}, \frac{13}{18}, 1\frac{1}{4}, 1\frac{3}{5}, 1\frac{6}{7}$$



$$\frac{3}{4}, \frac{1}{2}, 1\frac{1}{17}, 1\frac{3}{4}, 1\frac{1}{3}$$

$$\frac{1}{2}, \frac{3}{4}, 1\frac{1}{17}, 1\frac{1}{3}, 1\frac{3}{4}$$



$$\frac{3}{5}, \frac{1}{8}, 1\frac{1}{6}, 1\frac{2}{5}, 1\frac{13}{18}$$

$$\frac{1}{8}, \frac{3}{5}, 1\frac{1}{6}, 1\frac{2}{5}, 1\frac{13}{18}$$

