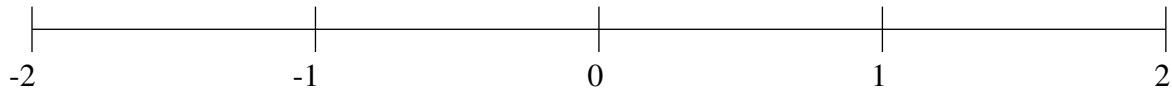


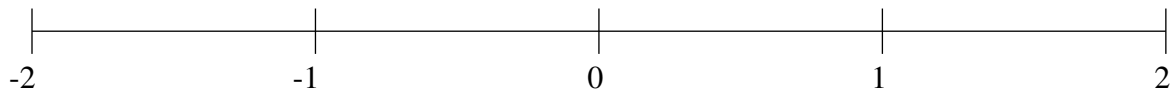
Ordering Fractions (G)

Order each set of fractions using the number line.

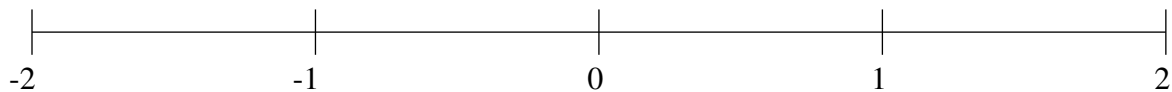
$$-\frac{3}{5}, \frac{1}{10}, -1\frac{4}{5}, 1\frac{1}{5}, 1\frac{4}{5}, -1\frac{1}{2}, -\frac{1}{5}, 1\frac{1}{2}$$



$$-\frac{1}{10}, 1\frac{4}{5}, \frac{1}{2}, -1\frac{1}{5}, -1\frac{3}{5}, -\frac{2}{5}, 1\frac{2}{5}, -1\frac{9}{10}$$



$$1\frac{4}{5}, \frac{4}{5}, -1\frac{1}{5}, \frac{1}{5}, -\frac{3}{5}, \frac{1}{2}, 1\frac{2}{5}, -1\frac{1}{2}$$

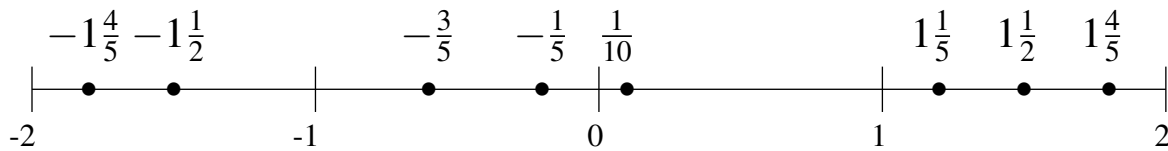


Ordering Fractions (G) Answers

Order each set of fractions using the number line.

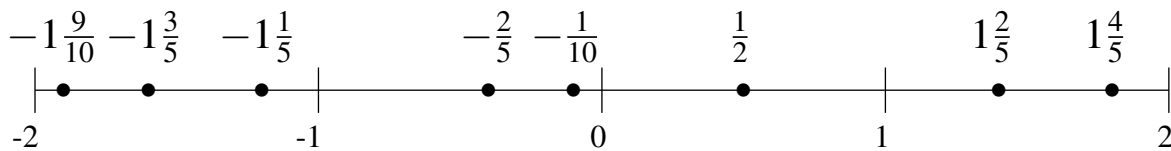
$$-\frac{3}{5}, \frac{1}{10}, -1\frac{4}{5}, 1\frac{1}{5}, 1\frac{4}{5}, -1\frac{1}{2}, -\frac{1}{5}, 1\frac{1}{2}$$

$$-1\frac{4}{5}, -1\frac{1}{2}, -\frac{3}{5}, -\frac{1}{5}, \frac{1}{10}, 1\frac{1}{5}, 1\frac{1}{2}, 1\frac{4}{5}$$



$$-\frac{1}{10}, 1\frac{4}{5}, \frac{1}{2}, -1\frac{1}{5}, -1\frac{3}{5}, -\frac{2}{5}, 1\frac{2}{5}, -1\frac{9}{10}$$

$$-1\frac{9}{10}, -1\frac{3}{5}, -1\frac{1}{5}, -\frac{2}{5}, -\frac{1}{10}, \frac{1}{2}, 1\frac{2}{5}, 1\frac{4}{5}$$



$$1\frac{4}{5}, \frac{4}{5}, -1\frac{1}{5}, \frac{1}{5}, -\frac{3}{5}, \frac{1}{2}, 1\frac{2}{5}, -1\frac{1}{2}$$

$$-1\frac{1}{2}, -1\frac{1}{5}, -\frac{3}{5}, \frac{1}{5}, \frac{1}{2}, \frac{4}{5}, 1\frac{2}{5}, 1\frac{4}{5}$$

