



Modeling Fourths (J)


Write the correct fraction for each model.




$$\frac{3}{4}$$




$$\frac{4}{4}$$




$$\frac{4}{4}$$




$$\frac{4}{4}$$




$$\frac{2}{4}$$




$$\frac{2}{4}$$




$$\frac{2}{4}$$



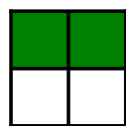
$$\frac{4}{4}$$




$$\frac{2}{4}$$




$$\frac{2}{4}$$




$$\frac{2}{4}$$




$$\frac{4}{4}$$




$$\frac{4}{4}$$



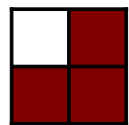
$$\frac{2}{4}$$



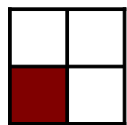
$$\frac{4}{4}$$




$$\frac{2}{4}$$



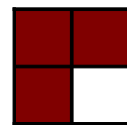
$$\frac{2}{4}$$




$$\frac{2}{4}$$




$$\frac{2}{4}$$




$$\frac{2}{4}$$




$$\frac{2}{4}$$




$$\frac{2}{4}$$



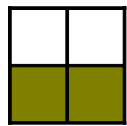
$$\frac{4}{4}$$




$$\frac{2}{4}$$



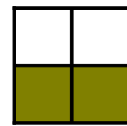
$$\frac{2}{4}$$



$$\frac{2}{4}$$



$$\frac{2}{4}$$



$$\frac{2}{4}$$