



# Modeling Fourths (J)


Write the correct fraction for each model.




$\frac{3}{4}$




$\frac{4}{4}$




$\frac{4}{4}$




$\frac{4}{4}$




—




—




—



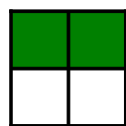
—




—




—




—




—




—



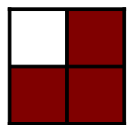
—



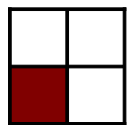
—




—



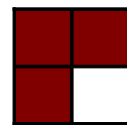
—




—




—




—




—




—



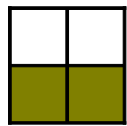
—




—



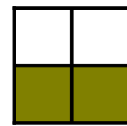
—



—




—




—

# Modeling Fourths (J) Answers


Write the correct fraction for each model.




$$\frac{3}{4}$$




$$\frac{2}{4}$$




$$\frac{4}{4}$$



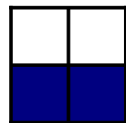
$$\frac{4}{4}$$




$$\frac{3}{4}$$




$$\frac{3}{4}$$




$$\frac{2}{4}$$



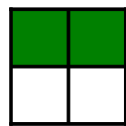
$$\frac{4}{4}$$




$$\frac{3}{4}$$




$$\frac{3}{4}$$




$$\frac{2}{4}$$




$$\frac{4}{4}$$




$$\frac{4}{4}$$




$$\frac{2}{4}$$



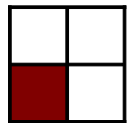
$$\frac{4}{4}$$



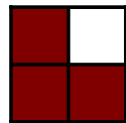
$$\frac{2}{4}$$



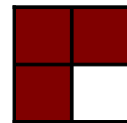
$$\frac{2}{4}$$




$$\frac{1}{4}$$




$$\frac{2}{4}$$




$$\frac{3}{4}$$




$$\frac{2}{4}$$




$$\frac{2}{4}$$




$$\frac{4}{4}$$




$$\frac{2}{4}$$



$$\frac{2}{4}$$



$$\frac{2}{4}$$



$$\frac{2}{4}$$



$$\frac{2}{4}$$