



Modeling Fourths (C)

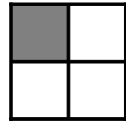
Write the correct fraction for each model.



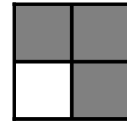
$\frac{4}{4}$




$\frac{2}{4}$





$\frac{1}{4}$

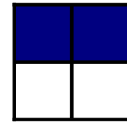



$\frac{2}{4}$







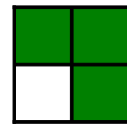

















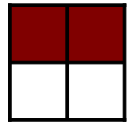


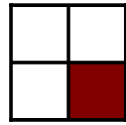


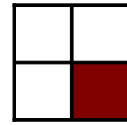











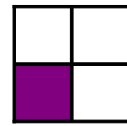


























Modeling Fourths (C) Answers

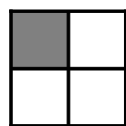
Write the correct fraction for each model.



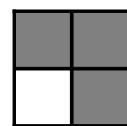
$$\frac{4}{4}$$




$$\frac{2}{4}$$




$$\frac{1}{4}$$



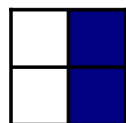
$$\frac{3}{4}$$



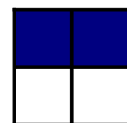
$$\frac{4}{4}$$




$$\frac{3}{4}$$




$$\frac{2}{4}$$




$$\frac{2}{4}$$



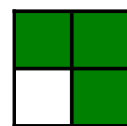
$$\frac{2}{4}$$




$$\frac{3}{4}$$




$$\frac{3}{4}$$




$$\frac{3}{4}$$




$$\frac{4}{4}$$




$$\frac{1}{4}$$



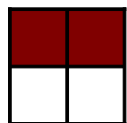
$$\frac{4}{4}$$



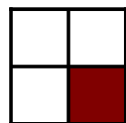
$$\frac{3}{4}$$



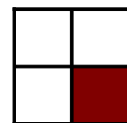
$$\frac{3}{4}$$




$$\frac{2}{4}$$




$$\frac{1}{4}$$




$$\frac{1}{4}$$




$$\frac{1}{4}$$




$$\frac{1}{4}$$




$$\frac{2}{4}$$




$$\frac{1}{4}$$




$$\frac{1}{4}$$



$$\frac{3}{4}$$



$$\frac{2}{4}$$



$$\frac{3}{4}$$