

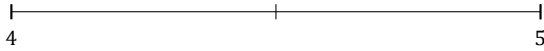
Rounding Mixed Numbers (A)

Name: _____

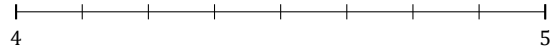
Date: _____

Round each mixed number to the nearest whole. Round up if it's a tie.

1. $4\frac{1}{2} \approx$



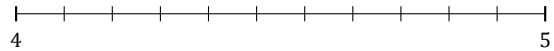
2. $4\frac{6}{8} \approx$



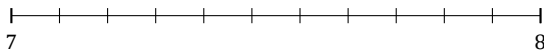
3. $6\frac{2}{5} \approx$



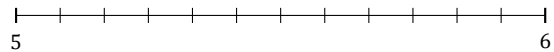
4. $4\frac{5}{11} \approx$




5. $7\frac{4}{11} \approx$



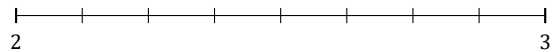
6. $5\frac{8}{12} \approx$




7. $6\frac{4}{7} \approx$



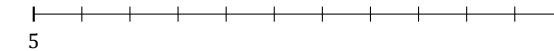
8. $2\frac{4}{8} \approx$



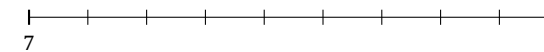
9. $6\frac{2}{3} \approx$



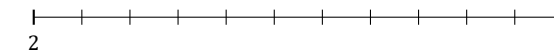
10. $5\frac{9}{11} \approx$



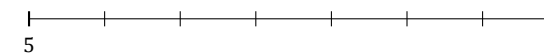
11. $7\frac{8}{9} \approx$



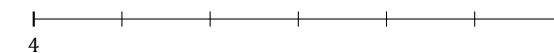
12. $2\frac{1}{11} \approx$



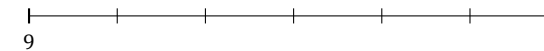
13. $5\frac{1}{7} \approx$



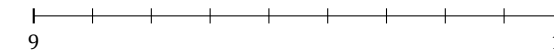
14. $4\frac{5}{6} \approx$



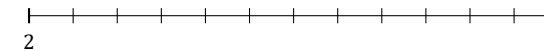
15. $9\frac{4}{6} \approx$



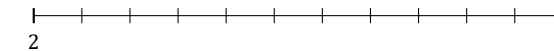
16. $9\frac{7}{9} \approx$



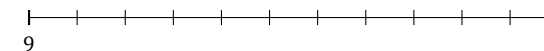
17. $2\frac{6}{12} \approx$



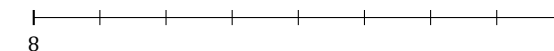
18. $2\frac{7}{11} \approx$



19. $9\frac{3}{11} \approx$



20. $8\frac{7}{8} \approx$



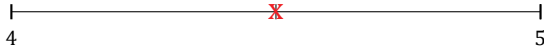
Rounding Mixed Numbers (A) Answers

Name: _____

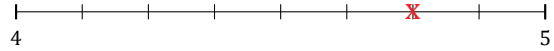
Date: _____

Round each mixed number to the nearest whole. Round up if it's a tie.

1. $4\frac{1}{2} \simeq 5$



2. $4\frac{6}{8} \simeq 5$



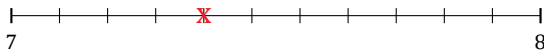
3. $6\frac{2}{5} \simeq 6$



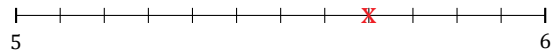
4. $4\frac{5}{11} \simeq 4$




5. $7\frac{4}{11} \simeq 7$



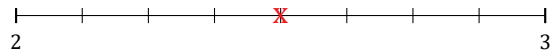
6. $5\frac{8}{12} \simeq 6$




7. $6\frac{4}{7} \simeq 7$



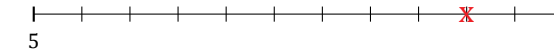
8. $2\frac{4}{8} \simeq 3$



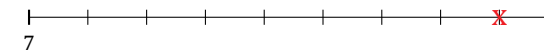
9. $6\frac{2}{3} \simeq 7$



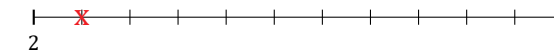
10. $5\frac{9}{11} \simeq 6$



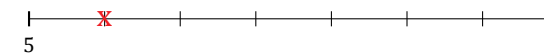
11. $7\frac{8}{9} \simeq 8$



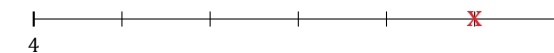
12. $2\frac{1}{11} \simeq 2$



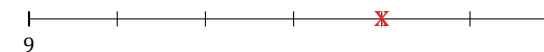
13. $5\frac{1}{7} \simeq 5$



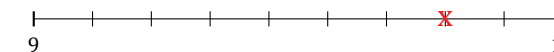
14. $4\frac{5}{6} \simeq 5$



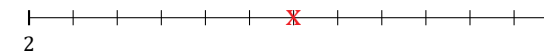
15. $9\frac{4}{6} \simeq 10$



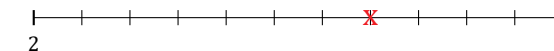
16. $9\frac{7}{9} \simeq 10$



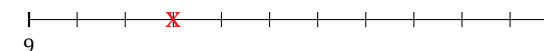
17. $2\frac{6}{12} \simeq 3$



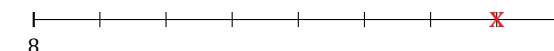
18. $2\frac{7}{11} \simeq 3$



19. $9\frac{3}{11} \simeq 9$



20. $8\frac{7}{8} \simeq 9$



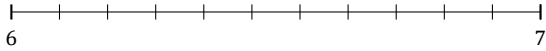
Rounding Mixed Numbers (B)

Name: _____

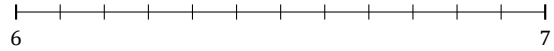
Date: _____

Round each mixed number to the nearest whole. Round up if it's a tie.

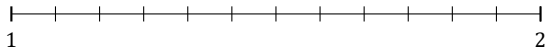
1. $6\frac{4}{11} \approx$



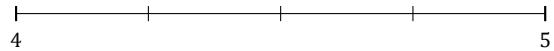
2. $6\frac{3}{12} \approx$



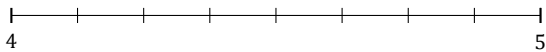
3. $1\frac{9}{12} \approx$



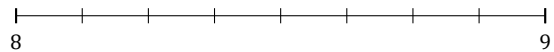
4. $4\frac{1}{4} \approx$



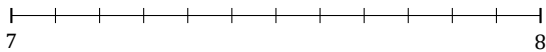
5. $4\frac{4}{8} \approx$



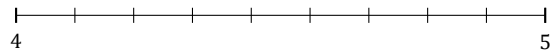
6. $8\frac{3}{8} \approx$




7. $7\frac{6}{12} \approx$




8. $4\frac{1}{9} \approx$



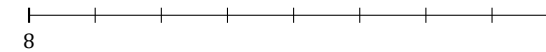
9. $3\frac{1}{5} \approx$



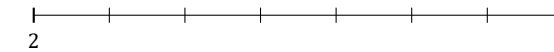
10. $8\frac{2}{3} \approx$



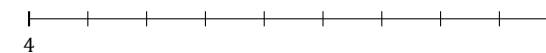
11. $8\frac{6}{8} \approx$



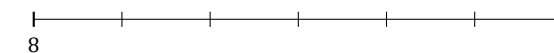
12. $2\frac{2}{7} \approx$



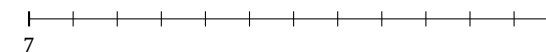
13. $4\frac{4}{9} \approx$




14. $8\frac{5}{6} \approx$



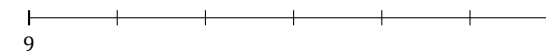
15. $7\frac{2}{12} \approx$



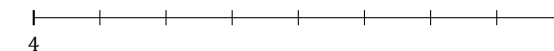
16. $6\frac{4}{5} \approx$



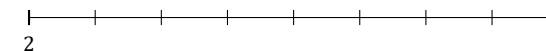
17. $9\frac{2}{6} \approx$



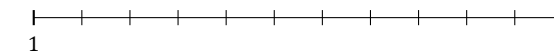
18. $4\frac{5}{8} \approx$



19. $2\frac{7}{8} \approx$



20. $1\frac{9}{11} \approx$



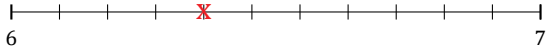
Rounding Mixed Numbers (B) Answers

Name: _____

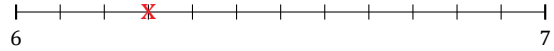
Date: _____

Round each mixed number to the nearest whole. Round up if it's a tie.

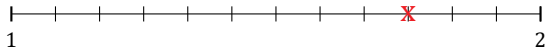
1. $6\frac{4}{11} \approx 6$



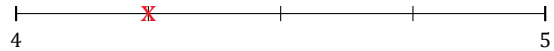
2. $6\frac{3}{12} \approx 6$



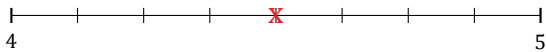
3. $1\frac{9}{12} \approx 2$



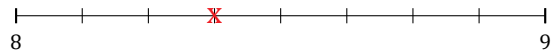
4. $4\frac{1}{4} \approx 4$



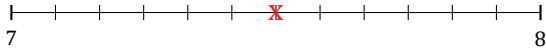
5. $4\frac{4}{8} \approx 5$



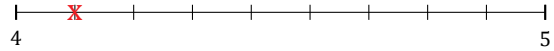
6. $8\frac{3}{8} \approx 8$




7. $7\frac{6}{12} \approx 8$




8. $4\frac{1}{9} \approx 4$



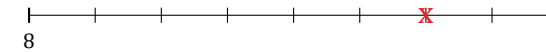
9. $3\frac{1}{5} \approx 3$



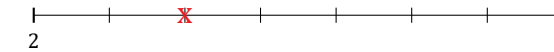
10. $8\frac{2}{3} \approx 9$



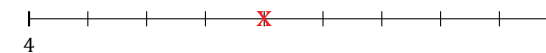
11. $8\frac{6}{8} \approx 9$



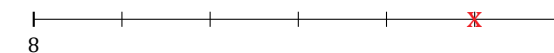
12. $2\frac{2}{7} \approx 2$



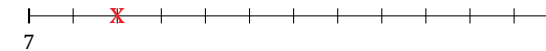
13. $4\frac{4}{9} \approx 4$




14. $8\frac{5}{6} \approx 9$



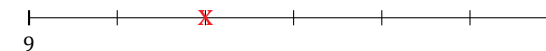
15. $7\frac{2}{12} \approx 7$



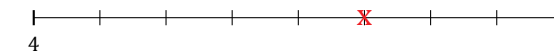
16. $6\frac{4}{5} \approx 7$



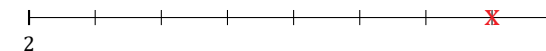
17. $9\frac{2}{6} \approx 9$



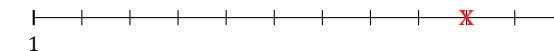
18. $4\frac{5}{8} \approx 5$



19. $2\frac{7}{8} \approx 3$



20. $1\frac{9}{11} \approx 2$



Rounding Mixed Numbers (C)

Name: _____

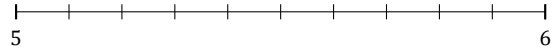
Date: _____

Round each mixed number to the nearest whole. Round up if it's a tie.

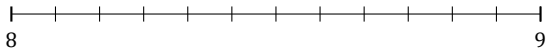
1. $8\frac{3}{7} \approx$



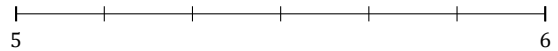
2. $5\frac{8}{10} \approx$




3. $8\frac{5}{12} \approx$



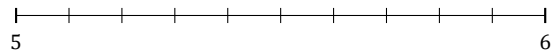
4. $5\frac{5}{6} \approx$



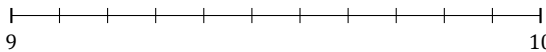
5. $5\frac{2}{3} \approx$



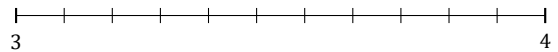
6. $5\frac{9}{10} \approx$



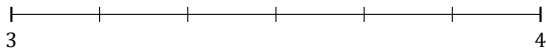
7. $9\frac{8}{11} \approx$



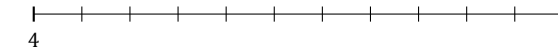
8. $3\frac{9}{11} \approx$



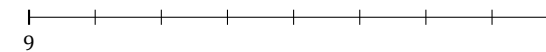
9. $3\frac{4}{6} \approx$



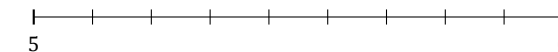
10. $4\frac{4}{11} \approx$



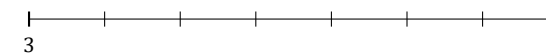
11. $9\frac{3}{8} \approx$



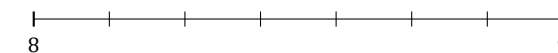
12. $5\frac{2}{9} \approx$



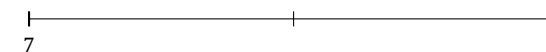
13. $3\frac{2}{7} \approx$



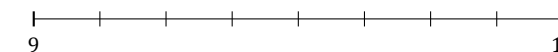
14. $8\frac{4}{7} \approx$



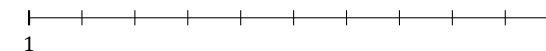
15. $7\frac{1}{2} \approx$



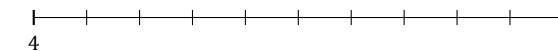
16. $9\frac{4}{8} \approx$



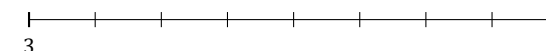
17. $1\frac{7}{10} \approx$



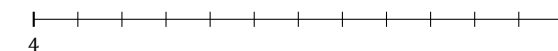
18. $4\frac{3}{10} \approx$



19. $3\frac{6}{8} \approx$



20. $4\frac{8}{12} \approx$



Rounding Mixed Numbers (C) Answers

Name: _____

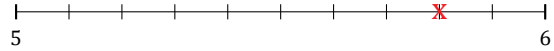
Date: _____

Round each mixed number to the nearest whole. Round up if it's a tie.

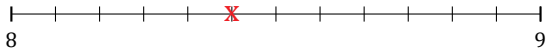
1. $8\frac{3}{7} \approx 8$



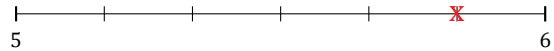
2. $5\frac{8}{10} \approx 6$




3. $8\frac{5}{12} \approx 8$



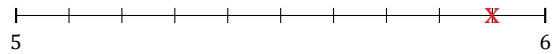
4. $5\frac{5}{6} \approx 6$



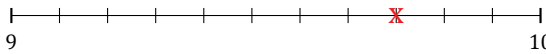
5. $5\frac{2}{3} \approx 6$



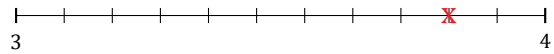
6. $5\frac{9}{10} \approx 6$



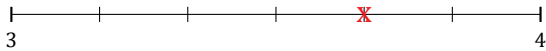
7. $9\frac{8}{11} \approx 10$



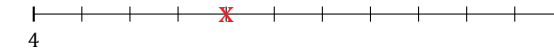
8. $3\frac{9}{11} \approx 4$



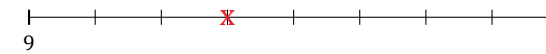
9. $3\frac{4}{6} \approx 4$



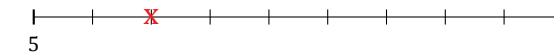
10. $4\frac{4}{11} \approx 4$



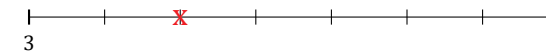
11. $9\frac{3}{8} \approx 9$



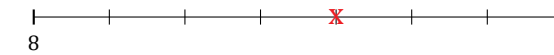
12. $5\frac{2}{9} \approx 5$



13. $3\frac{2}{7} \approx 3$



14. $8\frac{4}{7} \approx 9$



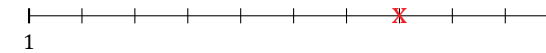
15. $7\frac{1}{2} \approx 8$



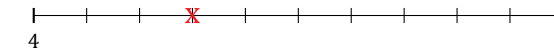
16. $9\frac{4}{8} \approx 10$



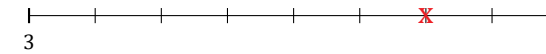
17. $1\frac{7}{10} \approx 2$



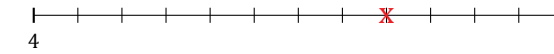
18. $4\frac{3}{10} \approx 4$



19. $3\frac{6}{8} \approx 4$



20. $4\frac{8}{12} \approx 5$



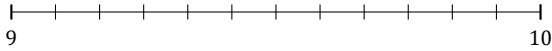
Rounding Mixed Numbers (D)

Name: _____

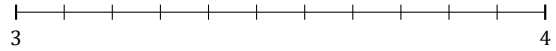
Date: _____

Round each mixed number to the nearest whole. Round up if it's a tie.

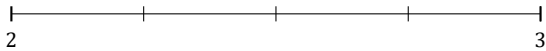
1. $9\frac{3}{12} \approx$



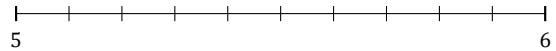
2. $3\frac{5}{11} \approx$



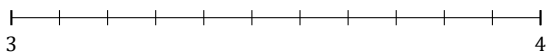
3. $2\frac{1}{4} \approx$



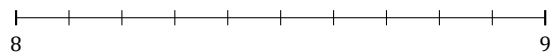
4. $5\frac{4}{10} \approx$



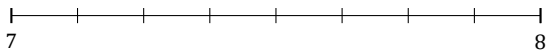
5. $3\frac{9}{11} \approx$



6. $8\frac{1}{10} \approx$



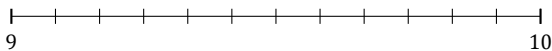
7. $7\frac{3}{8} \approx$



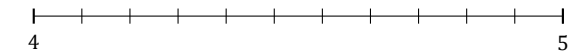
8. $5\frac{1}{5} \approx$



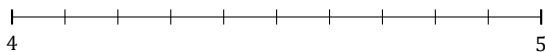
9. $9\frac{7}{12} \approx$



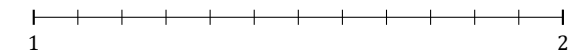
10. $4\frac{1}{11} \approx$



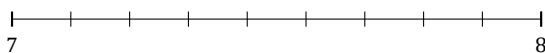
11. $4\frac{8}{10} \approx$



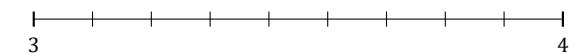
12. $1\frac{2}{12} \approx$



13. $7\frac{2}{9} \approx$



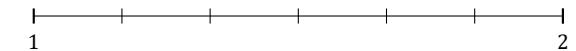
14. $3\frac{8}{9} \approx$



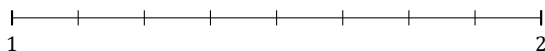
15. $6\frac{5}{9} \approx$



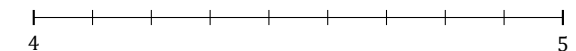
16. $1\frac{2}{6} \approx$



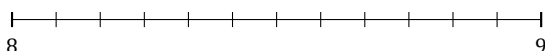
17. $1\frac{2}{8} \approx$



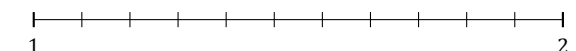
18. $4\frac{6}{9} \approx$



19. $8\frac{10}{12} \approx$



20. $1\frac{2}{11} \approx$



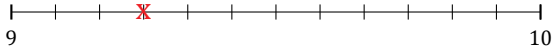
Rounding Mixed Numbers (D) Answers

Name: _____

Date: _____

Round each mixed number to the nearest whole. Round up if it's a tie.

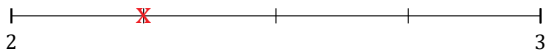
1. $9\frac{3}{12} \approx 9$



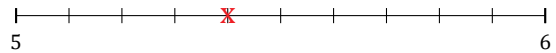
2. $3\frac{5}{11} \approx 3$



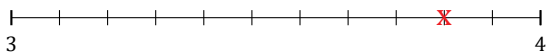
3. $2\frac{1}{4} \approx 2$



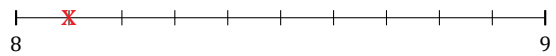
4. $5\frac{4}{10} \approx 5$



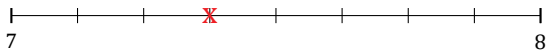
5. $3\frac{9}{11} \approx 4$




6. $8\frac{1}{10} \approx 8$



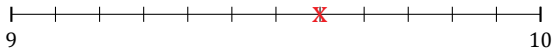
7. $7\frac{3}{8} \approx 7$



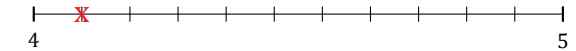
8. $5\frac{1}{5} \approx 5$



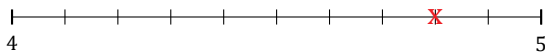
9. $9\frac{7}{12} \approx 10$



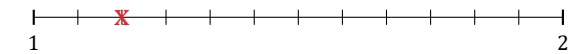
10. $4\frac{1}{11} \approx 4$



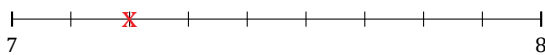
11. $4\frac{8}{10} \approx 5$



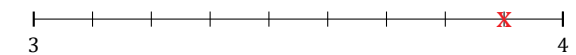
12. $1\frac{2}{12} \approx 1$



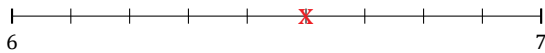
13. $7\frac{2}{9} \approx 7$



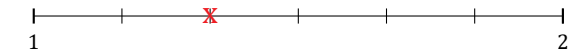
14. $3\frac{8}{9} \approx 4$



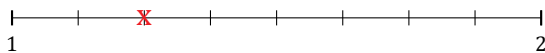
15. $6\frac{5}{9} \approx 7$



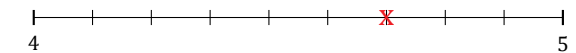
16. $1\frac{2}{6} \approx 1$



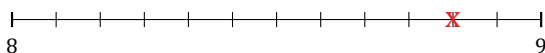
17. $1\frac{2}{8} \approx 1$



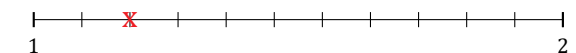
18. $4\frac{6}{9} \approx 5$



19. $8\frac{10}{12} \approx 9$



20. $1\frac{2}{11} \approx 1$



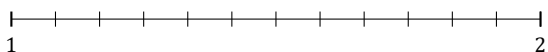
Rounding Mixed Numbers (E)

Name: _____

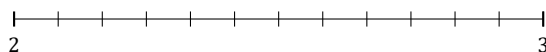
Date: _____

Round each mixed number to the nearest whole. Round up if it's a tie.

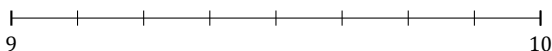
1. $1\frac{2}{12} \approx$



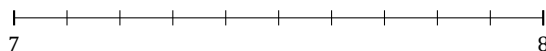
2. $2\frac{9}{12} \approx$



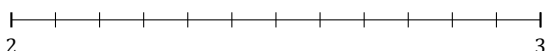
3. $9\frac{5}{8} \approx$



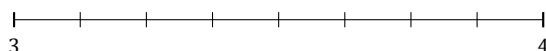
4. $7\frac{7}{10} \approx$




5. $2\frac{5}{12} \approx$




6. $3\frac{4}{8} \approx$



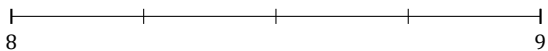
7. $8\frac{3}{7} \approx$



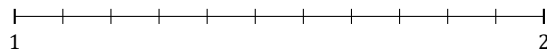
8. $2\frac{4}{7} \approx$



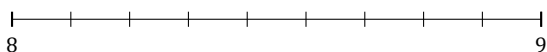
9. $8\frac{2}{4} \approx$



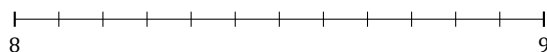
10. $1\frac{4}{11} \approx$



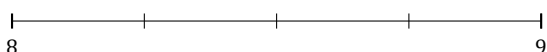
11. $8\frac{2}{9} \approx$



12. $8\frac{8}{12} \approx$



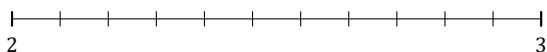
13. $8\frac{3}{4} \approx$



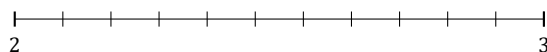
14. $6\frac{4}{5} \approx$



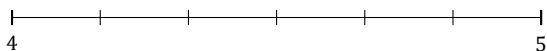
15. $2\frac{3}{11} \approx$



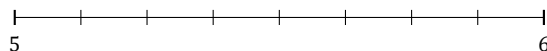
16. $2\frac{5}{11} \approx$




17. $4\frac{2}{6} \approx$



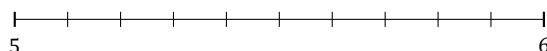
18. $5\frac{7}{8} \approx$



19. $8\frac{1}{7} \approx$



20. $5\frac{9}{10} \approx$



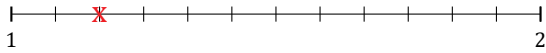
Rounding Mixed Numbers (E) Answers

Name: _____

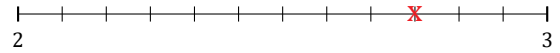
Date: _____

Round each mixed number to the nearest whole. Round up if it's a tie.

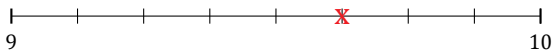
1. $1\frac{2}{12} \approx 1$



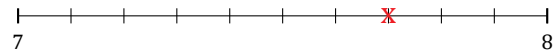
2. $2\frac{9}{12} \approx 3$



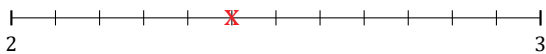
3. $9\frac{5}{8} \approx 10$



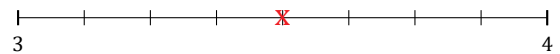
4. $7\frac{7}{10} \approx 8$




5. $2\frac{5}{12} \approx 2$




6. $3\frac{4}{8} \approx 4$



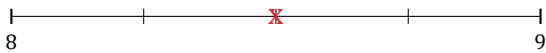
7. $8\frac{3}{7} \approx 8$



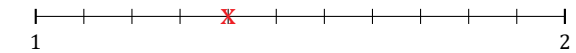
8. $2\frac{4}{7} \approx 3$



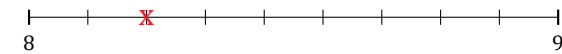
9. $8\frac{2}{4} \approx 9$



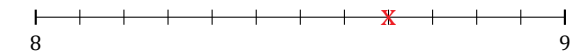
10. $1\frac{4}{11} \approx 1$



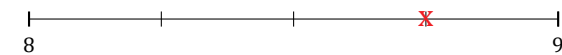
11. $8\frac{2}{9} \approx 8$



12. $8\frac{8}{12} \approx 9$



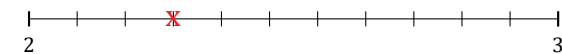
13. $8\frac{3}{4} \approx 9$



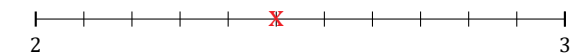
14. $6\frac{4}{5} \approx 7$



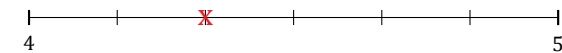
15. $2\frac{3}{11} \approx 2$



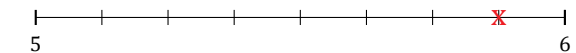
16. $2\frac{5}{11} \approx 2$



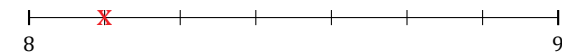
17. $4\frac{2}{6} \approx 4$



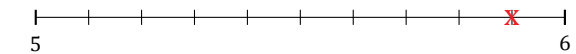
18. $5\frac{7}{8} \approx 6$



19. $8\frac{1}{7} \approx 8$



20. $5\frac{9}{10} \approx 6$



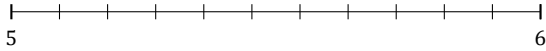
Rounding Mixed Numbers (F)

Name: _____

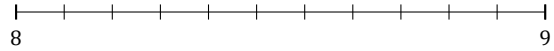
Date: _____

Round each mixed number to the nearest whole. Round up if it's a tie.

1. $5\frac{3}{11} \approx$



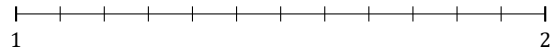
2. $8\frac{10}{11} \approx$



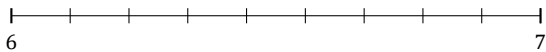
3. $9\frac{2}{3} \approx$



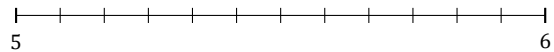
4. $1\frac{8}{12} \approx$



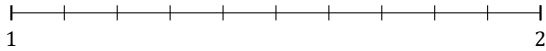
5. $6\frac{6}{9} \approx$



6. $5\frac{2}{12} \approx$




7. $1\frac{5}{10} \approx$



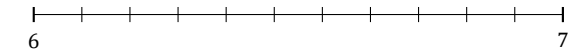
8. $1\frac{1}{7} \approx$



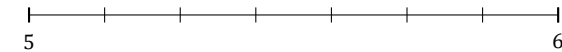
9. $7\frac{5}{9} \approx$



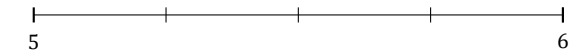
10. $6\frac{5}{11} \approx$



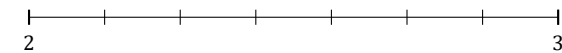
11. $5\frac{6}{7} \approx$



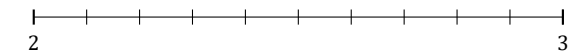
12. $5\frac{3}{4} \approx$



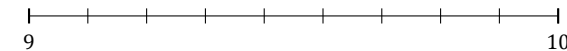
13. $2\frac{5}{7} \approx$



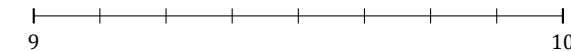
14. $2\frac{4}{10} \approx$



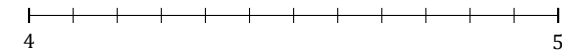
15. $9\frac{1}{9} \approx$



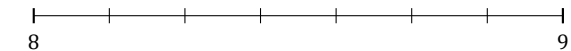
16. $9\frac{4}{8} \approx$



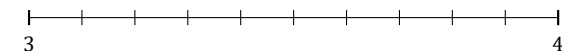
17. $4\frac{3}{12} \approx$



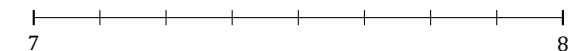
18. $8\frac{4}{7} \approx$



19. $3\frac{2}{10} \approx$



20. $7\frac{3}{8} \approx$



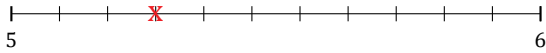
Rounding Mixed Numbers (F) Answers

Name: _____

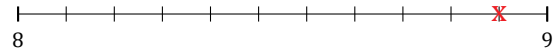
Date: _____

Round each mixed number to the nearest whole. Round up if it's a tie.

1. $5\frac{3}{11} \approx 5$



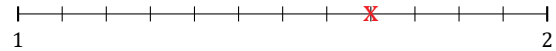
2. $8\frac{10}{11} \approx 9$



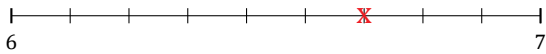
3. $9\frac{2}{3} \approx 10$



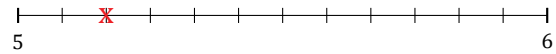
4. $1\frac{8}{12} \approx 2$



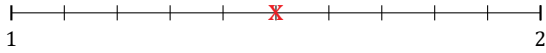
5. $6\frac{6}{9} \approx 7$



6. $5\frac{2}{12} \approx 5$



7. $1\frac{5}{10} \approx 2$



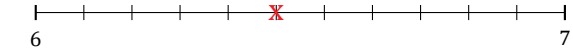
8. $1\frac{1}{7} \approx 1$



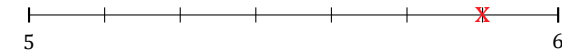
9. $7\frac{5}{9} \approx 8$



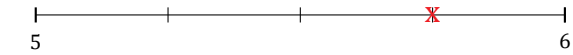
10. $6\frac{5}{11} \approx 6$



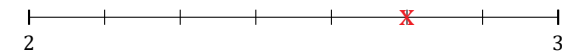
11. $5\frac{6}{7} \approx 6$



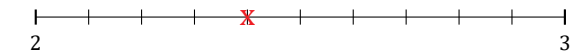
12. $5\frac{3}{4} \approx 6$



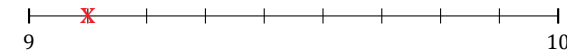
13. $2\frac{5}{7} \approx 3$



14. $2\frac{4}{10} \approx 2$



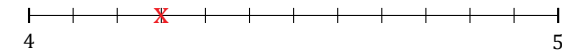
15. $9\frac{1}{9} \approx 9$



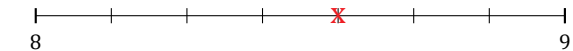
16. $9\frac{4}{8} \approx 10$



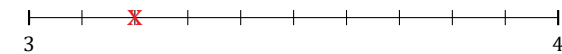
17. $4\frac{3}{12} \approx 4$



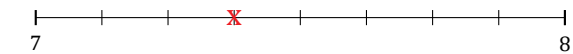
18. $8\frac{4}{7} \approx 9$



19. $3\frac{2}{10} \approx 3$



20. $7\frac{3}{8} \approx 7$



Rounding Mixed Numbers (G)

Name: _____

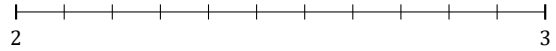
Date: _____

Round each mixed number to the nearest whole. Round up if it's a tie.

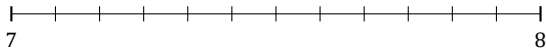
1. $2\frac{5}{7} \approx$



2. $2\frac{7}{11} \approx$



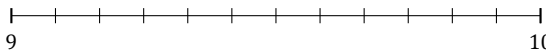
3. $7\frac{10}{12} \approx$



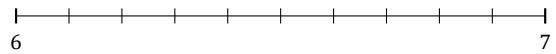
4. $8\frac{6}{7} \approx$



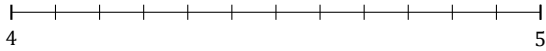
5. $9\frac{3}{12} \approx$



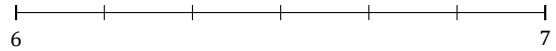
6. $6\frac{5}{10} \approx$




7. $4\frac{9}{12} \approx$



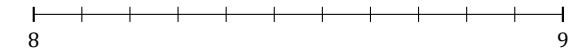
8. $6\frac{1}{6} \approx$



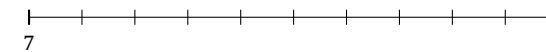
9. $3\frac{1}{5} \approx$



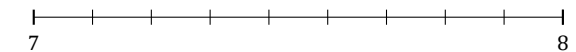
10. $8\frac{6}{11} \approx$



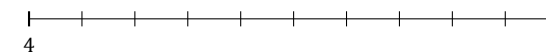
11. $7\frac{3}{10} \approx$




12. $7\frac{7}{9} \approx$



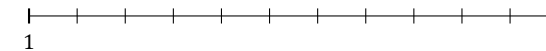
13. $4\frac{9}{10} \approx$



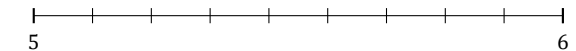
14. $2\frac{3}{7} \approx$



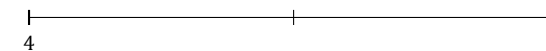
15. $1\frac{8}{11} \approx$



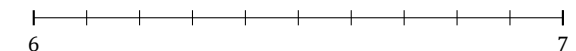
16. $5\frac{1}{9} \approx$



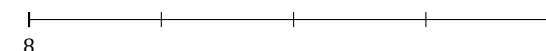
17. $4\frac{1}{2} \approx$



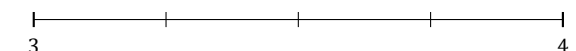
18. $6\frac{6}{10} \approx$



19. $8\frac{1}{4} \approx$



20. $3\frac{3}{4} \approx$



Rounding Mixed Numbers (G) Answers

Name: _____

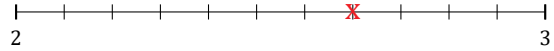
Date: _____

Round each mixed number to the nearest whole. Round up if it's a tie.

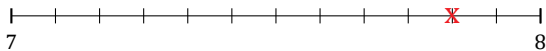
1. $2\frac{5}{7} \approx 3$



2. $2\frac{7}{11} \approx 3$



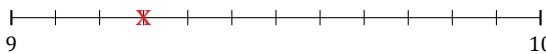
3. $7\frac{10}{12} \approx 8$



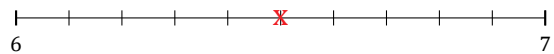
4. $8\frac{6}{7} \approx 9$



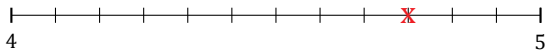
5. $9\frac{3}{12} \approx 9$



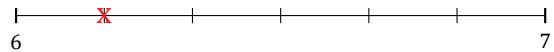
6. $6\frac{5}{10} \approx 7$




7. $4\frac{9}{12} \approx 5$



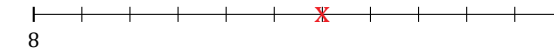
8. $6\frac{1}{6} \approx 6$



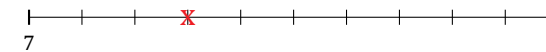
9. $3\frac{1}{5} \approx 3$



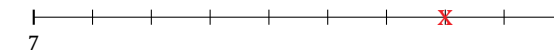
10. $8\frac{6}{11} \approx 9$



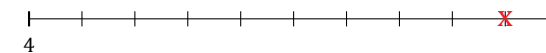
11. $7\frac{3}{10} \approx 7$



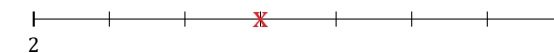
12. $7\frac{7}{9} \approx 8$



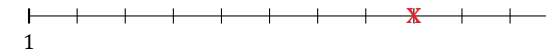
13. $4\frac{9}{10} \approx 5$



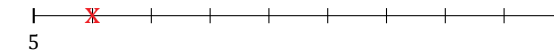
14. $2\frac{3}{7} \approx 2$



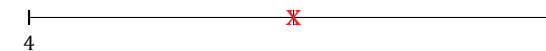
15. $1\frac{8}{11} \approx 2$



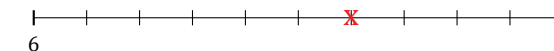
16. $5\frac{1}{9} \approx 5$



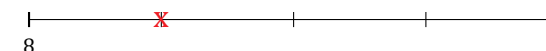
17. $4\frac{1}{2} \approx 5$



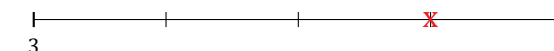
18. $6\frac{6}{10} \approx 7$



19. $8\frac{1}{4} \approx 8$



20. $3\frac{3}{4} \approx 4$



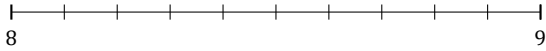
Rounding Mixed Numbers (H)

Name: _____

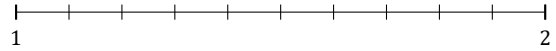
Date: _____

Round each mixed number to the nearest whole. Round up if it's a tie.

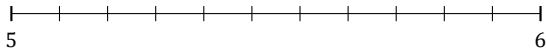
1. $8\frac{2}{10} \approx$



2. $1\frac{4}{10} \approx$



3. $5\frac{10}{11} \approx$



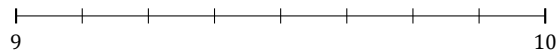
4. $1\frac{4}{9} \approx$



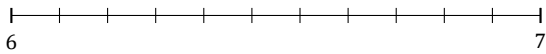
5. $1\frac{2}{5} \approx$



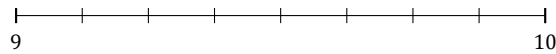
6. $9\frac{5}{8} \approx$



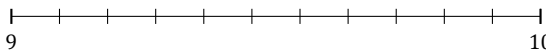
7. $6\frac{7}{11} \approx$



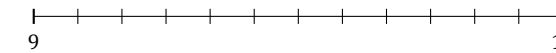
8. $9\frac{2}{8} \approx$



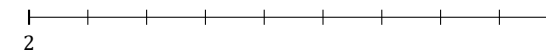
9. $9\frac{1}{11} \approx$



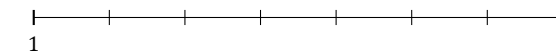
10. $9\frac{3}{12} \approx$



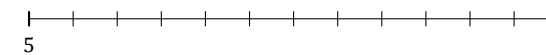
11. $2\frac{8}{9} \approx$



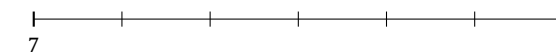
12. $1\frac{5}{7} \approx$



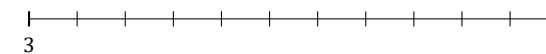
13. $5\frac{1}{12} \approx$



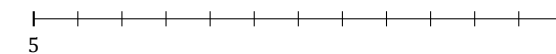
14. $7\frac{2}{6} \approx$



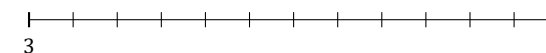
15. $3\frac{9}{11} \approx$



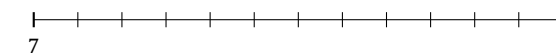
16. $5\frac{5}{12} \approx$



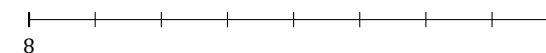
17. $3\frac{10}{12} \approx$



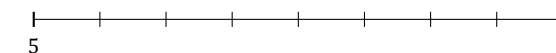
18. $7\frac{2}{12} \approx$



19. $8\frac{1}{8} \approx$



20. $5\frac{3}{8} \approx$



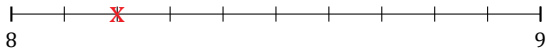
Rounding Mixed Numbers (H) Answers

Name: _____

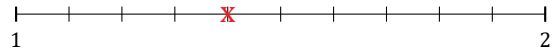
Date: _____

Round each mixed number to the nearest whole. Round up if it's a tie.

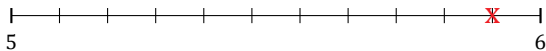
1. $8\frac{2}{10} \approx 8$



2. $1\frac{4}{10} \approx 1$




3. $5\frac{10}{11} \approx 6$



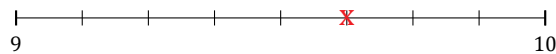
4. $1\frac{4}{9} \approx 1$



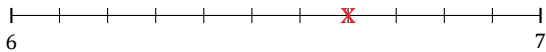
5. $1\frac{2}{5} \approx 1$



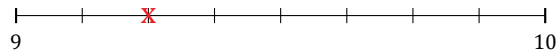
6. $9\frac{5}{8} \approx 10$



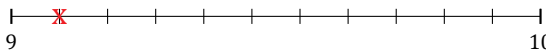
7. $6\frac{7}{11} \approx 7$



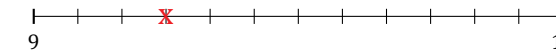
8. $9\frac{2}{8} \approx 9$



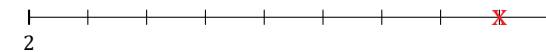
9. $9\frac{1}{11} \approx 9$



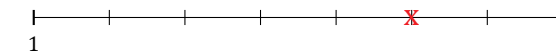
10. $9\frac{3}{12} \approx 9$



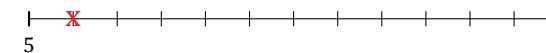
11. $2\frac{8}{9} \approx 3$



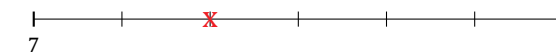
12. $1\frac{5}{7} \approx 2$



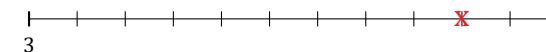
13. $5\frac{1}{12} \approx 5$



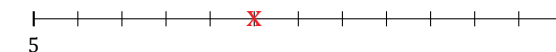
14. $7\frac{2}{6} \approx 7$



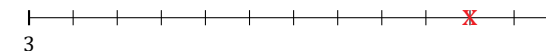
15. $3\frac{9}{11} \approx 4$



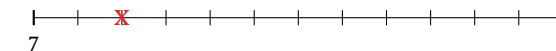
16. $5\frac{5}{12} \approx 5$



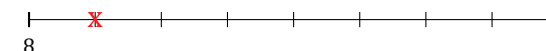
17. $3\frac{10}{12} \approx 4$



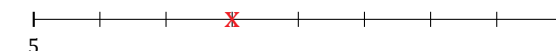
18. $7\frac{2}{12} \approx 7$



19. $8\frac{1}{8} \approx 8$



20. $5\frac{3}{8} \approx 5$



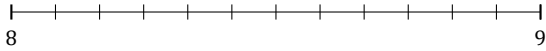
Rounding Mixed Numbers (I)

Name: _____

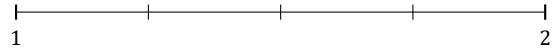
Date: _____

Round each mixed number to the nearest whole. Round up if it's a tie.

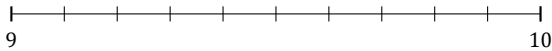
1. $8\frac{9}{12} \approx$



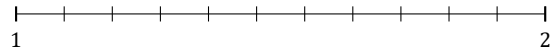
2. $1\frac{1}{4} \approx$



3. $9\frac{3}{10} \approx$



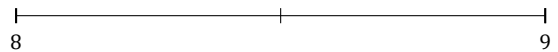
4. $1\frac{6}{11} \approx$



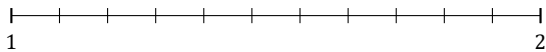
5. $3\frac{1}{7} \approx$



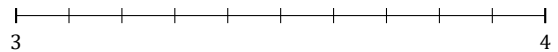
6. $8\frac{1}{2} \approx$



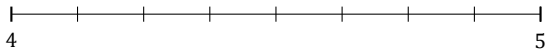
7. $1\frac{8}{11} \approx$



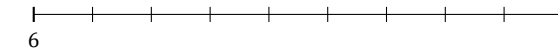
8. $3\frac{9}{10} \approx$




9. $4\frac{2}{8} \approx$



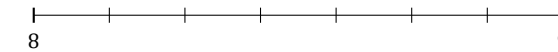
10. $6\frac{2}{9} \approx$



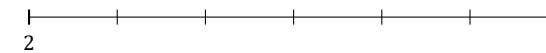
11. $1\frac{1}{5} \approx$



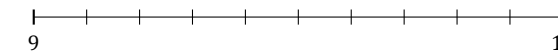
12. $8\frac{3}{7} \approx$



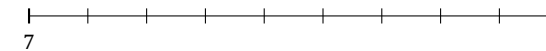
13. $2\frac{1}{6} \approx$



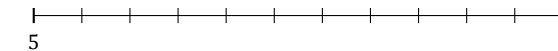
14. $9\frac{4}{10} \approx$



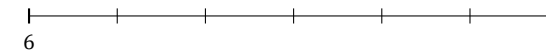
15. $7\frac{6}{9} \approx$



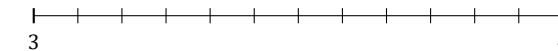
16. $5\frac{7}{11} \approx$



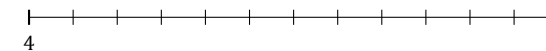
17. $6\frac{5}{6} \approx$



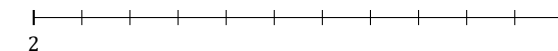
18. $3\frac{1}{12} \approx$



19. $4\frac{8}{12} \approx$



20. $2\frac{3}{11} \approx$



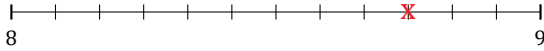
Rounding Mixed Numbers (I) Answers

Name: _____

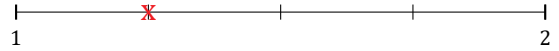
Date: _____

Round each mixed number to the nearest whole. Round up if it's a tie.

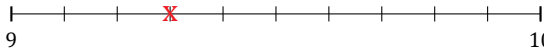
1. $8\frac{9}{12} \simeq 9$



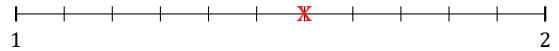
2. $1\frac{1}{4} \simeq 1$



3. $9\frac{3}{10} \simeq 9$



4. $1\frac{6}{11} \simeq 2$



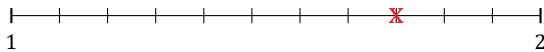
5. $3\frac{1}{7} \simeq 3$



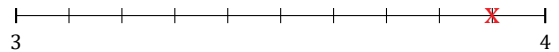
6. $8\frac{1}{2} \simeq 9$



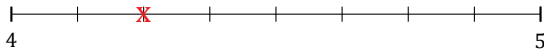
7. $1\frac{8}{11} \simeq 2$



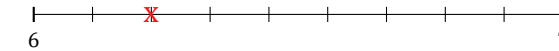
8. $3\frac{9}{10} \simeq 4$




9. $4\frac{2}{8} \simeq 4$




10. $6\frac{2}{9} \simeq 6$



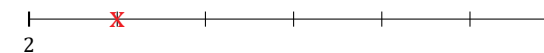
11. $1\frac{1}{5} \simeq 1$



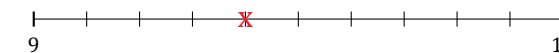
12. $8\frac{3}{7} \simeq 8$



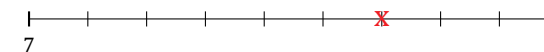
13. $2\frac{1}{6} \simeq 2$



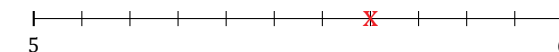
14. $9\frac{4}{10} \simeq 9$



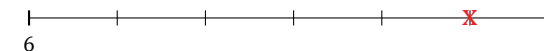
15. $7\frac{6}{9} \simeq 8$



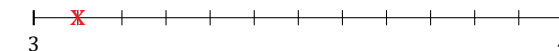
16. $5\frac{7}{11} \simeq 6$



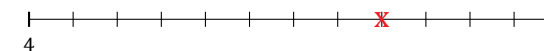
17. $6\frac{5}{6} \simeq 7$



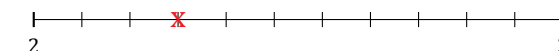
18. $3\frac{1}{12} \simeq 3$



19. $4\frac{8}{12} \simeq 5$



20. $2\frac{3}{11} \simeq 2$



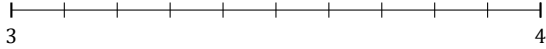
Rounding Mixed Numbers (J)

Name: _____

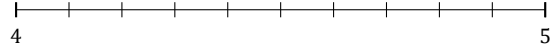
Date: _____

Round each mixed number to the nearest whole. Round up if it's a tie.

1. $3\frac{9}{10} \approx$



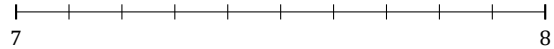
2. $4\frac{7}{10} \approx$



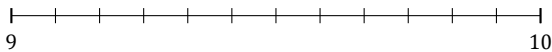
3. $9\frac{2}{3} \approx$



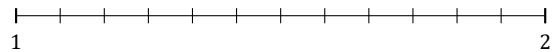
4. $7\frac{6}{10} \approx$



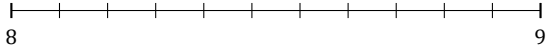
5. $9\frac{4}{12} \approx$




6. $1\frac{7}{12} \approx$



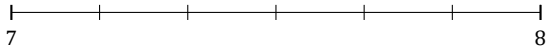
7. $8\frac{6}{11} \approx$



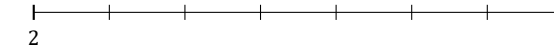
8. $5\frac{2}{5} \approx$



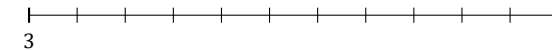
9. $7\frac{1}{6} \approx$



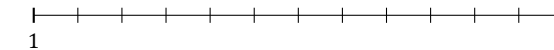
10. $2\frac{4}{7} \approx$



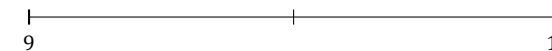
11. $3\frac{9}{11} \approx$



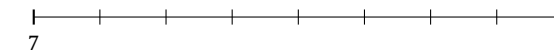
12. $1\frac{2}{12} \approx$



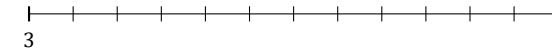
13. $9\frac{1}{2} \approx$



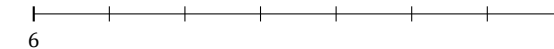
14. $7\frac{7}{8} \approx$



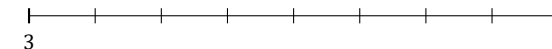
15. $3\frac{6}{12} \approx$



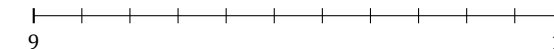
16. $6\frac{6}{7} \approx$



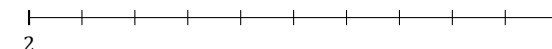
17. $3\frac{3}{8} \approx$



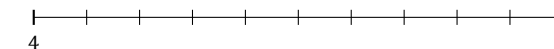
18. $9\frac{8}{11} \approx$



19. $2\frac{8}{10} \approx$



20. $4\frac{1}{10} \approx$



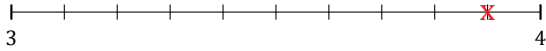
Rounding Mixed Numbers (J) Answers

Name: _____

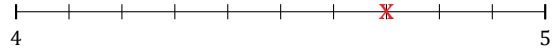
Date: _____

Round each mixed number to the nearest whole. Round up if it's a tie.

1. $3\frac{9}{10} \approx 4$



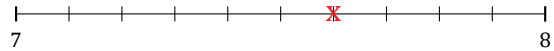
2. $4\frac{7}{10} \approx 5$



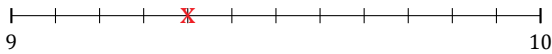
3. $9\frac{2}{3} \approx 10$



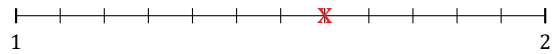
4. $7\frac{6}{10} \approx 8$



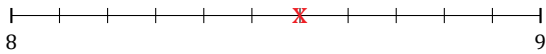
5. $9\frac{4}{12} \approx 9$




6. $1\frac{7}{12} \approx 2$



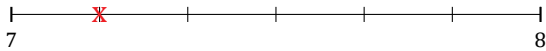
7. $8\frac{6}{11} \approx 9$



8. $5\frac{2}{5} \approx 5$



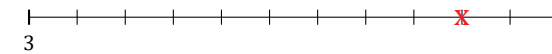
9. $7\frac{1}{6} \approx 7$



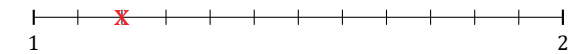
10. $2\frac{4}{7} \approx 3$



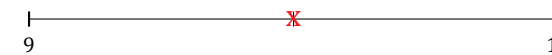
11. $3\frac{9}{11} \approx 4$



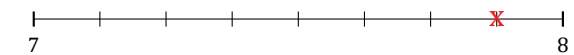
12. $1\frac{2}{12} \approx 1$



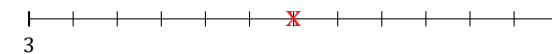
13. $9\frac{1}{2} \approx 10$



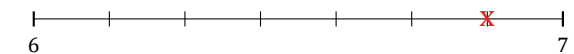
14. $7\frac{7}{8} \approx 8$



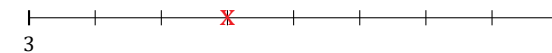
15. $3\frac{6}{12} \approx 4$



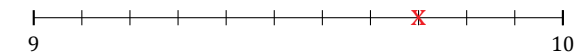
16. $6\frac{6}{7} \approx 7$



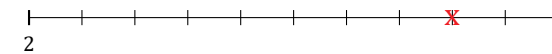
17. $3\frac{3}{8} \approx 3$



18. $9\frac{8}{11} \approx 10$



19. $2\frac{8}{10} \approx 3$



20. $4\frac{1}{10} \approx 4$

