

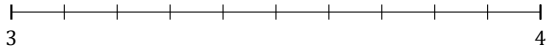
Rounding Mixed Numbers (J)

Name: _____

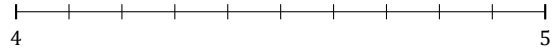
Date: _____

Round each mixed number to the nearest whole. Round up if it's a tie.

1. $3\frac{9}{10} \approx$



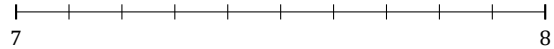
2. $4\frac{7}{10} \approx$



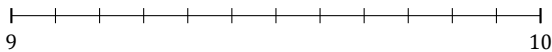
3. $9\frac{2}{3} \approx$



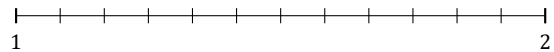
4. $7\frac{6}{10} \approx$



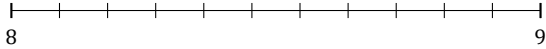
5. $9\frac{4}{12} \approx$




6. $1\frac{7}{12} \approx$



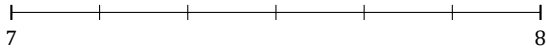
7. $8\frac{6}{11} \approx$



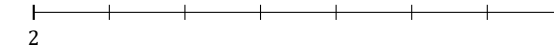
8. $5\frac{2}{5} \approx$



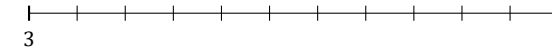
9. $7\frac{1}{6} \approx$



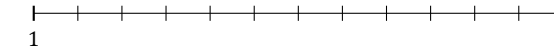
10. $2\frac{4}{7} \approx$



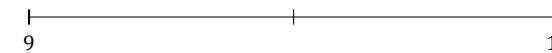
11. $3\frac{9}{11} \approx$



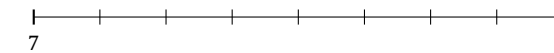
12. $1\frac{2}{12} \approx$



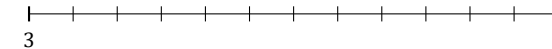
13. $9\frac{1}{2} \approx$



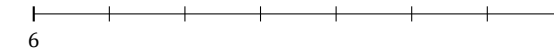
14. $7\frac{7}{8} \approx$



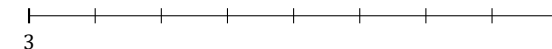
15. $3\frac{6}{12} \approx$



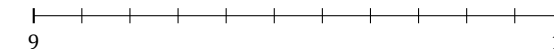
16. $6\frac{6}{7} \approx$



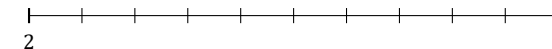
17. $3\frac{3}{8} \approx$



18. $9\frac{8}{11} \approx$



19. $2\frac{8}{10} \approx$



20. $4\frac{1}{10} \approx$

