

Rounding Mixed Numbers (G)

Name: _____

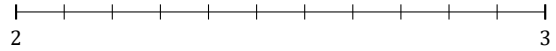
Date: _____

Round each mixed number to the nearest whole. Round up if it's a tie.

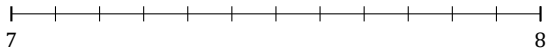
1. $2\frac{5}{7} \approx$



2. $2\frac{7}{11} \approx$



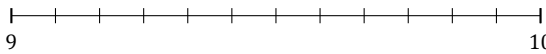
3. $7\frac{10}{12} \approx$



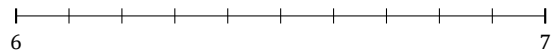
4. $8\frac{6}{7} \approx$



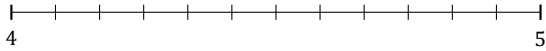
5. $9\frac{3}{12} \approx$



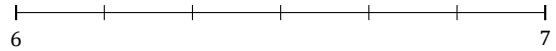
6. $6\frac{5}{10} \approx$




7. $4\frac{9}{12} \approx$



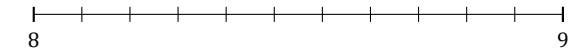
8. $6\frac{1}{6} \approx$



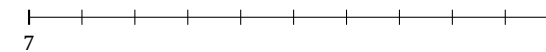
9. $3\frac{1}{5} \approx$



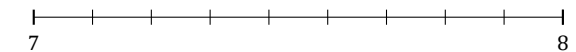
10. $8\frac{6}{11} \approx$



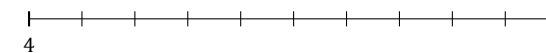
11. $7\frac{3}{10} \approx$




12. $7\frac{7}{9} \approx$



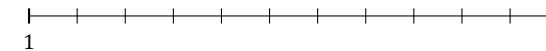
13. $4\frac{9}{10} \approx$



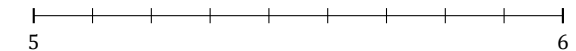
14. $2\frac{3}{7} \approx$



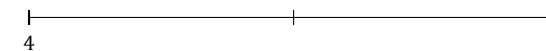
15. $1\frac{8}{11} \approx$



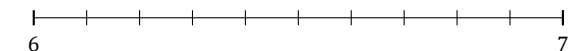
16. $5\frac{1}{9} \approx$



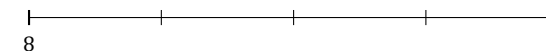
17. $4\frac{1}{2} \approx$



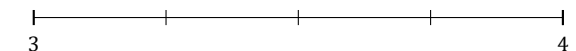
18. $6\frac{6}{10} \approx$



19. $8\frac{1}{4} \approx$



20. $3\frac{3}{4} \approx$



Rounding Mixed Numbers (G) Answers

Name: _____

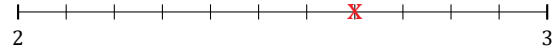
Date: _____

Round each mixed number to the nearest whole. Round up if it's a tie.

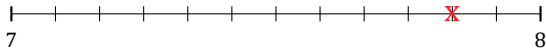
1. $2\frac{5}{7} \approx 3$



2. $2\frac{7}{11} \approx 3$



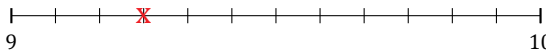
3. $7\frac{10}{12} \approx 8$



4. $8\frac{6}{7} \approx 9$



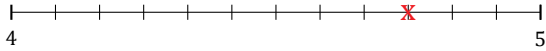
5. $9\frac{3}{12} \approx 9$



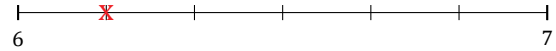
6. $6\frac{5}{10} \approx 7$




7. $4\frac{9}{12} \approx 5$



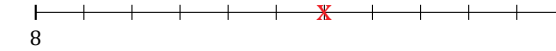
8. $6\frac{1}{6} \approx 6$



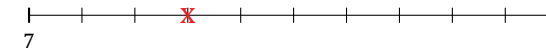
9. $3\frac{1}{5} \approx 3$



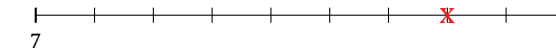
10. $8\frac{6}{11} \approx 9$



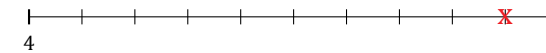
11. $7\frac{3}{10} \approx 7$



12. $7\frac{7}{9} \approx 8$



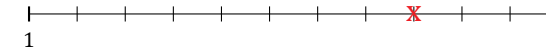
13. $4\frac{9}{10} \approx 5$



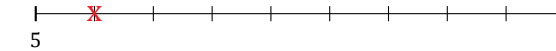
14. $2\frac{3}{7} \approx 2$



15. $1\frac{8}{11} \approx 2$



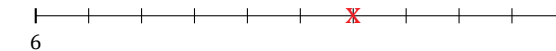
16. $5\frac{1}{9} \approx 5$



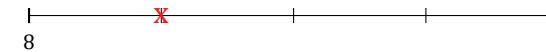
17. $4\frac{1}{2} \approx 5$



18. $6\frac{6}{10} \approx 7$



19. $8\frac{1}{4} \approx 8$



20. $3\frac{3}{4} \approx 4$

