

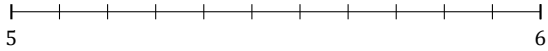
Rounding Mixed Numbers (F)

Name: _____

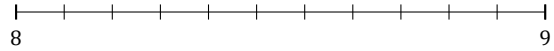
Date: _____

Round each mixed number to the nearest whole. Round up if it's a tie.

1. $5\frac{3}{11} \approx$



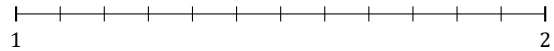
2. $8\frac{10}{11} \approx$



3. $9\frac{2}{3} \approx$



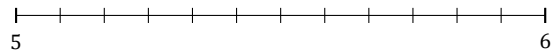
4. $1\frac{8}{12} \approx$



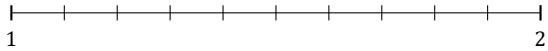
5. $6\frac{6}{9} \approx$



6. $5\frac{2}{12} \approx$




7. $1\frac{5}{10} \approx$



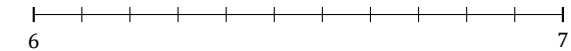
8. $1\frac{1}{7} \approx$



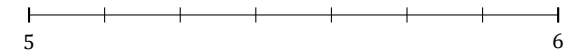
9. $7\frac{5}{9} \approx$



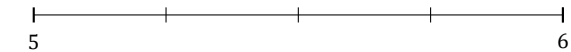
10. $6\frac{5}{11} \approx$



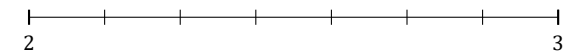
11. $5\frac{6}{7} \approx$



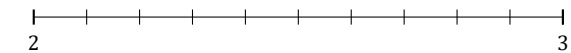
12. $5\frac{3}{4} \approx$



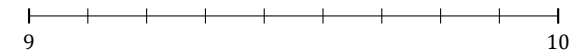
13. $2\frac{5}{7} \approx$



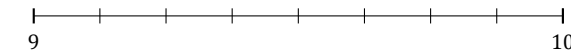
14. $2\frac{4}{10} \approx$



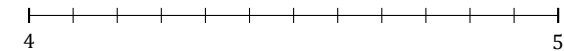
15. $9\frac{1}{9} \approx$



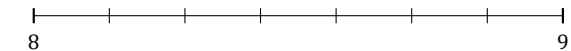
16. $9\frac{4}{8} \approx$



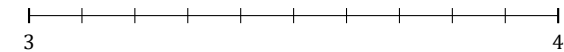
17. $4\frac{3}{12} \approx$



18. $8\frac{4}{7} \approx$



19. $3\frac{2}{10} \approx$



20. $7\frac{3}{8} \approx$

