

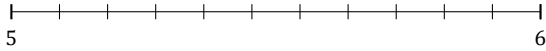
# Rounding Mixed Numbers (F)

Name: \_\_\_\_\_

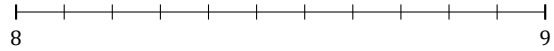
Date: \_\_\_\_\_

Round each mixed number to the nearest whole. Round up if it's a tie.

1.  $5\frac{3}{11} \approx$



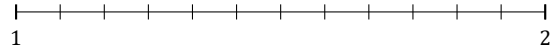
2.  $8\frac{10}{11} \approx$



3.  $9\frac{2}{3} \approx$



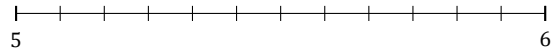
4.  $1\frac{8}{12} \approx$



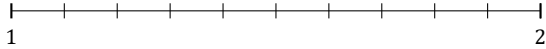
5.  $6\frac{6}{9} \approx$




6.  $5\frac{2}{12} \approx$



7.  $1\frac{5}{10} \approx$



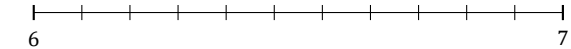
8.  $1\frac{1}{7} \approx$



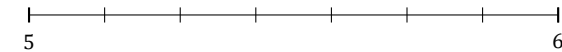
9.  $7\frac{5}{9} \approx$



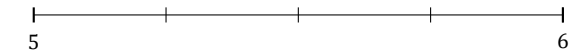
10.  $6\frac{5}{11} \approx$



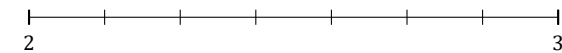
11.  $5\frac{6}{7} \approx$



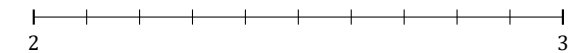
12.  $5\frac{3}{4} \approx$



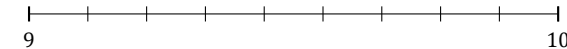
13.  $2\frac{5}{7} \approx$



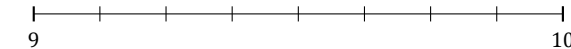
14.  $2\frac{4}{10} \approx$



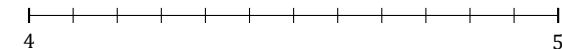
15.  $9\frac{1}{9} \approx$



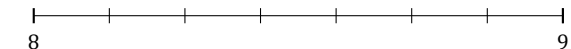
16.  $9\frac{4}{8} \approx$



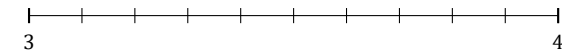
17.  $4\frac{3}{12} \approx$



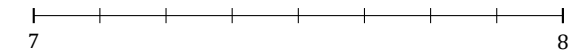
18.  $8\frac{4}{7} \approx$



19.  $3\frac{2}{10} \approx$



20.  $7\frac{3}{8} \approx$



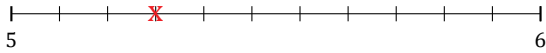
# Rounding Mixed Numbers (F) Answers

Name: \_\_\_\_\_

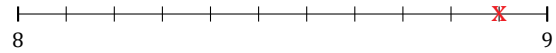
Date: \_\_\_\_\_

Round each mixed number to the nearest whole. Round up if it's a tie.

1.  $5\frac{3}{11} \approx 5$



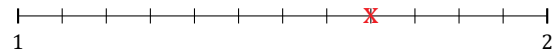
2.  $8\frac{10}{11} \approx 9$



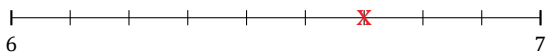
3.  $9\frac{2}{3} \approx 10$



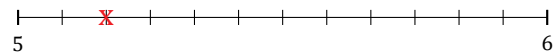
4.  $1\frac{8}{12} \approx 2$



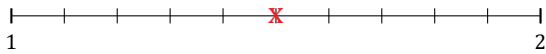
5.  $6\frac{6}{9} \approx 7$




6.  $5\frac{2}{12} \approx 5$



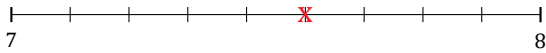
7.  $1\frac{5}{10} \approx 2$



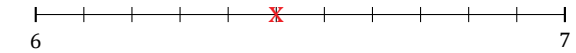
8.  $1\frac{1}{7} \approx 1$



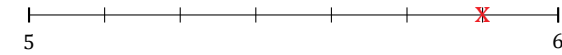
9.  $7\frac{5}{9} \approx 8$



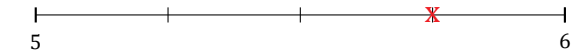
10.  $6\frac{5}{11} \approx 6$



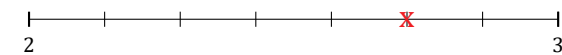
11.  $5\frac{6}{7} \approx 6$



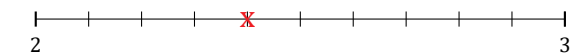
12.  $5\frac{3}{4} \approx 6$



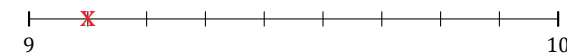
13.  $2\frac{5}{7} \approx 3$



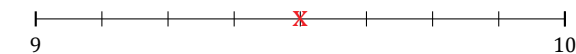
14.  $2\frac{4}{10} \approx 2$



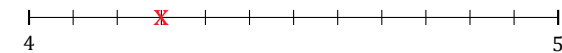
15.  $9\frac{1}{9} \approx 9$



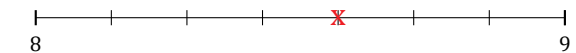
16.  $9\frac{4}{8} \approx 10$



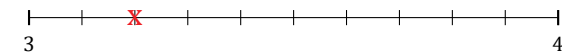
17.  $4\frac{3}{12} \approx 4$



18.  $8\frac{4}{7} \approx 9$



19.  $3\frac{2}{10} \approx 3$



20.  $7\frac{3}{8} \approx 7$

