

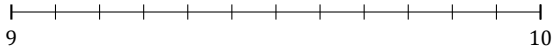
Rounding Mixed Numbers (D)

Name: _____

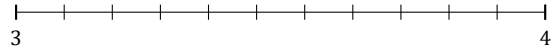
Date: _____

Round each mixed number to the nearest whole. Round up if it's a tie.

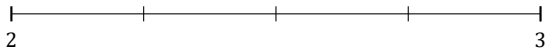
1. $9\frac{3}{12} \approx$



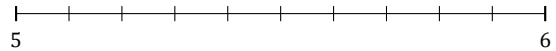
2. $3\frac{5}{11} \approx$



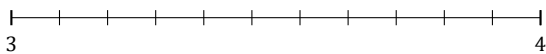
3. $2\frac{1}{4} \approx$



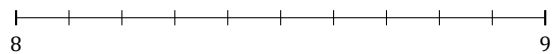
4. $5\frac{4}{10} \approx$



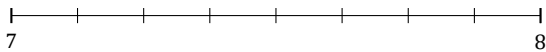
5. $3\frac{9}{11} \approx$




6. $8\frac{1}{10} \approx$



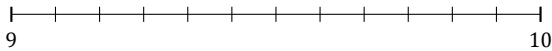
7. $7\frac{3}{8} \approx$



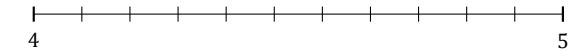
8. $5\frac{1}{5} \approx$



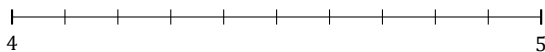
9. $9\frac{7}{12} \approx$



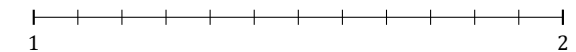
10. $4\frac{1}{11} \approx$



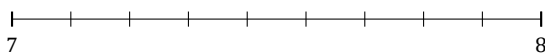
11. $4\frac{8}{10} \approx$



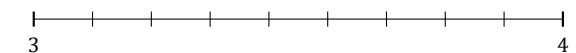
12. $1\frac{2}{12} \approx$



13. $7\frac{2}{9} \approx$



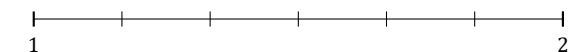
14. $3\frac{8}{9} \approx$



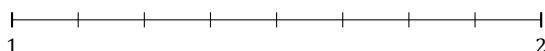
15. $6\frac{5}{9} \approx$



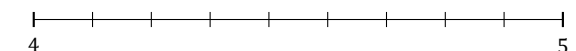
16. $1\frac{2}{6} \approx$



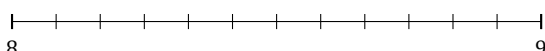
17. $1\frac{2}{8} \approx$



18. $4\frac{6}{9} \approx$



19. $8\frac{10}{12} \approx$



20. $1\frac{2}{11} \approx$

